

Ithute ka ga Molaotheo wa Rephaboleki ya Afrika Borwa (1996)

Molaotheo wa Afrika Borwa (1996) ke molao o o kwa godimo wa lefatshe. Molao o o kwa godingwana go na le Moporesidente, o kwa godingwana go na le dikgotlatshekelo e bile o kwa godingwana go na le mmuso.

O tthalosa ka moo batho ba lefatshe la rona ba tshwanetseng go tshola ba bangwe ka teng, le gore ditshwanelo le maikarabelo a bona ke eng. Molaotheo wa lefatshe o teng go re sireletsa rotlhe jaanong, le bana ba rona ka moso.

Ela tlhoko hisetori ya rona.

A re se keng ra boeletsa diphoso tsa hisetori ya rona.

Molaotheo wa rona o re thusa go akanya le go aga bokamoso jo bo botoka jwa botlhe.

Rona, re le batho ba Afrika Borwa;

Re itse ditshiamololo tsa rona tse di fetileng;

Re tlotla ba ba bogetseng tshiamo le kgololosego mo lefatshe la rona;

Re tlotla ba ba diretseng go aga le go tlhabolola naga ya rona; mme

Re dumela gore Afrika Borwa ke ya botlhe ba ba tshelang mo go yona, re tshwaragane mo go farologaneng ga rona.

Rona ka jalo, ka baemedi ba re ba itlhophetseng ka kgololosego, re amogela Molaotheo o jaaka Molaomogolo wa Rephaboliki gore re—

alafe dikgogakogano tse di fetileng mme re age Setšhaba se se thailweng mo meetlong ya demokerasi, bosiamisi mo bathong le ditshwanelo tse di botlhokwa tsa botho;

tlhame metheo ya demokerasi le bosetšhaba jo bo buletsweng botlhe jo mo go bona puso e theilweng, mo thatong ya batho e bile moagi mongwe le mongwe a sireleditsweng ka go lekana ke molao;

tokafatse matshelo a baagi botlhe le go golola neo ya mongwe le mongwe le;

age Afrika Borwa e kopaneng ya demokerasi e e kgonang go tsaya maemo a yona a a e siametseng jaaka naga e e ipusang mo tshikeng ya mafatshe.

Senka ditshwanelo tsa gago jaaka Moafrikaborwa mme o tseye maikarabelo a gago a go sireletsa ditshwanelo tsa batho ba bangwe.

Itse Molaotlhomu wa Ditshwanelo & Molaotlhomu wa Maikarabelo.

May God protect our people.

Nkosi Sikelel' iAfrika. Morena boloka setjhaba sa heso.

God seën Suid-Afrika. God bless South Africa.

Mudzimu fhatutshedza Afurika. Hosi katekisa Afrika.

ISBN 978-1-4315-0000-0



9 781431 500000



**MATHEMATICS IN SETSWANA
GRADE 2 – BOOK 1**

TERMS 1 & 2

ISBN 978-1-4315-0000-0

THIS BOOK MAY NOT BE SOLD.

14th Edition



DIPALO KA SETSWANA – Mophato 2 Buka 1

ISBN 978-1-4315-0000-0

E tlhabolotswe e bile e tsamaelana le PPKT



Leina:

Tlelase:



basic education

Department:
Basic Education
REPUBLIC OF SOUTH AFRICA



DIPALO KA SETSWANA

Buka 1
Kgweditharo
1 & 2



Diteng

No.	Setlhogo	Ts.
1	Nna le balelapa la me	2
2	Go bala	4
3	Dipalo	6
4	Dipalo gape	8
5	Go tlhakanya le go ntsha	10
6	Go arolelana le tšhelete	12
7	Dipaterone/Diphethene	14
8	Dibopego	16
9	Dibolo le mabokoso	18
10	Boleele	20
11	Boima kana mmase	22
12	Mothamo	24
13	Nako	26
14	Khalentara ya malatsi a botsalo	28
15	Kokoanya mme o tlhaole	30
16	Buisa mme o tlhalose	32
17	Pele, morago le magareng	34
18	Dipalo 1 – 30	36
19	Melapalo	38
20	Melapalo e mengwe gape	40
21	Go tlhakanya le go ntsha	42
22	Malatsi, dibeke le dikgwedi	44
23a	Go tlhakanya	46
23b	Go ntsha	48
24	Go tlhakanya	50
25	Madi kgotsa tšhelete	52
26	Tšhelete ya pampiri	54
27	Dipaterone	56
28	Dipaterone	58
29	Katiso: $\times 2$	60
30	Katiso: $\times 5$	62
31	Dikgang tse dingwe tsa go atisa	64
32	Dilo tsa matlhakore a 3	66

No.	Setlhogo	Ts.
33	Rulaganya o bo o bapisa dinomere: 1 – 40	68
34	Rulaganya mme o bapise: 40 – 50	70
35	Dipalo 40 – 50	72
36	Dikwere, dikhutlonnetsepa, dikhutlotharo le didiko	74
37	Go tlhakanya le go ntsha go fitlha ka 20	76
38	Go tlhakanya le go ntsha go fitlha ka 50	78
39a	Go tlhakanya gape	80
39b	Go tlhakanya gape (tswelotso)	82
40	Boleele	84
41	Go ntsha	86
42a	Go ntsha gape	88
42b	Go ntsha go gongwe gape (tswelotso)	90
43	Bokete le botlhofo	92
44	Dipateronepalo: Bo-pedi	94
45	Oketsa gabedi	96
46	Oketsa gabedi gape	98
47	Oketsa gabedi	100
48	Tswelotso ya go oketsa gabedi	102
49	Diduti le mothamo	104
50	Katiso: $\times 3$	106
51	Dipateronepalo: Botharo	108
52	Katiso: $\times 4$	110
53	Dipateronepalo: Bonne	112
54	Dikgang tsa go atisa	114
55	Diura	116
56	Dipateronepalo: Botlhano	118
57a	Metsotso	120
57b	Metsotso gape	122
58	Go bopa ditlhophla le go aroganya	124
59	Go bopa ditlhophla le go aroganya gape	126
60	Go bopa ditlhophla le go aroganya gape	128
61	Go bopa ditlhophla le go aroganya gape	130
62	Dihalofa: 1 – 20	132
63	Go aroganya 20 – 50	134
64	Tshedimosetso	136
	Se-se-segilweng 1	
	Se-se-segilweng 2	



Mme Angie Motshekga,
Tona ya Lefapha
la Thutotheo



Ng. Reginah Mhaule,
Motlatsatona wa
Lefapha la Thutotheo


Dibukatiro tse di kwaletswa bana ba Aforikaborwa ka fa tlase ga boeteledipele jwa Tona ya Lefapha la Thutotheo. Mme Angie Motshekga le Motlatsatona wa Lefapha la Thutotheo, Ng. Reginah Mhaule.

Dibukatiro tsa Rainbow ke phitlhelelo nngwe ya Lefapha la Thutotheo e e lebisitsweng mo go tokafatseng bokgoni jwa barutwana ba Aforikaborwa ba mephato e merataro ya ntlha jaaka e le maikaelelomagolo a Lenaneotiro la Puso. Porojeke e, e etleeditse ke Lefapha la matlotlo la Bosetshaba. Ketleetso e, e kgontshitse Lefapha go kwala le go rebola dibukatiro tse mo dipuong tsothe tsa semmuso kwa ntle go tuelo epe.

Re solofela gore dibukatiro tse di tlaa tswela barutabana mosola mo go ruteng ga bona ga letsatsi le letsatsi, le mo go netefatseng gore barutwana ba digela kharikhulamo ya bona. Re netefaditse gore re kaela morutabana sentle mo tirong nngwe le nngwe ka go tsenyeletsa mesupatsela go bontsha gore ke eng se morutwana a tshwanetseng go se dira.

Re solofela gore bana ba tlaa itumelela go dira mo bukeng e fa ba ntse ba gola e bile ba ithuta, le gore wena jaaka morutabana, o tlaa abelana le bona boitumelo jwa bona o tlaa e itumelela mmogo le bona.

Re go eleletsa katlego e kgolo mo tirisong ya dibukatiro tse, wena le barutwana ba gago.



Mophato 2



M a t t e s s i s i
KA GETSWANA

Buka e, ke ya ga:



SETSWANA

Buka



Letlha:

Nna le balelapa la me

Ke na le dingwaga di le robedi.



Nomoro ya ntlo ya rona ke 12.



Ke nna yo monnye mo lelapeng la rona.



Ke na le boasi ba babedi.



Rre o na le dingwaga di le 32.



Tlatsa dikarabo tsa dipotso tse di ka ga wena le balelapa la gaeno.

Leina la me ke _____ .

Ke na le dingwaga di le _____ .

Dingwaga di le pedi tse di fetileng ke ne ke na le dingwaga di le _____ .

Ngwaga o o tlang ke tlaa bo ke na le dingwaga di le _____ .

Ke nna kwa _____ .

Ke mang yo mogolo mo lelapeng la gaeno? _____ .

Kwala gore o na le dingwaga di le kae _____ .

Ke mang yo monnye mo lelapeng la gaeno? _____ .

Kwala gore o na le dingwaga di le kae _____ .

Letlha la gompiano ke _____ .



Leina la me ke. Thala setshwantsho sa balelapa la gaeno.

A large, empty rectangular box with a dashed border, intended for drawing or writing.

A row of numbers for tracing, starting with a pencil icon. The numbers are 1, 2, 3, 4, 5, 6, 7, 8, and 9, each formed by a grid of dots.




Teacher:
Sign:
Date:

Go bala



Tlatsa diphatlha tse di se nang sepe.

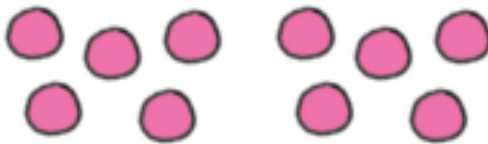


matlho




2

maronthorontho



dipetšhe



matlho

maronthorontho

dipetšhe



matlho

maronthorontho

dipetšhe





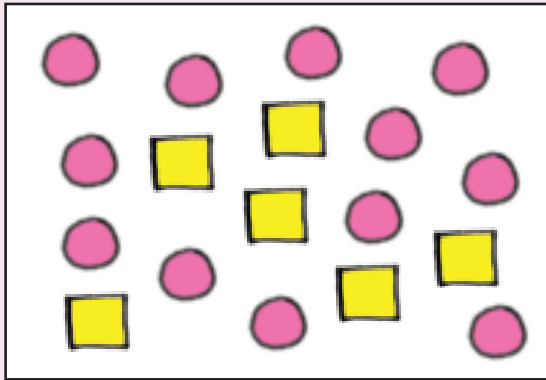
matlho

maronthorontho

dipetšhe



Aroganya maronthorontho le dipetšhe ka go lekalekana.



Teacher:
Sign:
Date:




Dipalo

Buisa matshwaopalo le mafoko a a mo botong.



Kwala palo ya dibalunu mo bolokong.

<input type="text"/>	<input type="text"/>
<input type="text"/>	<input type="text"/>
<input type="text"/>	<input type="text"/>



Kwala dipalo tse di latelang ka mafoko.

6	_____	12	_____
4	_____	17	_____
8	_____	14	_____
1	_____	22	_____
2	_____	18	_____
5	_____	11	_____
0	_____	20	_____
10	_____	15	_____
3	_____	13	_____
9	_____	16	_____



37 38 39 40 41 42 43 44

89 90 91 92 93 94 95 96




Teacher:

Sign:

Date:

Dipalo gape



Thala khutlotharo \triangle go dikologa dipalomaleka le sediko \bigcirc go dikologa dipalomafeta.



I	2	3	4	5	6	7	8	9	10
11	12	13	14	15	16	17	18	19	20



Kwala dinomere tsa dintlo.





Bala mebala e mebedi ya dibaga.

10 blue dots and 2 red dots

10 blue dots and 3 red dots

10 blue dots and 5 red dots

10 blue dots and 8 red dots

10 blue dots and 9 red dots

Kwala nomore ya.

10 + 2 = 12

10 + 3 =

10 + 5 =

10 + 8 =

10 + 9 =

Re ka e kwala jaaka:

10 + 2 = 12

+ =

+ =

+ =

+ =



Karabo ke eng?

10 + 1 = <input type="text"/>	10 + 9 = <input type="text"/>	10 + 6 = <input type="text"/>
10 + 8 = <input type="text"/>	10 + 2 = <input type="text"/>	10 + 3 = <input type="text"/>
10 + 5 = <input type="text"/>	10 + 4 = <input type="text"/>	10 + 7 = <input type="text"/>

1 3 5 7 9 11 13 15 17 19

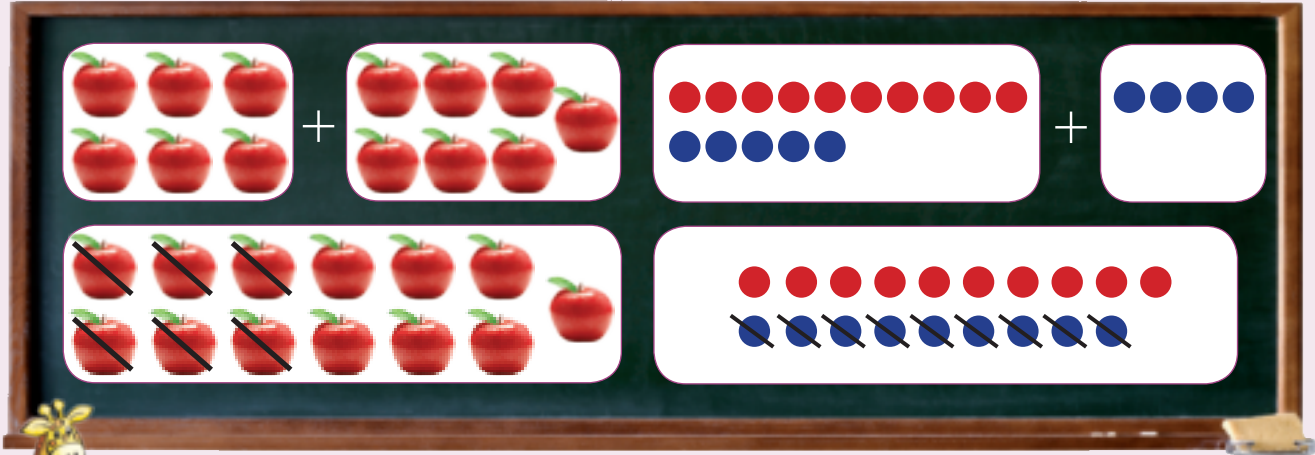
2 4 6 8 10 12 14 16 18 20



Teacher: _____
Sign: _____
Date: _____

Letlha:

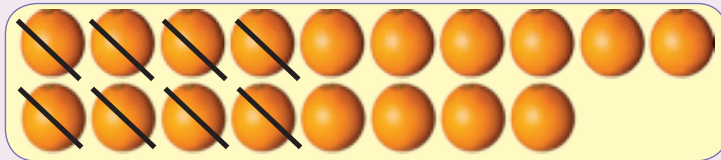
Go tlhakanya le go ntsha



Tlhakanya o bo o ntsha.



$9 + 8 = \boxed{17}$



$18 - 8 = \boxed{}$



$\boxed{} + \boxed{} = \boxed{}$



$\boxed{} + \boxed{} = \boxed{}$




$\boxed{} + \boxed{} = \boxed{}$



Balela.

$6 + 5 = \boxed{}$	$8 + 9 = \boxed{}$	$11 + 3 = \boxed{}$	$12 - 5 = \boxed{}$
$8 + 7 = \boxed{}$	$3 + 8 = \boxed{}$	$9 - 5 = \boxed{}$	$16 - 9 = \boxed{}$
$6 + 4 = \boxed{}$	$8 + 4 = \boxed{}$	$8 - 4 = \boxed{}$	$6 - 4 = \boxed{}$



Tlhakanya.

$$\begin{array}{ccccccc}
 \begin{array}{|c|} \hline \text{Apple} \\ \hline \end{array} & + & \begin{array}{|c|} \hline \text{Apple} \\ \hline \end{array} & + & \begin{array}{|c|} \hline \text{Apple} \\ \hline \end{array} & + & \begin{array}{|c|} \hline \text{Apple} \\ \hline \end{array} & = & \begin{array}{|c|} \hline \text{8 Apples} \\ \hline \end{array} \\
 2 & + & 2 & + & 2 & + & 2 & = & 8
 \end{array}$$

	+		+		=	<input type="text"/>				
<input type="text"/>	+	<input type="text"/>	+	<input type="text"/>	=	<input type="text"/>				
	+		+		+		=	<input type="text"/>		
<input type="text"/>	+	<input type="text"/>	+	<input type="text"/>	+	<input type="text"/>	=	<input type="text"/>		
	+		+		+		+		=	<input type="text"/>
<input type="text"/>	+	<input type="text"/>	+	<input type="text"/>	+	<input type="text"/>	+	<input type="text"/>	=	<input type="text"/>
	+		=	<input type="text"/>						
<input type="text"/>	+	<input type="text"/>	=	<input type="text"/>						



Balela.

$2 + 2 + 2 = \square$	$1 + 1 + 1 + 1 + 1 + 1 = \square$	$2 + 2 + 2 + 2 = \square$
$4 + 4 = \square$	$3 + 3 + 3 + 3 = \square$	$4 + 4 + 4 + 4 = \square$
$5 + 5 + 5 = \square$	$5 + 5 = \square$	$1 + 1 + 1 = \square$

$2 + 2 + 2 + 2 + 2 + 2$



Teacher: _____
 Sign: _____
 Date: _____

6

Letlha:


Kgweditlharo I

Go arolelana le tšhelete



Arolelanang maungo a a fa tlase.

	 4	 4	
	<input type="text"/>	<input type="text"/>	
	<input type="text"/>	<input type="text"/>	
	<input type="text"/>	<input type="text"/>	<input type="text"/>



	<input type="text"/>	<input type="text"/>	<input type="text"/>	<input type="text"/>
	<input type="text"/>	<input type="text"/>	<input type="text"/>	<input type="text"/>



<input type="text"/>	<input type="text"/>	<input type="text"/>	<input type="text"/>	
<input type="text"/>	<input type="text"/>	<input type="text"/>	<input type="text"/>	<input type="text"/>



Khalara dikhoene tse di nepagetseng kgotsa dipampiritšhelete gore di tlhakane go dira tlhwatlhwa e e tshwanang le e e tshwantshitsweng mo khoeneng kgotsa mo pampiritšheleteng ya ntlha mo moleng mongwe le mongwe.

	=	<input type="text"/>	<input type="text"/>	<input type="text"/>	<input type="text"/>	<input type="text"/>	<input type="text"/>
	=	<input type="text"/>	<input type="text"/>	<input type="text"/>	<input type="text"/>	<input type="text"/>	<input type="text"/>
	=	<input type="text"/>	<input type="text"/>	<input type="text"/>	<input type="text"/>	<input type="text"/>	<input type="text"/>

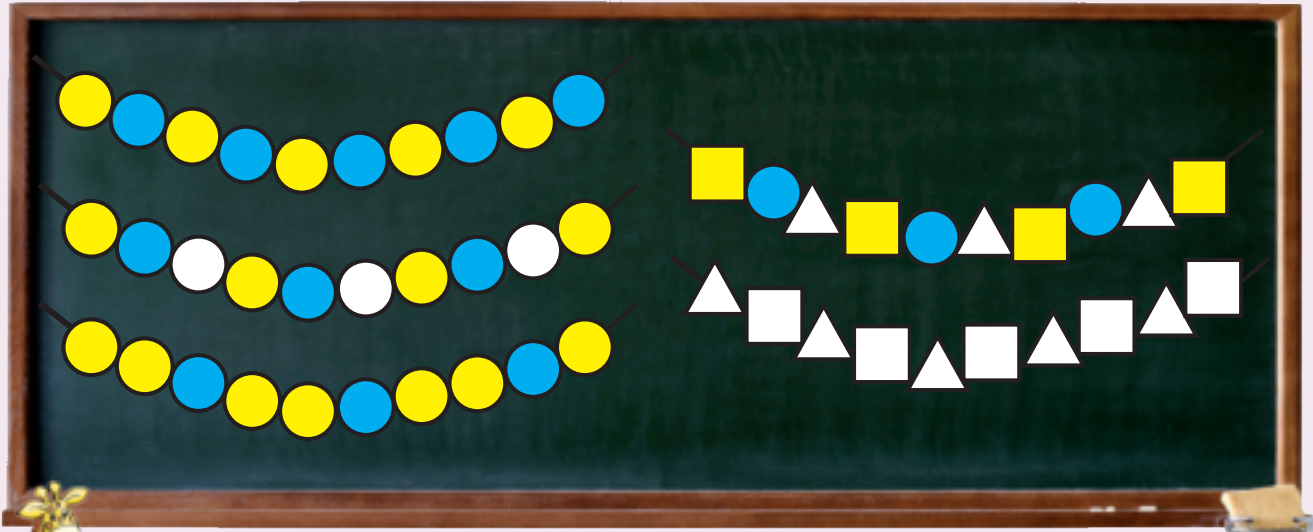
	=	<input type="text"/>	<input type="text"/>	<input type="text"/>	<input type="text"/>	<input type="text"/>	<input type="text"/>
	=	<input type="text"/>	<input type="text"/>	<input type="text"/>	<input type="text"/>	<input type="text"/>	<input type="text"/>

R1 1c R5 5c R10




Teacher: _____
 Sign: _____
 Date: _____


Dipaterone/Diphethene



Kopololela diphethene tse di mo patitshokong mo diphatlheng tse di fa tlase.




Atolosa paterone.

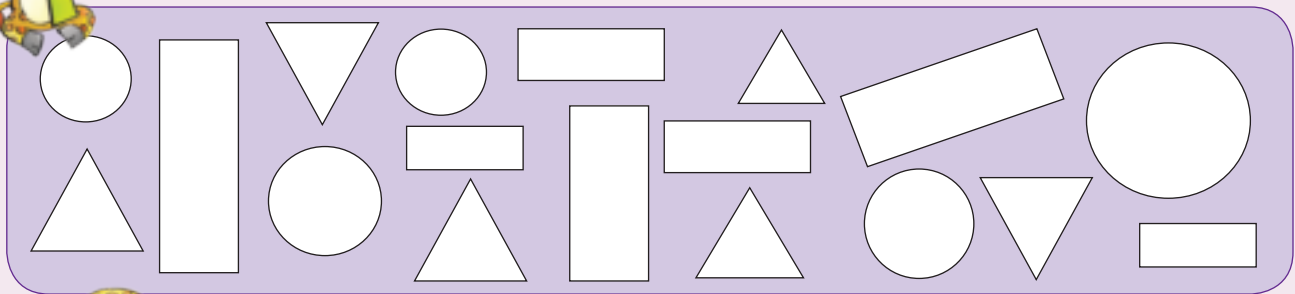


Letlha:


Dibopego




Khalara dikhutlonne ka botala jwa legodimo, didiko ka bohobidu mme dikhutlotharo ka serolwana.



Khalara didiko tsotlhe ka bohobidu, dikhutlonne ka botala jwa legodimo le dikhutlotharo ka serolwana.



A matlhakore a tlhamaletse kgotsa a kgolokwe. Khalara karabo e e nepagetseng.




tlhamaletse

kgolokwe



tlhamaletse

kgolokwe



tlhamaletse

kgolokwe



Thala lephuka le lengwe la dirurubele.



Teacher:
Sign:
Date:

Dibolo le mabokoso



Sekeletsa mabokoso ka botlala jwa legodimo mme dibolo ka bohibidu.




Khalara karabo e e nepagetseng.



Lebokoso le a

relela


kgokologa




Bolo e a

relela

kgokologa



Khalara karabo e e nepagetseng.



losi lo lo kgolokwe
losi lo lo tlhamaletseng



losi lo lo kgolokwe
losi lo lo tlhamaletseng



losi lo lo kgolokwe
losi lo lo tlhamaletseng




losi lo lo kgolokwe
losi lo lo tlhamaletseng



losi lo lo kgolokwe
losi lo lo tlhamaletseng



losi lo lo kgolokwe
losi lo lo tlhamaletseng



losi lo lo kgolokwe
losi lo lo tlhamaletseng



losi lo lo kgolokwe
losi lo lo tlhamaletseng



Bua gore a bolo e kwa morago, fa pele, gaufi le kgotsa mo godimo ga lebokoso.



kwa morago	fa pele
gaufi le	mo godimo



kwa morago	fa pele
gaufi le	mo godimo



kwa morago	fa pele
gaufi le	mo godimo



kwa morago	fa pele
gaufi le	mo godimo




bolo lebokoso



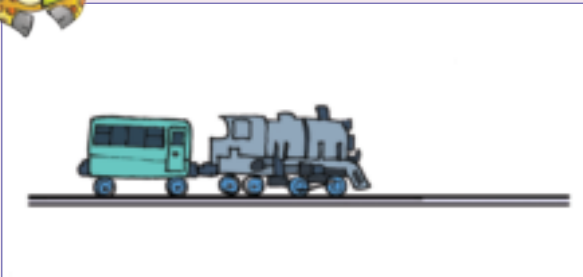
Teacher:
Sign:
Date:

Boleele

Ba dira eng?

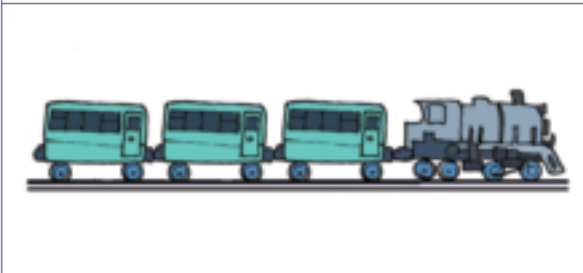


Ke terena efe e e khutshwane mme ke efe e telele?



khutshwane

telele



khutshwane

telele

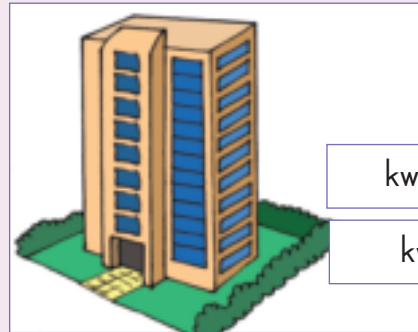


Ke moago ofe o o kwa godimo mme ke ofe o o kwa tlase?



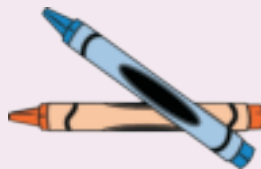
kwa godimo


kwa tlase



kwa godimo

kwa tlase





Ke motho ofe yo mokhutshwane
mme ke ofe yo moleele?

mokhutshwane

moleele



mokhutshwane

moleele



Dirisa mosego wa seatla. Khutlonne e boleele jwa diatla di le kae?
Dirisa mosego wa lenao. Khutlonne e boleele jwa dinao di le kae?

→








Jaanong lekanyetsa bogodimo jwa khutlonne ka diatla le dinao.

↑








Teacher:

Sign:

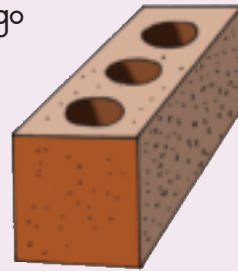
Date:

Letlha:

Boima kana mmase



Bua gore a selo se boketenyana kgotsa se botlhofonyana go na le se sengwe.



bokete


botlhofo


bokete

botlhofo



Sekeletsa selo se se bokete.





A selo se bokete kgotsa botlhofo go feta kilogeramo?



bokete

botlhofo



bokete

botlhofo



bokete

botlhofo



bokete

botlhofo



bokete botlhofo



Teacher:

Sign:

Date:

Tlotlang ka ga setshwantsho

Mothamo



Khalara karabo e e nepagetseng.



tletse

lolea

halofo



tletse

lolea

halofo



tletse

lolea

halofo



tletse

lolea

halofo



tletse

lolea


halofo




tletse

lolea

halofo

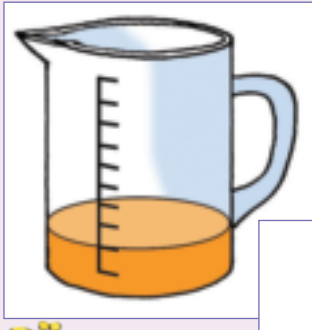


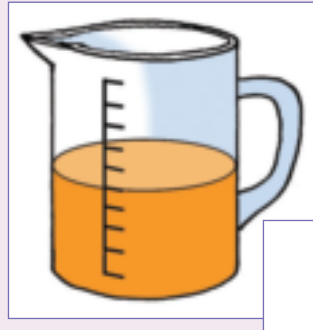
Selekanyo se le sengwe se tlatsa letshwao la ntlha la jeke.
Jeke e e tlaa tlatswa ke dilekanyo di le kae?

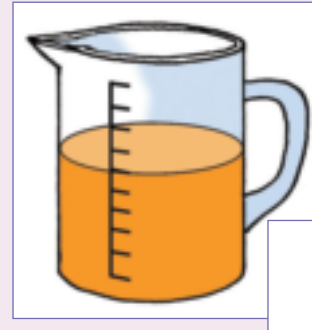




Go tshetswe dilekanyo di le kae mo dijekeng tse?

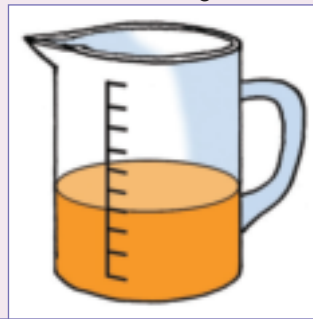








Jeke e e ka fa molemeng e tshola litara e le 1 ya metsi.
Ke jeke efe e e nang le matute a a tshwanang mme ke jeke efe e e nang le matute a a kwa tlase mo teng.



a a tshwanang

kwa tlase

a a tshwanang

kwa tlase



tletse lolea



Teacher:

Sign:

Date:



Nako

Yang kwa go Se-segeletsweng sa I. Sega mafoko o bo o a kgomaretsa ka fa tlase ga ditshwantsho go bontsha gore ke nako mang.



Feleletsa dipolelo.

Ke _____ mo mosong thata.

Ke _____ mo mosong.

Ke _____ mo thapameng.

Ke _____ tsatsi le letsatsi.


Ke _____ thari tsatsi le letsatsi



Maabane

Gompieno

Ka moso



Araba dipotso.

Ngwana o dira eng gompieno? _____


Ngwana o dirile eng maabane? _____

Ngwana o tlaa dira eng ka moso? _____



Thala setshwantsho sa gago.

Maabane	Gompieno	Ka moso



Maabane

O I A O I A O I A O



Teacher: _____
 Sign: _____
 Date: _____

Khalentara ya malatsi a botsalo



Gratisa dikgweidi.

<p>Ferikgong</p> <p>Sipho Maryke Annie</p>	<p>Tlhakole</p> <p>Jeffrey Simon</p>	<p>Mopitlwe</p> <p>Ati Juan</p>	<p>Moranang</p> <p>Betty Liezal</p>	<p>Matsheganong</p> <p>Lettie Ricco George</p>	<p>Seetebosigo</p> <p>Mpho</p>
<p>Phukwi</p> <p>Palesa Lisa Kayla</p>	<p>Phatwe</p> <p>Mbali Brenda Mary</p>	<p>Lwetse</p> <p>John</p>	<p>Diphalane</p> <p>Karin Jaco</p>	<p>Ngwanaitseele</p> <p>Gugu Dian</p>	<p>Sedimonthole</p> <p>Kara Richard Denise</p>



Kwala leina la ngwana mongwe le mongwe mo tlelaseng kana phaposiborutelong mo khalentareng e ya malatsi a botsalo.

Ferikgong	Tlhakole	Mopitlwe
Moranang	Motsheganong	Seetebosigo
Phukwi	Phatwe	Lwetse
Diphalane	Ngwanaitseele	Sedimonthole

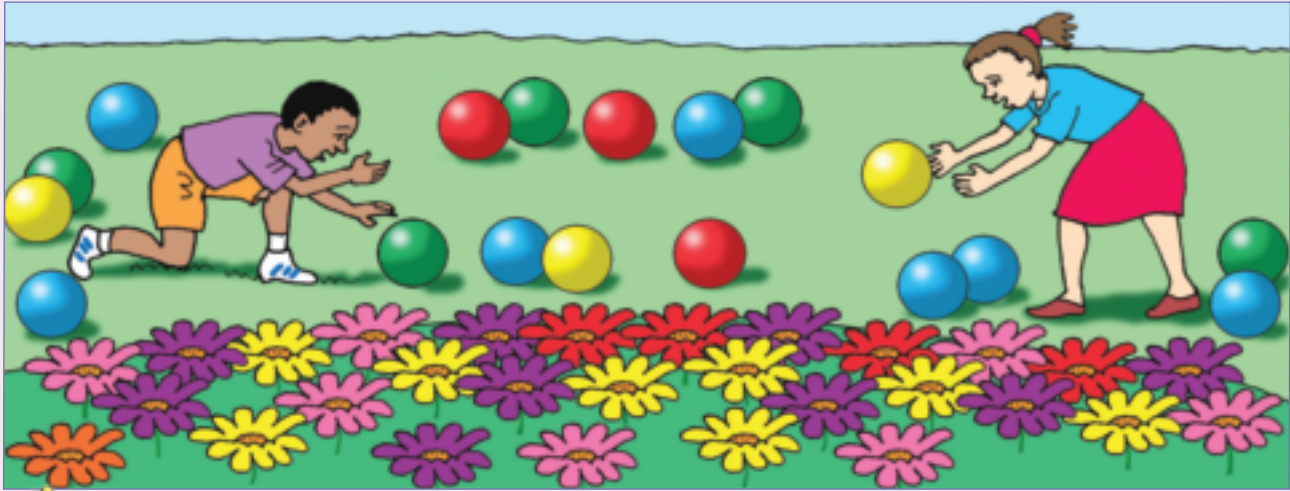


Letsatsi la me
la botsalo le ka



Teacher:
Sign:
Date:

Kokoanya mme o tlhaole



Kokoanya mme o tlhaole dibolo morago o di thale mo lebokosong le le nepagetseng.



--	--	--	--

dibolo tse di botala jwa tllhaga


dibolo tse di khibidu

dibolo tse di botala jwa legodimo

dibolo tse di serolwana




Kokoanya mabolomo, o a tlhaole mme o a tsenye mo dinkgong.




Mabolomo a a serolwana




Mabolomo a mahibidu




Mabolomo a a phepole




Mabolomo a a pinki



Mabolomo a mmala wa namune



Tlhaola dilo. Dira ditshwantsho tsa gago.



Dilo tse di botlhofo



Dilo tse di bokete



dibolo tse dinnye




dibolo tse dikgolo



dibokoso tse dinnye




dibokoso tse dikgolo





Teacher:
Sign:
Date:

Buisa mme o tlhalose


Tlhaola dikheraeyone. Dira setshwantsho ka tsona.



Tlhaola mabolomo. Dira setshwantsho ka ona.



Tlhaola maru le metshe ya badimo. Di thale.





Araba dipotso.

		
Dikhutlotharo	Dikhutlonne	Didiko

Go na le dikhutlotharo di le kae?

Go na le dikhutlonne di le kae?

Go na le didiko di le kae?

A go na le dikhutlotharo tse di fetang dikhutlonne?

A go na le didiko kgotsa dikhutlotharo tse dintsi?


A go na le didiko kgotsa dikhutlonne tse dintsi?

		
ga go na sepe	halofo	e tletse

Go na le dijeke di le kae tse di se nang sepe?

Go na le dijeke tse di halofo di le kae?

Go na le dijeke di le kae tse di tletseng?



O A O A O A O A O A O A O A O A




Teacher: _____
 Sign: _____
 Date: _____

Pele, morago le magareng

Tlhalosa dinomoro ka go dirisa mafoko pele, magareng le morago.

Sekolo: Kgwele nngwe le nngwe e e khibidu e fa gare ga dikgwele tse di botlala jwa legodimo.



Kwala nomoro e e nepagetseng mo sekwereng.

4 6 8

Pele Magareng Morago

 18

Pele Magareng Morago

 25

Pele Magareng Morago

 16

Pele Magareng Morago



Tlatsa dinomoro tse di tllhaelang.

	2			5	
	12			15	
13			16		

10			13		
	17			20	
20					25

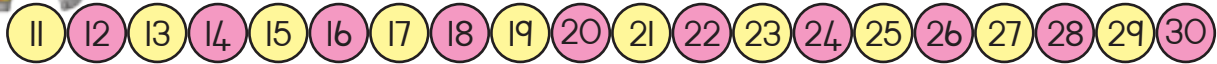
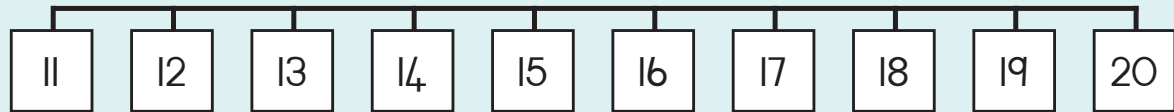
Ke nomoro efe e e tlang pele ga 8? _____

Ke nomoro efe e e tlang morago ga 16? _____

Ke dinomoro dife tse di magareng ga 8 le 12? _____



Khalara dinomere tse di magareng ga 14 le 17 ka botala jwa legodimo. Khalara nomore e e fa pele ga 14 ka bohibidu. Khalara nomore e e fa morago ga 17 ka serolwana.



Kwala dinomere tsotlhe tse di mo dibageng tse di serolwana.
Re bitsa dinomere tse di mo dibageng tse di serolwana eng?

Kwala dinomere tsotlhe tse di mo dibageng tse di pinki.
Re bitsa dinomere tse di mo dibageng tse di pinki eng?




Arolela bana ba ba apereng mmala o o serolwana dibaga tse di serolwana.

Mongwe le mongwe o bona dibaga di le kae? _____. A go na le dibaga tse di setseng? _____

Arolela bana ba ba apereng mmala o o pinki dibaga tse di pinki.

Yo mongwe le yo mongwe o bona dibaga di le kae? _____. A go na le dibaga tse di setseng? _____.



Araba dipotso tse di latelang.

Kwala dipalomaleka di le tharo tse di tlang fa morago ga 12? _____.

Kwala dipalomafeta di le tharo tse di tlang fa morago ga 14? _____.

Ke dipalomafeta dife tse di tlang magareng ga 18 le 24? _____.

Kwala dipalomaleka tse di magareng ga 8 le 18? _____.



Teacher:

Sign:

Date:



Letlha:

Dipalo 1 – 30

Go na le dibuka di le kae?
Go na le mabotlolo a pente a le makae?



Go na le dibaga di le kae?



●●●●●●●●●●	●●	<input type="checkbox"/>
●●●●●●●●●●	●●●●●	<input type="checkbox"/>
●●●●●●●●●●	●●●●●●●	<input type="checkbox"/>
●●●●●●●●●●	●●●●●●●●●	<input type="checkbox"/>
●●●●●●●●●●	●●●●●●●●	<input type="checkbox"/>



Go na le dibuka di le kae?





Tlatsa dipalo tse di tlogetsweng.

14	12	15	17	19	13	26	28	21	30
10 4	2	10	7	10					

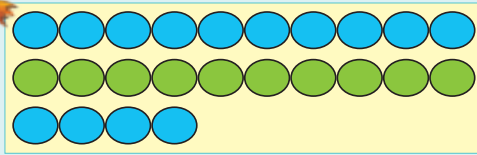


Leba sekao sa ntlha mme o feleletse tse di setseng.

18	=	1	lesome le le	+	8	diyuniti di le	kgotsa	18	=	10	+	8
15	=		lesome le le	+		diyuniti di le	kgotsa		=		+	
19	=		lesome le le	+		diyuniti di le	kgotsa		=		+	
22	=		lesome le le	+		diyuniti di le	kgotsa		=		+	
24	=		lesome le le	+		diyuniti di le	kgotsa		=		+	



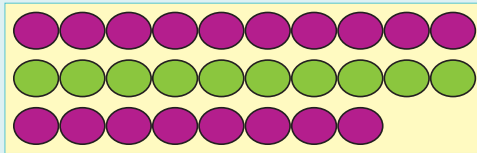
Go na le dibaga di le kae?



Palo

Re ka e kwala jaaka.

$$20 + \square = 24$$



Palo

Re ka e kwala jaaka.

$$20 + \square = 28$$



Kwala ka mafoko.

10	_____	11	_____
12	_____	13	_____
14	_____	15	_____
16	_____	17	_____
18	_____	19	_____
20	_____	21	_____
22	_____	23	_____
24	_____	25	_____



Leba sekao sa ntlha mme o feleletse tse di setseng.

25	=	2	masome	+	5	metso	22	=	2	masome	+	2	metso
13	=		masome	+		metso	21	=		masome	+		metso
26	=		masome	+		metso	19	=		masome	+		metso



Teacher:

Sign:

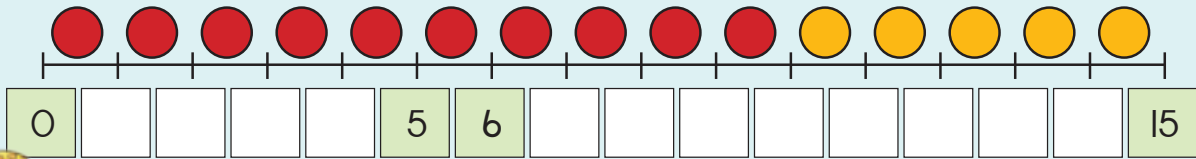
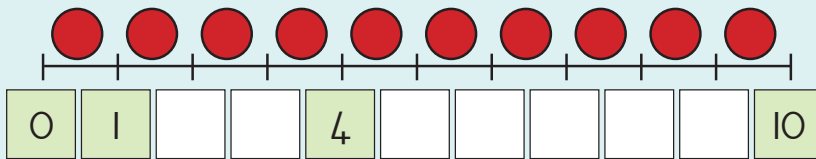
Date:

Letlha:

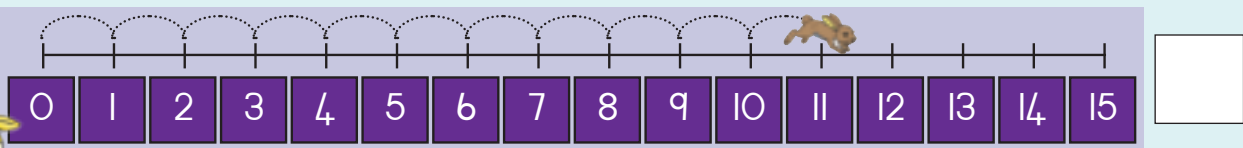
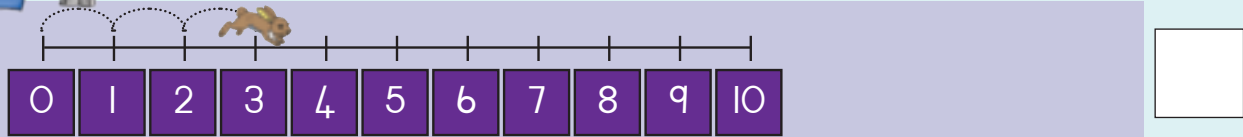
Melapalo



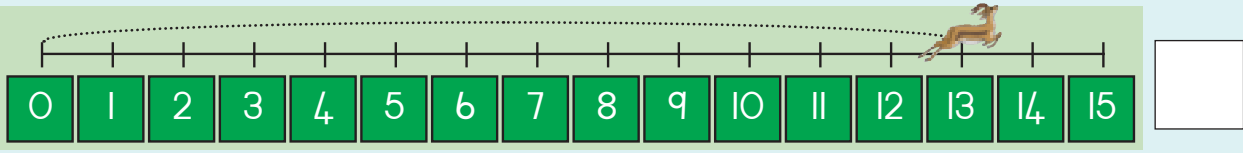
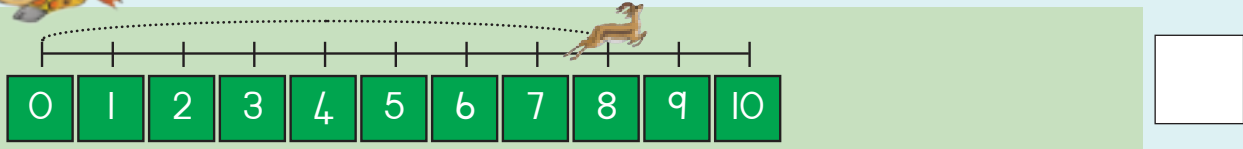
Tlatsa dipalo tse di tlhaelang.



Mmutla o tlotse bokgakala jo bokae? Dirisa molapalo go go thusa go bereka dikarabo.



Tshepe e tlotse bokgakala jo bokae? Dirisa molapalo go go thusa go bereka dikarabo.





Dirisa molapalo go go thusa go bereka dikarabo. Mmutla o tlotse bokgakala jo bokae?

0 1 2 3 4 5 6 7 8 9 10 11 12 13 14 15 16 17 18 19 20

masome dijuniti

+ =

0 1 2 3 4 5 6 7 8 9 10 11 12 13 14 15 16 17 18 19 20

masome metso

+ =

0 1 2 3 4 5 6 7 8 9 10 11 12 13 14 15 16 17 18 19 20

masome metso

+ =

0 1 2 3 4 5 6 7 8 9 10 11 12 13 14 15 16 17 18 19 20

masome metso

+ =

0 1 2 3 4 5 6 7 8 9 10 11 12 13 14 15 16 17 18 19 20

masome metso

+ =




Teacher:
Sign:
Date:



Letlha:

Melapalo e mengwe gape



Thusa Mmutla go kwala palo. Dirisa molapalo go go thusa go bereka dikarabo.

0 1 2 3 4 5 6 7 8 9 10

$2 + 3 = 5$

0 1 2 3 4 5 6 7 8 9 10

$\square + \square = \square$



Thusa tshepe go kwala palo. Dirisa molapalo go go thusa go bereka dikarabo.

0 1 2 3 4 5 6 7 8 9 10

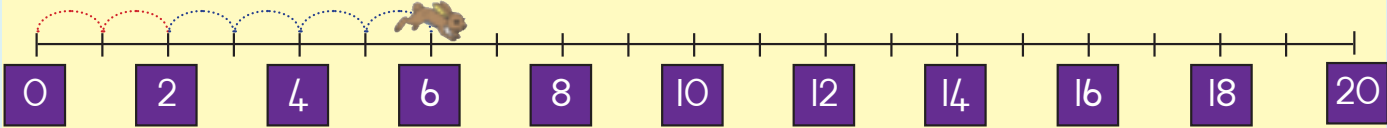
$\square + \square = \square$

0 1 2 3 4 5 6 7 8 9 10

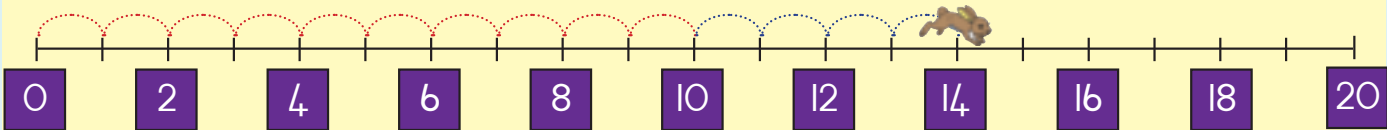
$\square + \square = \square$



Thusa Mmutla go kwala palo.



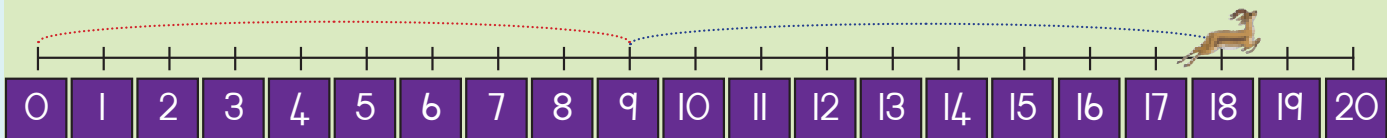
$$\square + \square = \square$$



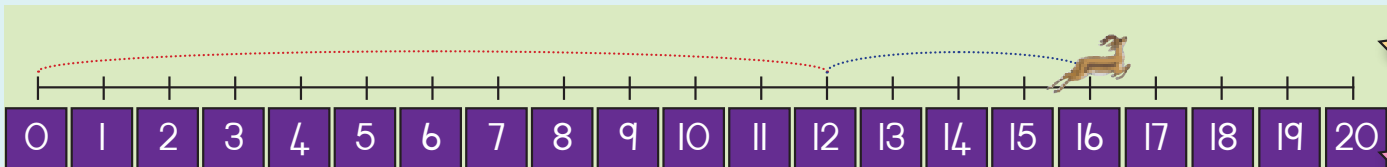
$$\square + \square = \square$$



Thusa tshepe go kwala palo.



$$\square + \square = \square$$



$$\square + \square = \square$$

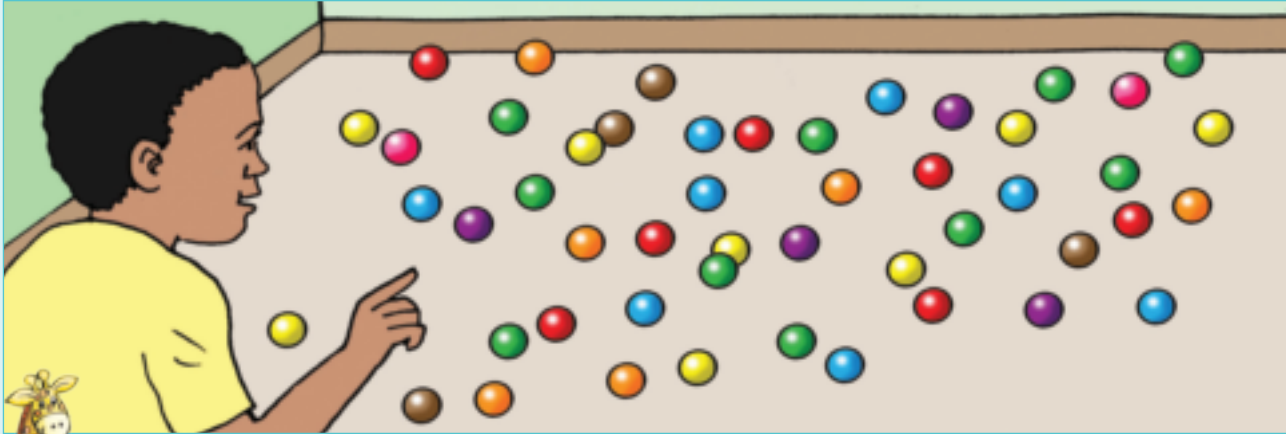


Teacher:

Sign:

Date:

Go tlhakanya le go ntsha



Kwala nomore ya dibaga.

Go na le dibaga di le kae tse di khibidu?

Go na le dibaga di le kae tse di botala jwa legodimo?

Go na le dibaga di le kae tse di botala jwa tlhaga?

Go na le dibaga di le kae tse di mmala wa namune?

Go na le dibaga di le kae tse di phepole?

Go na le dibaga di le kae gotlhelele?

--



Kwala palo ya dibaga tsa mmala mongwe le mongwe mo mabokosong a a nepagetseng mme o di tlhakanye.

khibidu	+	botala jwa tlhaga	=	
serolwana	+	pinki	=	
mmala wa namune	+	botala jwa legodimo	=	
phepole	+	botala jwa tlhaga	=	
khunou	+	serolwana	=	



Feleletsa dipaterone.

●	●	●	●	●	○	○	○
●	●	●	●	●	○	○	○
●	●	●	●	●	○	○	○
●	●	●	●	●	○	○	○
●	●	●	●	●	○	○	○

Malatsi, dibeke le dikgwedi

Mosupologo	Ferikgong	Tlhakole	Mopitlwe
Labobedi	Moranang	Motsheganong	Seetebosigo
Laboraro	Phukwi	Phatwe	Lwetse
Labone	Diphlane	Ngwanaitseele	Sedimonthole
Labotlhano			
Lamatlhatso			
Sontaga			

Araba dipotso tse di latelang tse di ka ga matsatsi a beke.

Ke letsatsi lefe le le tlang pele ga Laboraro? _____

Ke letsatsi lefe le le tlang morago ga Laboraro? _____

Ke letsatsi lefe le le tlang morago ga Lamatlhatso? _____

Ke letsatsi lefe le le tlang magareng ga Mosupologo le Laboraro? _____

Fa Mosupologo e le letsatsi la ntlha, go raya gore Lamatlhatso ke letsatsi la _____

Ke malatsi afe a a tlang magareng ga Laboraro le Lamatlhatso? _____

Araba dipotso tse di latelang ka ga dikgwedi.

Ke kgwedi efe e e tlang motago ga Moranang? _____


Ke kgwedi efe e e tlang morago ga Seetebosigo? _____

Ke kgwedi efe e e tlang magareng ga Phatwe le Diphlane? _____

Ke dikgwedi dife tse di tlang magareng ga Ferikgong le Seetebosigo? _____

Kgwedi ya ntlha mo ngwageng ke efe? _____

Kgwedi ya bofelo mo ngwageng ke efe? _____



Ditumelo mo
Aforikaborwa



Ditiragalo tsa
hisetori

- Letsatsi la Ditshwanelo tsa Botho
- Letsatsi la Kgololosego
- Letsatsi la Badiri
- Letsatsi la Bašwa
- Letsatsi la Bosetšhaba la Bomme
- Letsatsi la Ngwaobošwa
- Letsatsi la Poelano

Letsatsi la
botsalo

Letsatsi la me la botsalo



Se-se-segeletsweng sa 2: Dirisa Tse-di-segeletsweng o bo o kgomaretsa malatsi a sedumedi a boikhutso le malatsi otlhe a boikhutso a Aforikaborwa mo dikgweding tse di mo khalentareng.

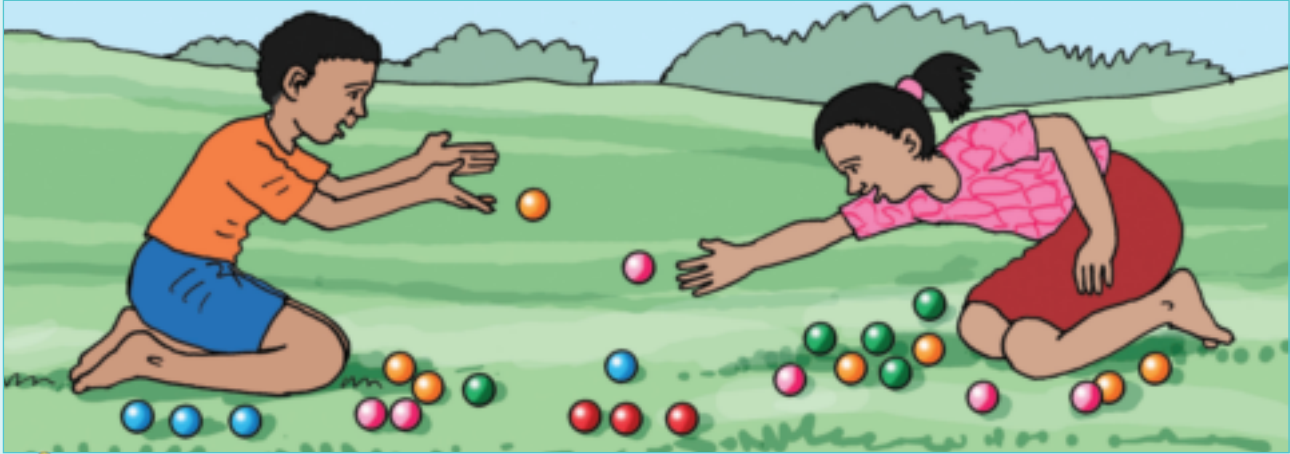
Ferikgong	Tlhakole	Mopitlwe
Moranang	Motsheganong	Seeteboosigo
Phukwi	Phatwe	Lwetse
Diphalane	Ngwanaitseele	Sedimonthole



Teacher:
Sign:
Date:

Letlha:

Go tlhakanya



Lebelela setshwantsho o bo o kwala palo ya dimmabole tsa mmala mongwe le mongwe mo mabokosong a a nepagetseng mme morago o tlhakanye dipalelo.



khibidu	+	botala jwa legodimo	=	3	+	4	=	<input type="text"/>
botala jwa tlhaga	+	botala jwa legodimo	=	<input type="text"/>	+	<input type="text"/>	=	<input type="text"/>
pinki	+	botala jwa legodimo	=	<input type="text"/>	+	<input type="text"/>	=	<input type="text"/>
botala jwa tlhaga	+	mmala wa namune	=	<input type="text"/>	+	<input type="text"/>	=	<input type="text"/>
khibidu	+	botala jwa tlhaga	=	<input type="text"/>	+	<input type="text"/>	=	<input type="text"/>
mmala wa namune	+	botala jwa legodimo	=	<input type="text"/>	+	<input type="text"/>	=	<input type="text"/>

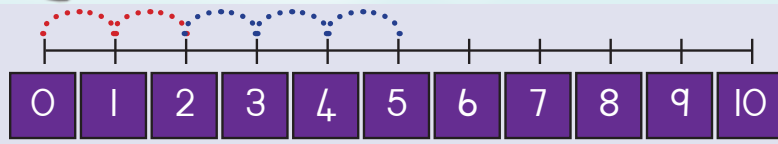


Tlhakanya

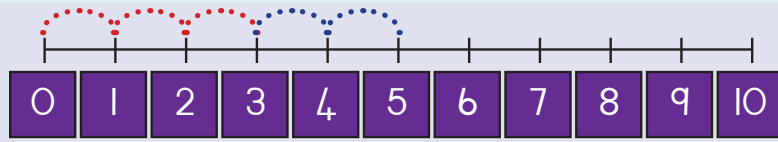
$3 + 2 =$	<input type="text"/>	$4 + 6 =$	<input type="text"/>	$9 + 3 =$	<input type="text"/>
$6 + 5 =$	<input type="text"/>	$7 + 8 =$	<input type="text"/>	$8 + 4 =$	<input type="text"/>
$9 + 5 =$	<input type="text"/>	$8 + 6 =$	<input type="text"/>	$7 + 4 =$	<input type="text"/>
$9 + 9 =$	<input type="text"/>	$7 + 5 =$	<input type="text"/>	$8 + 8 =$	<input type="text"/>
$7 + 6 =$	<input type="text"/>	$9 + 6 =$	<input type="text"/>	$7 + 7 =$	<input type="text"/>



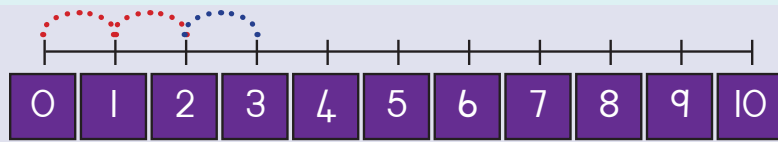
Kwala palo ya:



$$\boxed{2} + \boxed{3} = \boxed{5}$$




$$\boxed{} + \boxed{} = \boxed{}$$



$$\boxed{} + \boxed{} = \boxed{}$$



$$\boxed{} + \boxed{} = \boxed{}$$



Tlhakanya dibaga go dira gore dikale di lekalekane. Re go diretse ya ntlha.

$5 = 1 + 4$

$6 = 2 + \underline{\quad}$

$3 + \underline{\quad} = \underline{\quad}$

$2 + 1 = 1 + \underline{\quad}$

$6 + 3 = 3 + \underline{\quad}$

$2 + \underline{\quad} = 8 + 2$



Teacher:

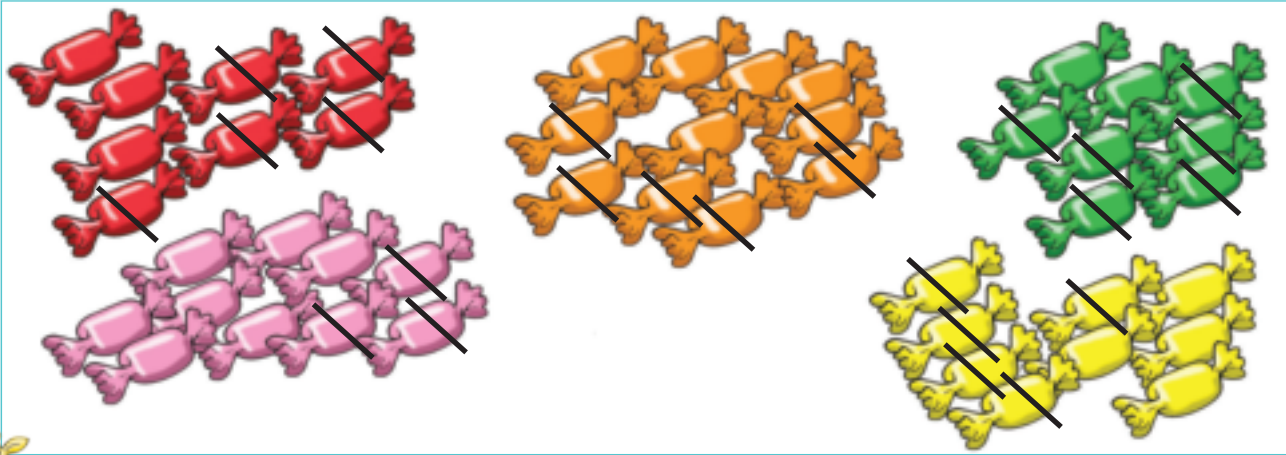
Sign:

Date:




Letlha:

Go ntsha



Leba setshwantsho o bo o kwale dipalo tsa go ntsha.



dimonamone tse di khibidu

= 8

-

5

=

3

dimonamone tse di botala jwa tlhaga

=

-

=

dimonamone tse di serolwana

=

-

=

dimonamone tsa mmala wa namune

=

-

=

dimonamone tse di pinki

=

-

=



Ntsha.

$5 - 3 = \square$

$10 - 6 = \square$

$12 - 3 = \square$

$11 - 5 = \square$

$15 - 7 = \square$

$12 - 4 = \square$

$14 - 9 = \square$

$14 - 8 = \square$

$11 - 4 = \square$

$18 - 9 = \square$

$12 - 5 = \square$

$16 - 8 = \square$

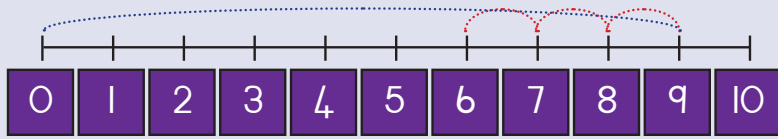
$13 - 7 = \square$

$15 - 6 = \square$

$14 - 7 = \square$



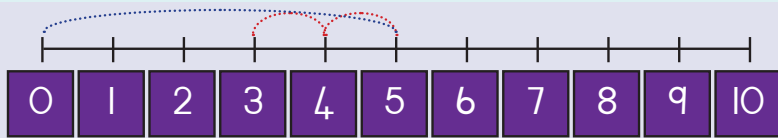
Feleletsa.



$$\boxed{9} - \boxed{3}$$

Ga e lekane le

$$\boxed{3} - \boxed{9}$$



$$\boxed{5} - \boxed{2}$$

Ga e lekane le

$$\boxed{2} - \boxed{5}$$



Kwala palo ya:

$$\boxed{} - \boxed{} = \boxed{}$$

$$\boxed{} - \boxed{} = \boxed{}$$

$$\boxed{} - \boxed{} = \boxed{}$$

$$\boxed{} - \boxed{} = \boxed{}$$

$$\boxed{} - \boxed{} = \boxed{}$$


Teacher:

Sign:

Date:



Tlhakanya.

10	+	3	=	13	10	+	2	=	
10	+	5	=		10	+	7	=	
10	+	1	=		10	+	6	=	
10	+	4	=		10	+	8	=	
10	+	9	=		10	+	3	=	



Tlhakanya.

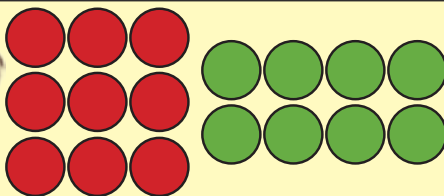
16 + 13				14 + 12					
10	10	20		10	10				
6	+	3	=	9	4	+	2	=	
16	+	13	=	29		+		=	

17 + 11				15 + 13					
10	10			10	10				
7	+	1	=		5	+	3	=	
	+		=			+		=	

16 + 12				18 + 12					
10	10			10	10				
6	+	2	=		8	+	2	=	
	+		=			+		=	



Lisa o na le
dibadisi di le 9
mme ga Aakar
o na le di le 8



Palogotlhe ke eng?




Teacher:
Sign:
Date:

Letlha:



Madi kgotsa tšhelete

Go na le eng mo bankeng ya me ya kolobe?

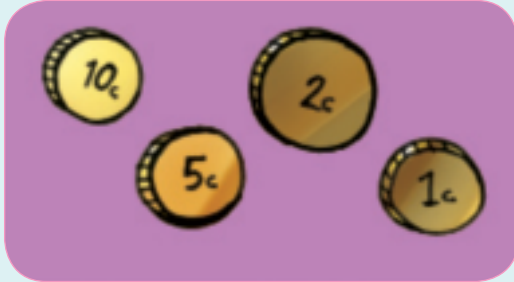


Sega dikhoene go tswa mo Tse-di-Segilweng 3, mme o kgomaretse ditlhwatlhwa tse di nepagetseng fa.

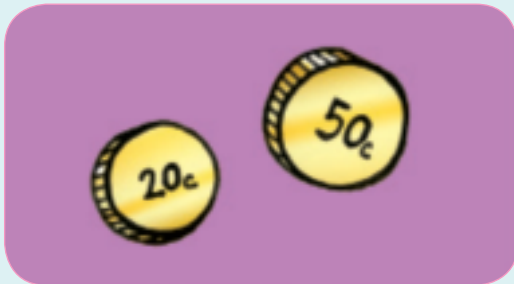
	
	
	



Ke disente di le kae?















Dipalo tsa mafoko:

Suzy o na le 50c. Mmaagwe o mo naya 20c gape. Suzy o na le bokae gotlhelele?

Ke na le 90c. Ke rekile dimonamone tsa 30c. Ke saletswe ke bokae?



Teacher:


Sign:

Date:









Tšhelete ya pampiri

Go na le pampiritšhelete ya bokae mo sepatšheng sa me?



Sega ditšhelete tsa pampiri go tswa mo go Tse-di-Segilweng 3, mme o kgomaretse ditlhwatlhwa tse di nepagetseng fa.



Ke diranta di le kae gotlhelele?















Dipalo tsa mafoko:

Ke bolokile R50. Ke filwe R20 ya letsatsi la botsalo. Ke na le bokae?

Ke na le R90. Ke rekile buka ka R30. Ke saletswe ke bokae?



Teacher:

Sign:


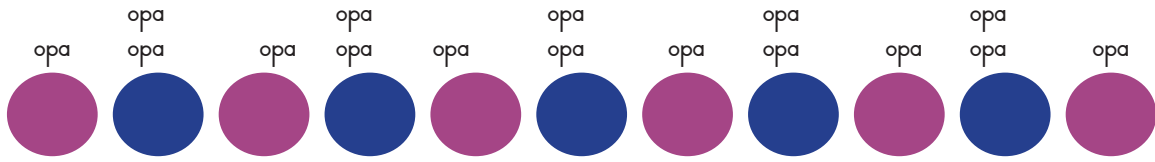
Date:




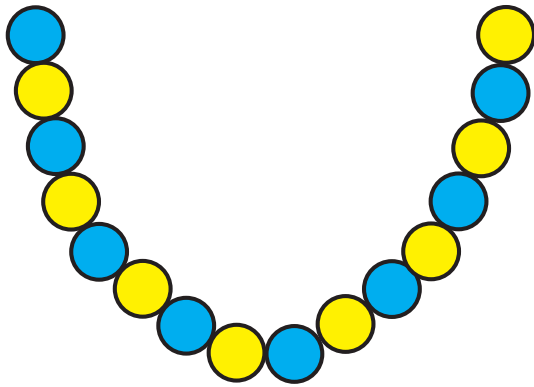
Dipaterone




Opela dipaterone diatla



Kopolola dipaterone. Dirisa tse di segetsweng ruri tsa 4.





Dira setshwantsho sa gago go tswa mo dibageng tse di setseng. Dirisa tse di segeletsweng ruri tsa 4.

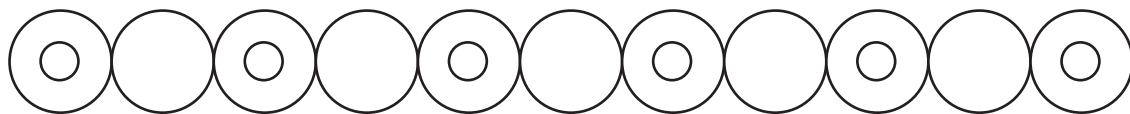




Kopolola dipaterone tse di latelang.



Kopolola dipaterone.



Teacher:

Sign:


Date:



Dipaterone



Tlhalosa paterone e nngwe le e nngwe ka mafoko. Mafoko a a fa tlase a ka go thusa.



khutlonne

sekwere

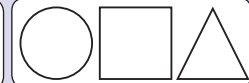
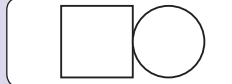

khutlotharo

sediko

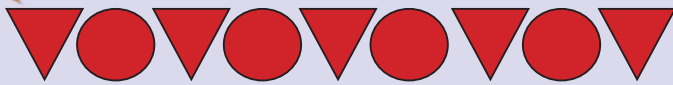
mebala



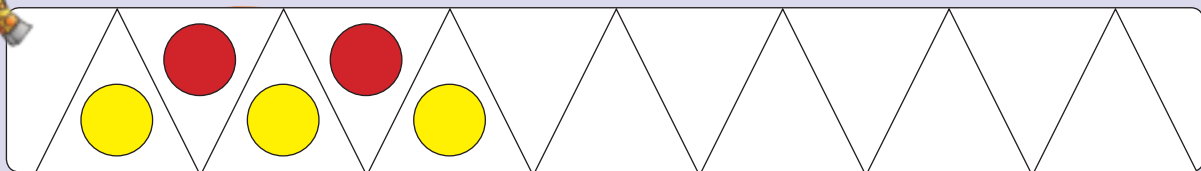
Tlhopha mme morago o khalare phethene e e latelang.



Thala paterone e e latelang.




Atolosa paterone.

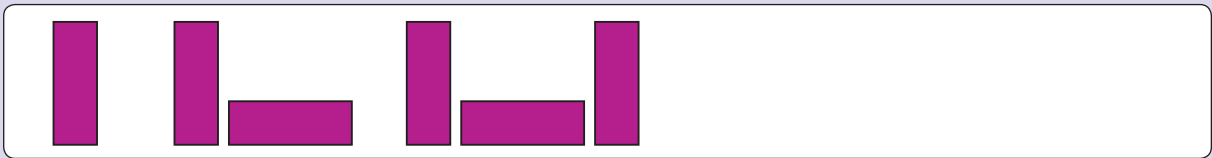
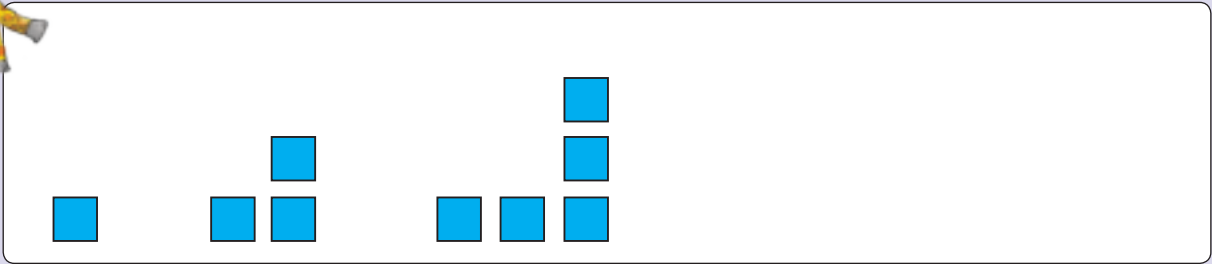




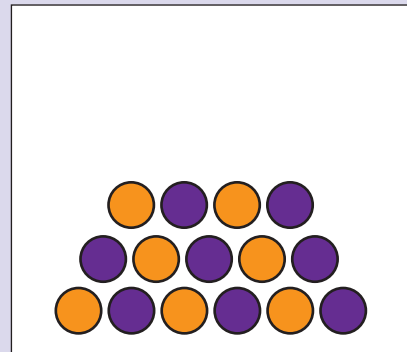
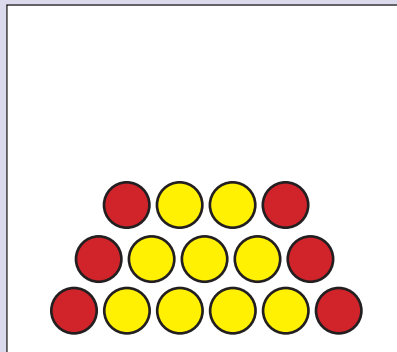
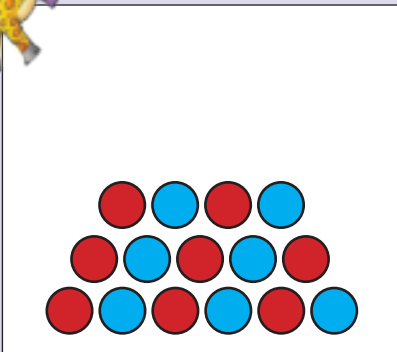
Thala dipaterone tsa gago ka go dirisa



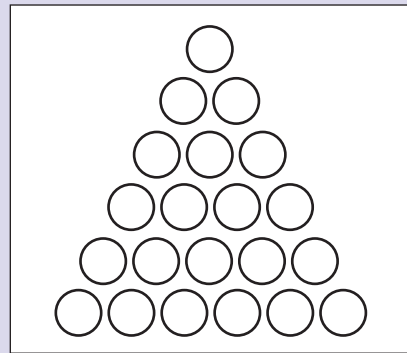
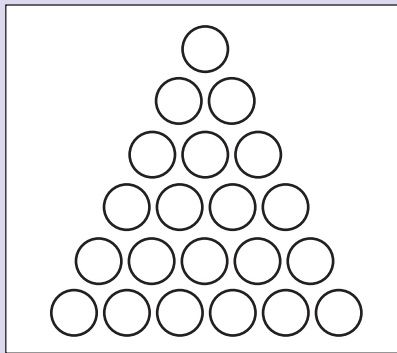
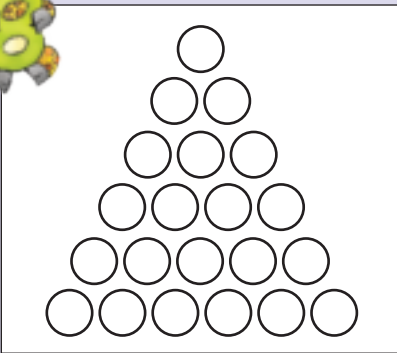
Thala paterone e e latelang.



Feleletsa tse di latelang gore o tle o nne le sediko se le sosi fela kwa godimo.



Itlhamela dipaterone tsa gago tsa mmala ka go dirisa dibopego tse di fa tlase.



Teacher:
Sign:
Date:



Katiso: $\times 2$

Go na le dimonamone di le kae mo tafoleng nngwe le nngwe?



O badile dimonamone jang?
(Bana ba bangwe ba ka re 1, 2, 3 ... bangwe ba ka re 2, 4, 6...)



Feleletsa tse di latelang: Re go diretse ya ntlha.



ditlhophadi di le 4 tsa 2

$$2 + 2 + 2 + 2 = 8$$

$$4 \times 2 = 8$$



ditlhophadi di le 5 tsa 2

$$2 + 2 + 2 + 2 + 2 =$$

$$5 \times 2 =$$



ditlhophadi di le 6 tsa 2

$$2 + 2 + 2 + 2 + 2 + 2 =$$

$$6 \times 2 =$$



ditlhophadi di le 7 tsa 2

$$2 + 2 + 2 + 2 + 2 + 2 + 2 =$$

$$7 \times 2 =$$



ditlhophadi di le 8 tsa 2

$$2 + 2 + 2 + 2 + 2 + 2 + 2 + 2 =$$

$$8 \times 2 =$$



Thala setshwantso sa tse di latelang.

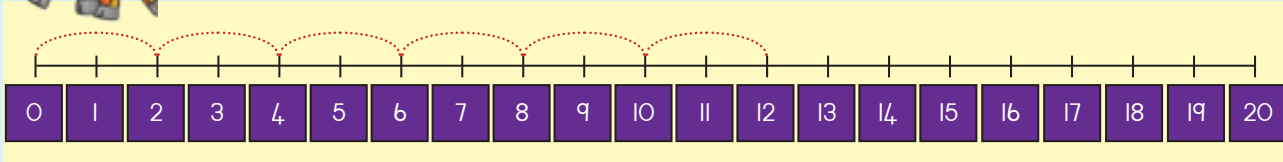
ditlhophadi di le 3 tsa 2

ditlhophadi di le 4 tsa 2

ditlhophadi di le 9 tsa 2



Thala setshwantsho sa tse di latelang, o bo o tlatse dikarabo tse di fa tlase.



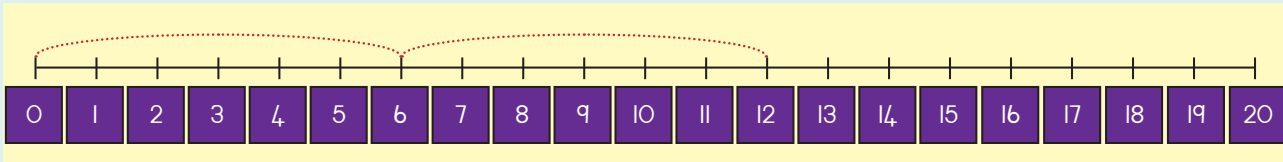
2, 4, 6, 8, _____, _____

$2 + 2 + 2 + 2 + 2 + 2 = \square$

ditlhopha di le 6 tsa 2 = \square

$6 \times 2 = \square$

Sethalo



6, _____

$6 + \square = \square$

ditlhopha di le 2 tsa $\square = \square$

$2 \times \square = \square$

Sethalo



Segokgo se le sengwe se na le matlho a le 8. Digokgo di le 7 di na le matlho a le makae?

2 4 6 8 10 12 14
16 18 20 22 24 26



Teacher:
Sign:
Date:



Katiso: $\times 5$

Go na le dimonamone di le kae mo tafoleng nngwe le nngwe?



Feleletsa tse di latelang: Re go diretse ya ntlha.



ditlhopha di le 3 tsa 5

$$5 + 5 + 5 = 15$$

$$3 \times 5 = 15$$



ditlhopha di le 2 tsa 5

$$5 + 5 =$$

$$2 \times 5 =$$



ditlhopha di le 4 tsa 5

$$5 + 5 + 5 + 5 =$$

$$4 \times 5 =$$



ditlhopha di le 6 tsa 5

$$5 + 5 + 5 + 5 + 5 + 5 =$$

$$6 \times 5 =$$



ditlhopha di le 7 tsa 5

$$5 + 5 + 5 + 5 + 5 + 5 + 5 =$$

$$7 \times 5 =$$



Dira sethalo sa tse di latelang.

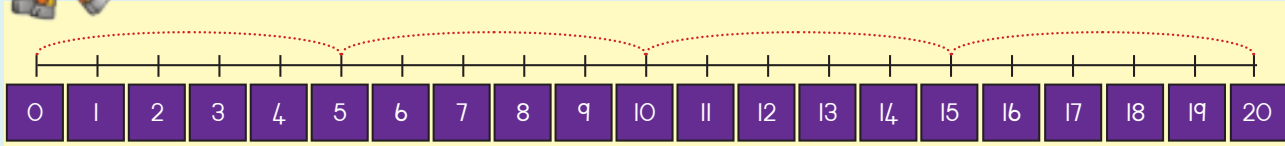
ditlhopha di le 3 tsa 5

ditlhopha di le 4 tsa 5

ditlhopha di le 5 tsa 5



Thala setshwantsho sa tse di latelang, o bo o tlatse dikarabo tse di fa tlase.



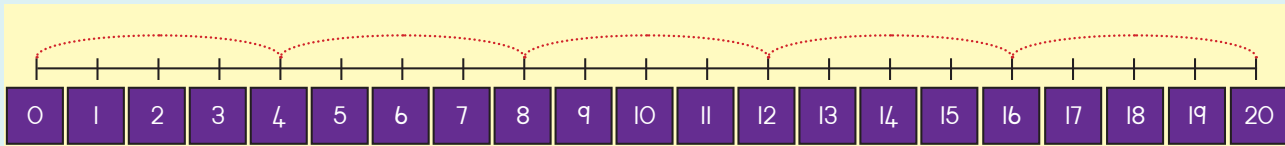
5, 10, 15, ___

$$5 + 5 + 5 + 5 = \square$$

$$\text{ditlhophadi le } 4 \text{ tsa } 5 = \square$$

$$4 \times 5 = \square$$

Sethalo




4, 8, 12, ___, ___

$$4 + 4 + 4 + 4 + 4 = \square$$

$$\text{ditlhophadi le } 5 \text{ tsa } 4 = \square$$

$$5 \times 4 = \square$$

Sethalo



5 10 15 20 25 30
35 40 45 50



Teacher: _____
Sign: _____
Date: _____



Dikgang tse dingwe tsa go atisa

Itirele kgang ya gago ka go dirisa palogotlhe ya ditsebe, diatla le maoto.

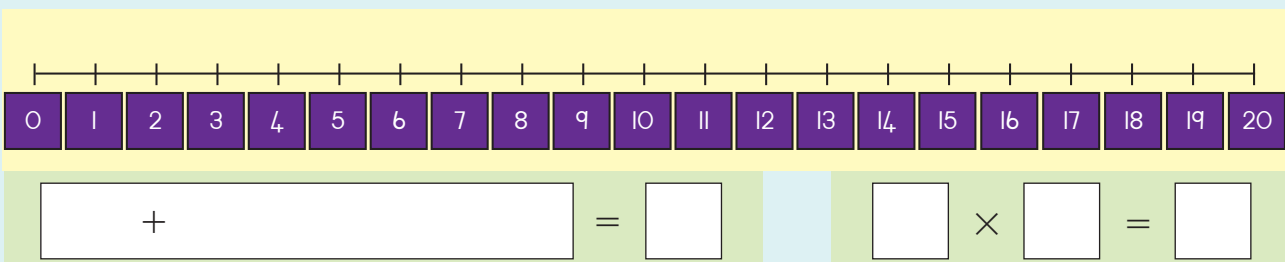


Re ditsala re le 10. Re na le diatla di le kae?

Dira sethalo.

Se bontshe ka dibadisi.

Se bontshe mo molapalong.





Lelapa la ga Susan le na le dipara tsa ditlhako di le 10. Ba na le ditlhako di le kae?

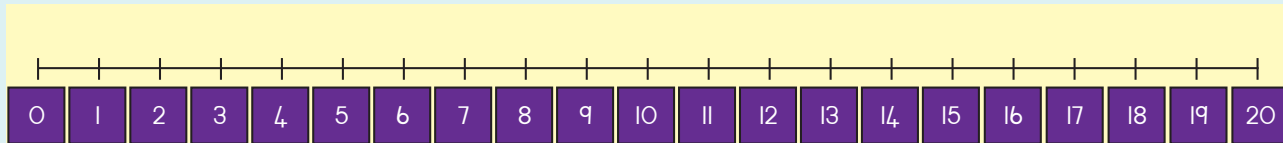
Dira sethalo.

Blank dashed box for drawing.

Se bontshe ka dibadisi.

Blank box for writing.

Se bontshe mo molapalong.



$\square + \square = \square$

$\square \times \square = \square$



Ikwalele kgang ya gago ka go dirisa bana ba le 6 le diatla tsa bona.

Blank lines for writing.



5 10 15 20 25 30 35




Teacher:
Sign:
Date:

Dilo tsa matlhakore a 3



Khalara dibolo tsotlhe ka bohobidu, dibokoso ka botala jwa tlhaga le disilintara ka botala jwa tlhaga.

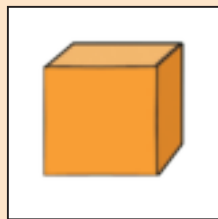


Tlhopha karabo e e nepagetseng.



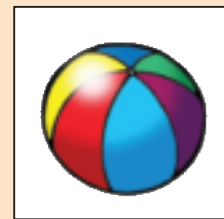
dintshi tse di tlhamaletseng

dintshi tse di kgolokwe



dintshi tse di tlhamaletseng

dintshi tse di kgolokwe

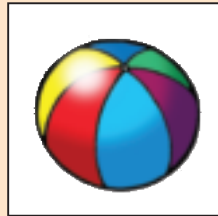


dintshi tse di tlhamaletseng

dintshi tse di kgolokwe

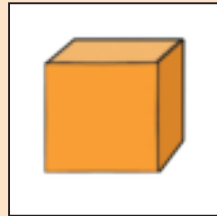


Bua gore a selo se tlaa kgokologa kgotsa se tlaa relela.



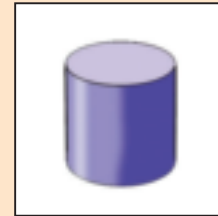
kgokologa

relela



kgokologa

relela



kgokologa

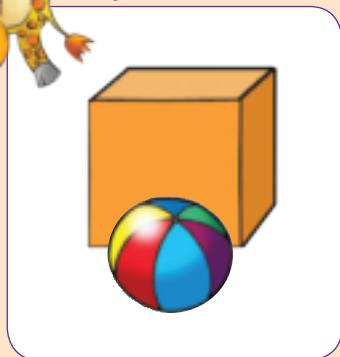
relela



Ke tse kae tsa dilo tse, tse o di bonang mo setshwantshong: disilintara, mabokoso le dibolo?

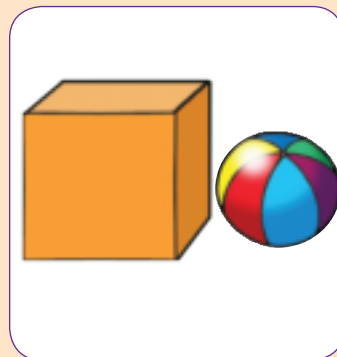


Kgwele e kae? A e fa pele ga lebokoso? A e kwa letlhakoreng? Kwa morago? Mo godimo?



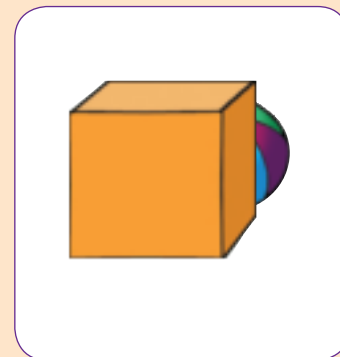
kwa pele ___ kwa
letlhakoreng ___

kwa morago ___ mo godimo



kwa pele ___ kwa
letlhakoreng ___

kwa morago ___ mo godimo



kwa pele ___ kwa
letlhakoreng ___

kwa morago ___ mo godimo



Teacher:

Sign:

Date:




Letlha:


Rulaganya o bo o bapisa dinomere: 1 – 40



Ke mang yo o nang le dinamune tse dintsi?



Ke mang yo o nang le diapole tse dintsi?



Tlatsa mabokoso a a se nang sepe mo sebadising sa dibaga.

●	●	●	●	●	●	●	●	●	●
1	2	3	4	5		7			10
●	●	●	●	●	●	●	●	●	●
	12				16		18		
●	●	●	●	●	●	●	●	●	●
21				25	26				30
●	●	●	●	●	●	●	●	●	●
31					36				40



Leba dibaga mme o arabe dipotso.

- Ke palo efe e nnyane go na le 8?
- Ke palo efe e kgolwane go na le 13?
- Ke palo efe e nnyane go na le 20?
- Ke palo efe e nnyane go na le 24?



Khalara dinomore tse dinnyane mo go 10 ka mmala wa botala jwa legodimo mme tse dikgolwane mo go 10 ka bohibidu.

1	2	3	4	5	6	7	8	9	10
11	12	13	14	15	16	17	18	19	20

Khalara dinomore tse dinnyane mo go 30 mme di le dikgolwane mo go 24 ka mmala o botala jwa legodimo.

20	21	22	23	24	25	26	27	28	29	30
----	----	----	----	----	----	----	----	----	----	----

Khalara dinomore tse dinnyane mo go 40 mme di le dikgolwane mo go 36 ka serolwana.

30	31	32	33	34	35	36	37	38	39	40
----	----	----	----	----	----	----	----	----	----	----

Khalara dipalomaleka ka serolwana mme dipalomafeta ka botala jwa tlhaga.

1	2	3	4	5	6	7	8	9	10
11	12	13	14	15	16	17	18	19	20
21	22	23	24	25	26	27	28	29	30
31	32	33	34	35	36	37	38	39	40
41	42	43	44	45	46	47	48	49	50



Ke palomafeta efe e e tlang morago ga 10?

Ke palomaleka efe e e tlang pele ga 10?

Kwala dipalomaleka tse di magareng ga 14 le 24.

Kwala dipalomafeta tse di magareng ga 5 le 15.

Ke palomafeta efe e e tlang morago ga 21?

Ke palomaleka efe e e tlang pele ga 24?

Kwala dipalomaleka tse di magareng ga 20 le 30.

Kwala dipalomafeta tse di magareng ga 20 le 30.



Teacher:

Sign:

Date:







Rulaganya mme o bapise: 40 – 50

Ke mang yo o nang le dipeinapole tse dintsi?



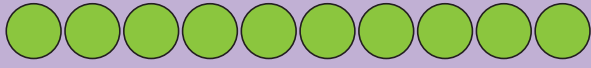





kgotsa



			
---	---	--	---



Bala dibaga mme o tlatse mabokoso a a se nang sepe.

	
1 2 3 4 5	32
	
19	50
	
28	51 52 53 54 55 56 57 58 59 60



Leba dibaga le go araba dipotso.

Ke palo efe e nnyane go na le 3?

Ke palo efe e kgolo go na le 31?

Ke palo efe e nnyane go na le 38?

Ke palo efe e nnyane go na le 47?



Khalara dipalo tse dinnyane mo go 40 le tse dikgolwane mo go 36 ka botala jwa tlhaga.

30	31	32	33	34	35	36	37	38	39	40
----	----	----	----	----	----	----	----	----	----	----

Dipalo tse dinnyane go na le 40.

Dipalo tse dikgolwane go na le 36.



Khalara dipalomaleka serolwana mme dipalomafeta botala jwa tlhaga.

40	41	42	43	44	45	46	47	48	49	50
----	----	----	----	----	----	----	----	----	----	----

Ke dipalomafeta dife tse di tlang morago ga 40?

Ke dipalomaleka dife tse di tlang fa pele ga 43?

Kwala dipalomaleka tse di magareng ga 40 le 50.

Kwala dipalomafeta tse di magareng ga 40 le 50.

Ke dipalomafeta dife tse di tlang morago ga 40?

Ke dipalomaleka dife tse di tlang pele ga 41?



Teacher:

Sign:

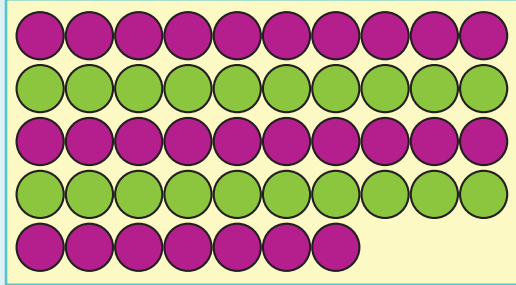
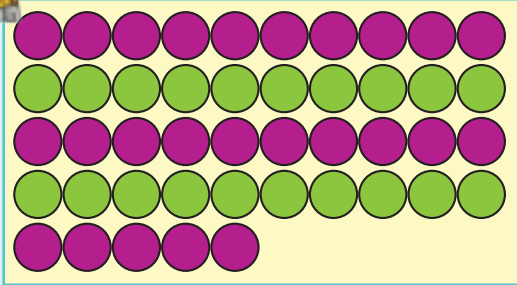
Date:



Dipalo 40 – 50



O bala dibaga di le kae?



Palo

Re ka e kwala jaana.

45

40 + 5 = 45

Palo

Re ka e kwala jaana.

+ =

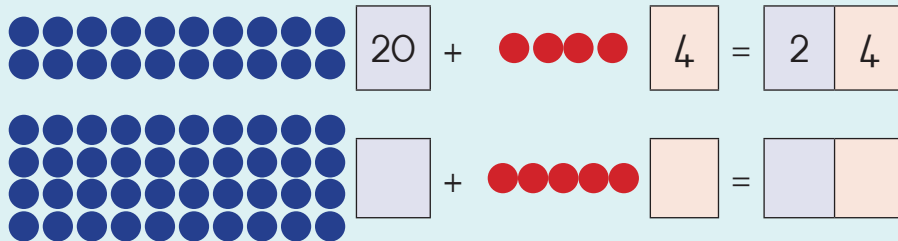


Feleletsa tse di latelang.

20	21	22							
30				34					
		42							



Feleletsa tse di latelang.





Kwala mafoko a.

41	_____	42	_____
43	_____	44	_____
45	_____	46	_____
47	_____	48	_____
49	_____	50	_____



Leba sekao mme o feleetse tse di setseng.

45	=	4	masome	+	5	metso
43	=		masome	+		metso
42	=		masome	+		metso

44	=		masome	+		metso
41	=		masome	+		metso
48	=		masome	+		metso



Kwala palo e e nepagetseng mo kholomong e e nepagetseng.


	Masome	Metso
27		
34		
46		
41		
39		



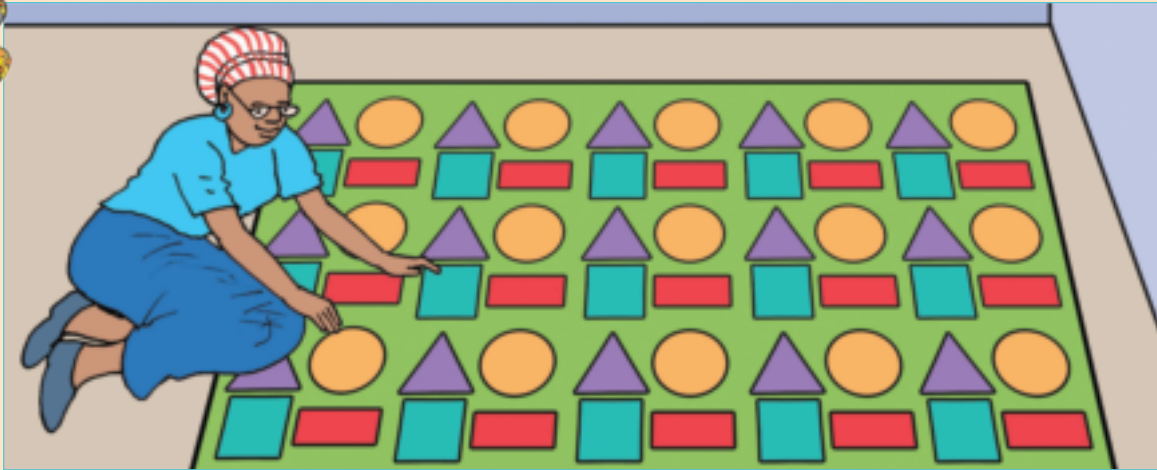
Teacher:
Sign:
Date:




Dikwere, dikhutlonnetsepa, dikhutlotharo le didiko



Nkoko o dirile kobo e ntle e. Supa diboepgo tsotlhe.



Khalara dikwere ka botala jwa legodimo, dikhutlonnetsepa ka serolwana, dikhutlotharo ka botala jwa tlhaga le didiko ka bohibidu.




Tlhopha o bo o khalara karabo e e nepagetseng.



dintshi tse di tlhamaletseng

dintshi tse di kgolokwe




dintshi tse di tlhamaletseng

dintshi tse di kgolokwe



dintshi tse di tlhamaletseng

dintshi tse di kgolokwe

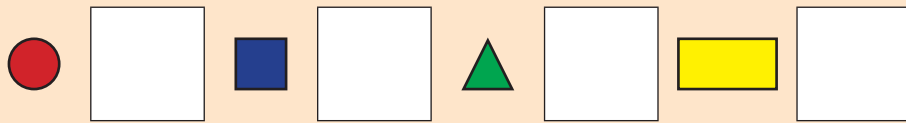



dintshi tse di tlhamaletseng


dintshi tse di kgolokwe



O bala di    le  di le kae?



Thala setshwantsho sa gago ka go dirisa didiko, dikwere, dikhutlotharo le dikhutlonne.



Teacher:

Sign:

Date:



Letlha:

Go tlhakanya le go ntsha go fitlha ka 20



Go gakologelwa ka bonako.

$4 + 5 - 1 =$	$13 - 9 + 2 =$	$20 - 7 + 1 =$	$10 + 5 - 4 =$
$10 + 3 + 2 =$	$9 + 3 - 2 =$	$8 - 2 - 1 =$	$13 - 8 + 1 =$
$9 - 4 - 3 =$	$18 - 9 - 4 =$	$7 + 8 + 1 =$	$16 - 7 + 3 =$
$14 - 6 + 4 =$	$12 - 5 - 2 =$	$19 - 10 + 5 =$	$6 + 5 - 3 =$


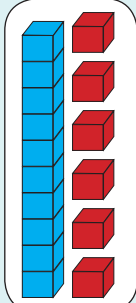


Tlhakanya tse di latelang.

	$= 10 + 8$ $= 18$
	$= 10 + 8$ $= 18$
	$= 10 + 8$ $= 18$




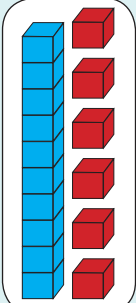
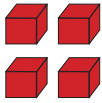
Ntsha tse di latelang.



$$= 10 - 4$$

$$= 10 - 2$$

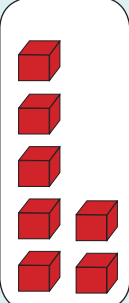
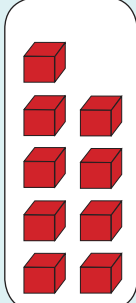
$$= 8$$



$$= \square - \square$$

$$= \square + \square$$

$$= \square$$



$$= \square - \square$$

$$= \square$$



Ke rekile dimonamone di le 15. Ke jele di le 2.
Ke neile tsala ya me di le 4. Ke setse ka dimonamone di le kae?



Teacher:
Sign:
Date:



Letlha:



Go tlhakanya le go ntsha go fitlha ka 50

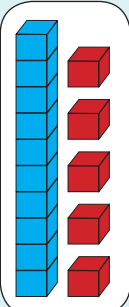
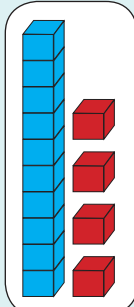


Go gakologelwa ka bonako.

$20 + 2 - 1 =$	$36 - 6 + 2 =$	$42 - 2 + 4 =$	$47 + 4 - 1 =$
$30 + 3 + 6 =$	$42 + 9 - 1 =$	$33 - 2 - 1 =$	$49 - 1 + 2 =$
$55 - 5 - 0 =$	$38 - 7 - 1 =$	$45 + 1 + 2 =$	$50 - 5 + 3 =$
$24 - 3 + 2 =$	$32 - 5 - 2 =$	$49 - 10 + 1 =$	$29 + 5 - 4 =$



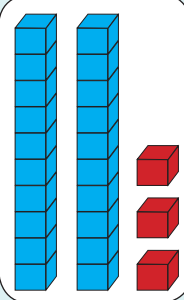
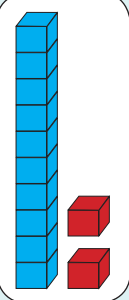
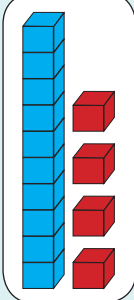
Tlhakanya tse di latelang.



$$= \square + \square$$

$$= \square + \square$$

$$= \square$$



$$= \square + \square + \square + \square$$

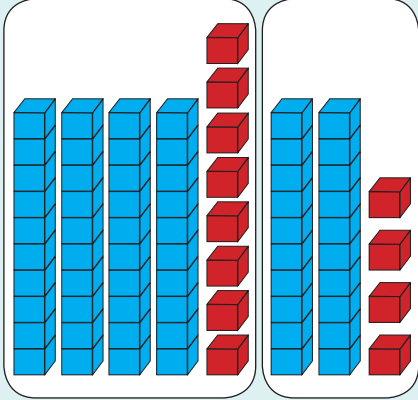
$$= \square + \square$$

$$= \square$$

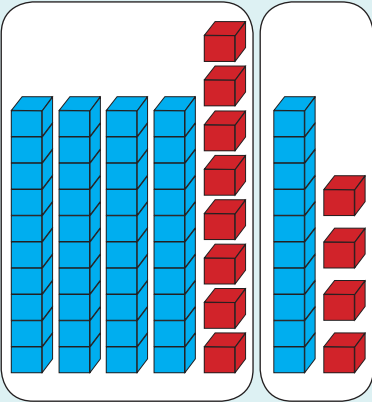
Jaanong leka mokgwa wa gago.



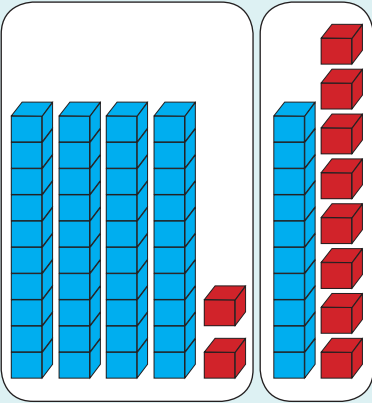
Ntsha tse di latelang.



$$\begin{aligned}
 &= 40 - 8 \\
 &= 40 - 20 + 8 - 4 \\
 &= 20 - 4 \\
 &= 24
 \end{aligned}$$



$$\begin{aligned}
 &= \square - \square - \square - \square \\
 &= \square - \square + \square - \square \\
 &= \square + \square \\
 &= \square
 \end{aligned}$$



$$\begin{aligned}
 &= \square - \square - \square - \square \\
 &= \square - \square + \square - \square \\
 &= \square - \square \\
 &= \square
 \end{aligned}$$



Ke na le pampiritšhelete ya R10, khoene ya R5, pampiritšhelete ya R20 le khoene ya R2 mo bankeng ya me ya kolobe. Ke bolokile bokae?

R20 R5 R2
R10



Teacher:
Sign:
Date:

39a

Kgweitharo 2



Letlha:

Go tlhakanya gape

Tlhakanya dipalo mo bolokong bongwe le bongwe o bo o kwala palogotlhe.

1	10	5
	10	

2	10	6
	20	

3	20	5
	20	

4	20	4
	10	



Tlhakanya.

0 1 2 3 4 5 6 7 8 9 10 11 12 13 14 15 16 17 18 19 20 21 22 23 24 25 26 27 28 29 30

$$13 + 12 = \square$$

0 1 2 3 4 5 6 7 8 9 10 11 12 13 14 15 16 17 18 19 20 21 22 23 24 25 26 27 28 29 30

$$14 + 12 = \square$$

0 1 2 3 4 5 6 7 8 9 10 11 12 13 14 15 16 17 18 19 20 21 22 23 24 25 26 27 28 29 30

$$19 + 11 = \square$$

0 1 2 3 4 5 6 7 8 9 10 11 12 13 14 15 16 17 18 19 20 21 22 23 24 25 26 27 28 29 30

$$16 + 13 = \square$$

0 1 2 3 4 5 6 7 8 9 10 11 12 13 14 15 16 17 18 19 20 21 22 23 24 25 26 27 28 29 30

$$15 + 14 = \square$$



Letlha:

Go tlhakanya (tsweletso)



Kwala palogotlhe.

$$\boxed{12} + \boxed{10} = \boxed{}$$



$$\boxed{15} + \boxed{10} = \boxed{}$$



$$\boxed{19} + \boxed{10} = \boxed{}$$



Thala dibaga tsotlhe tse di setseng mme o feletse dipalo.

0 10 20 30

$$\boxed{} + \boxed{} + \boxed{} + \boxed{} = \boxed{}$$

0 10 20 30

$$\boxed{} + \boxed{} + \boxed{} + \boxed{} = \boxed{}$$

0 10 20 30

$$\boxed{} + \boxed{} + \boxed{} + \boxed{} = \boxed{}$$

0 10 20 30

$$\boxed{} + \boxed{} + \boxed{} + \boxed{} = \boxed{}$$



Feleletsa.

28	+	11	=	2	8	+	10	+	1	=	38	+	1	=	39
34	+	12	=	3	4	+	10	+	2	=		+		=	
23	+	13	=	2	3	+	10	+	3	=		+		=	
35	+	12	=	3	5	+	10	+	2	=		+		=	
26	+	11	=	2	6	+	10	+	1	=		+		=	



Tlhakanya.

$11 + 10 =$	$23 + 10 =$	$36 + 10 =$
$28 + 10 =$	$37 + 10 =$	$12 + 10 =$
$34 + 10 =$	$29 + 10 =$	$15 + 10 =$




Karabo ya 27 le 16 ke?

Thala setshwantsho go bontsha karabo ya gago.



Dira palo ya gago ya mafoko ka go dirisa ditshwantsho.




Teacher:
Sign:
Date:

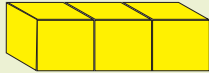
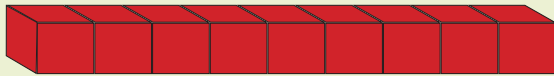
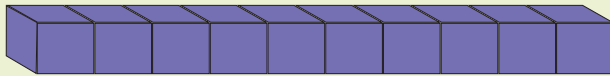
Letlha:



Boleele



Khalara karabo e e nepagetseng go bontsha gore a mela e le dikholomo tse di dikhutshwanyana kgotsa di ditelejana, kgotsa di sepharanyana kgotsa di ditshesanyane. Khalara karabo ya gago ka mmala o o tshwanang le wa diboloko.



khutshwane

telele

khutshwane

telele

khutshwane

telele

khutshwane

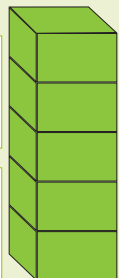

telele

bopharanyana

bosesaneyana

khutshwane

telele





Jaanong bontsha gore ke mosimane ofe yo moleele. Khalara karabo go tshwana le borokgwe jo bokhutshwane jwa mosimane.



khutshwane

telele



telele

khutshwane



khutshwane

telele




Lekanyetsa boleele jwa lebala la metshameko o dirisa diatla le dinao go tswa mo go tse di segeletsweng ruri l.

Lepatlelo le boleele jwa diatla di le kae?

Lepatlelo le boleele jwa dinao di le kae?

boleele



Teacher:

Sign:

Date:



Letsha:

Go ntsha

Golaganya dikarata le dipalo tsa go ntsha.

10	10	10	10	10
2 2	8 8	7 7	5 5	3 3

$7 - 17 = 10$	$12 - 2 = 10$	$15 - 5 = 10$	$3 - 13 = 10$	$18 - 8 = 10$
---------------	---------------	---------------	---------------	---------------



Dirisa molapalo. Kwala karabo e o e bonang morago ga go ntsha.

Number line from 0 to 20. Blue circles from 0 to 10, red circles from 11 to 20. A bracket spans from 4 to 14.

$14 - 4 = 10$

Number line from 0 to 20. Purple circles from 0 to 10, yellow circles from 11 to 20. A bracket spans from 10 to 18.

$\square - \square = \square$

Number line from 0 to 20. Green circles from 0 to 10, purple circles from 11 to 20. A bracket spans from 11 to 19.

$\square - \square = \square$

Number line from 0 to 20. Orange circles from 0 to 10, brown circles from 11 to 20. A bracket spans from 11 to 17.

$\square - \square = \square$



Ntsha.

$$\begin{array}{l} 10 \text{ } 3 - 3 = \square \\ 10 \text{ } 5 - 5 = \square \\ 10 \text{ } 1 - 1 = \square \\ 10 \text{ } 4 - 4 = \square \\ 10 \text{ } 9 - 9 = \square \end{array}$$

$$\begin{array}{l} 10 \text{ } 2 - 2 = \square \\ 10 \text{ } 7 - 7 = \square \\ 10 \text{ } 6 - 6 = \square \\ 10 \text{ } 8 - 8 = \square \\ 10 \text{ } 9 - 5 = \square \end{array}$$



Ntsha.

$16 - 13$

10	10	20	
6	3	=	3

$$16 - 13 = 3$$

$14 - 12$

10	10	□	
4	2	=	□

$$14 - 12 = \square$$

$27 - 11$

20	10	□	
7	1	=	□

$$\square - \square = \square$$

$35 - 13$

30	10	□	
5	3	=	□

$$\square - \square = \square$$

$26 - 12$

20	10	□	
6	2	=	□

$$\square - \square = \square$$

$48 - 11$

40	10	□	
8	1	=	□

$$\square - \square = \square$$



Lisa o na le dibadisi di le 17. O latlhegetswe ke dibadisi di le 8.

O setse ka dibadisi di le kae?



Teacher: _____
Sign: _____
Date: _____

42a

Kgweitharo 2



Letha:

Go ntsha gape



Ntsha dinomere tse di fa tlase go tswa mo go tse di fa godimo.

10 7 17	20 2 	30 8 	40 9
10 5 15	10 1 	10 5 	10 4
2			



Dirisa molapalo. Kwala karabo e o e bonang morago ga go ntsha.

Number line 1: 0 to 30. 10 red dots between 10 and 20. Equation: $25 - 12 = \square$

Number line 2: 0 to 30. 10 brown dots between 10 and 20. Equation: $\square - \square = \square$

Number line 3: 0 to 30. 10 green dots between 10 and 20. Equation: $\square - \square = \square$

Number line 4: 0 to 30. 10 blue dots between 10 and 20. Equation: $\square - \square = \square$

Number line 5: 0 to 30. 10 yellow dots between 10 and 20. Equation: $\square - \square = \square$



Ntsha.

$$45 - 23$$

$$= 40 + 5 - 20 - 3$$

$$= 40 - 20 + 5 - 3$$

$$= 20 + 2$$

$$= 22$$

$$38 - 16$$

$$= \square + \square - \square - \square$$

$$= \square - \square + \square - \square$$

$$= \square + \square$$

$$= \square$$

$$29 - 14$$

$$= \square + \square - \square - \square$$

$$= \square - \square + \square - \square$$

$$= \square + \square$$

$$= \square$$

$$48 - 11$$

$$= \square + \square - \square - \square$$

$$= \square - \square + \square - \square$$

$$= \square + \square$$

$$= \square$$

$$35 - 23$$

$$= \square + \square - \square - \square$$

$$= \square - \square + \square - \square$$

$$= \square + \square$$

$$= \square$$

$$38 - 15$$

$$= \square + \square - \square - \square$$

$$= \square - \square + \square - \square$$

$$= \square + \square$$

$$= \square$$



Teacher:
Sign:
Date:

42b

Letlha:

Kgweditlharo 2

Go ntsha go gongwe gape (tsweletso)

Ntsha mme o tsenye karabo ya gago mo lebokosong le le se nang sepe (lolea)?

$$\boxed{22} - \boxed{10} = \boxed{}$$



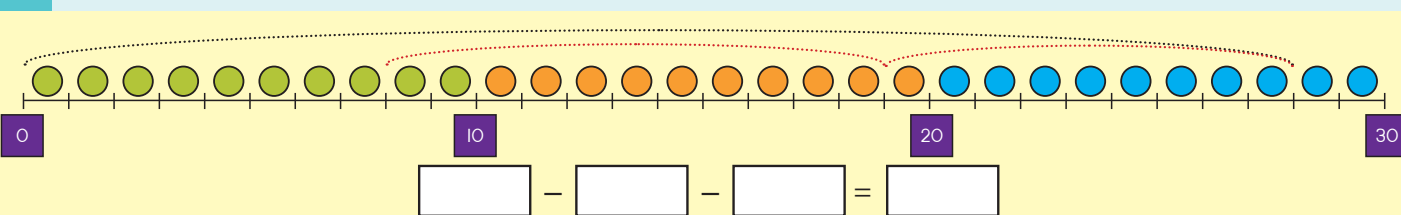
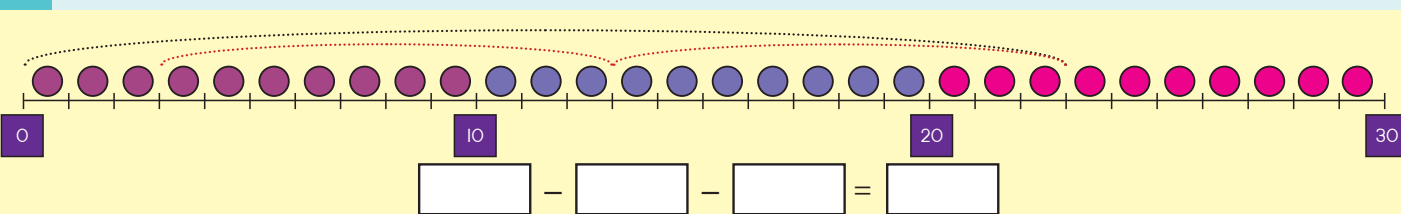
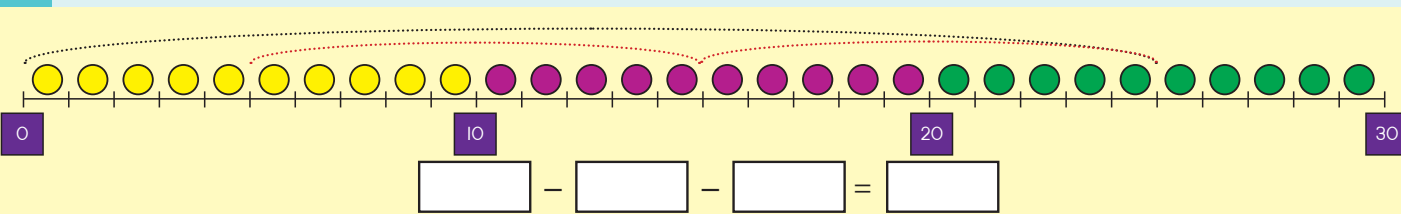
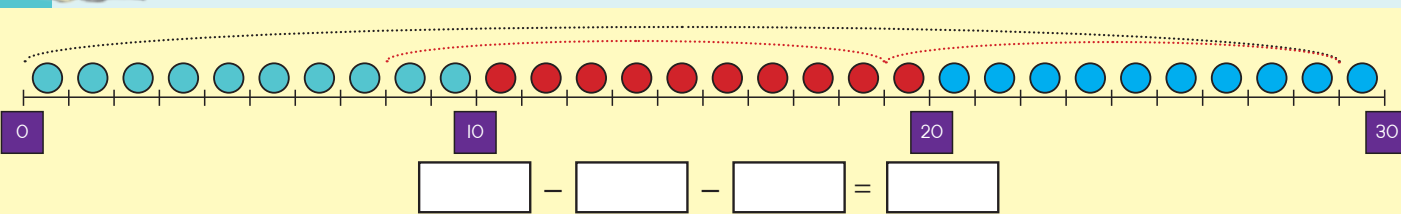
$$\boxed{25} - \boxed{10} = \boxed{}$$



$$\boxed{29} - \boxed{10} = \boxed{}$$



Feleletsa dipalo tsa go ntsha.





Feleletsa.

$$46 - 13 = \square$$

$$49 - 23 = \square$$

$$38 - 14 = \square$$

$$27 - 16 = \square$$

$$25 - 11 = \square$$

$$46 - 32 = \square$$



Ntsha.

$$\begin{array}{l} 21 - 10 = \square \\ 28 - 10 = \square \\ 34 - 10 = \square \end{array}$$

$$\begin{array}{l} 43 - 10 = \square \\ 27 - 10 = \square \\ 37 - 10 = \square \end{array}$$

$$\begin{array}{l} 16 - 10 = \square \\ 22 - 10 = \square \\ 45 - 10 = \square \end{array}$$




Pharologano magareng ga 35 le 20 ke? Thala setshwantsho go bontsha karabo ya gago.

$$\boxed{35} - \boxed{20} = \underline{\quad\quad\quad} \quad \square$$



Itirele lefokopalo ka go dirisa ditshwantsho.




Teacher:
Sign:
Date:



Bokete le botlhofo

Lebelela setshwantsho sengwe le sengwe o bo o araba potsa.

Ke sefe se se botlhofo thata? Ke sefe se se bokete thata?

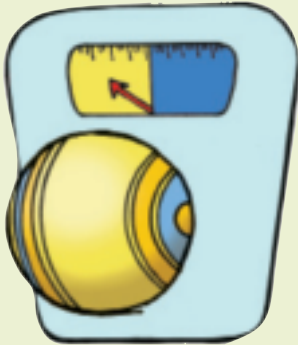


Kgomaretsa kgotsa thala ditshwantsho tsa:



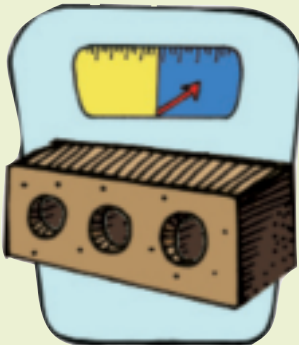
Dilo tse di bokete	Dilo tse di botlhofo



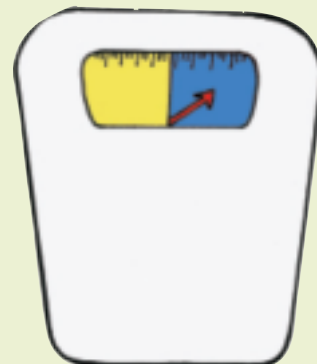
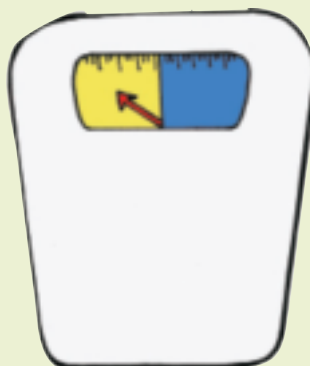
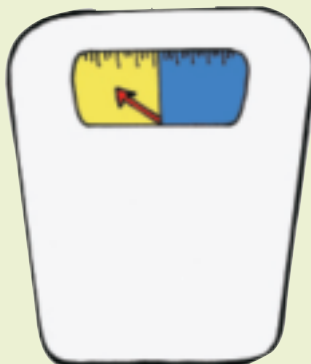
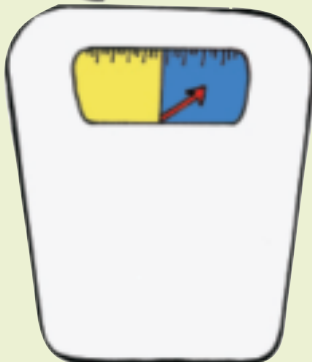
Fa motsu o mohibidu o supela kwa letlhakoreng le le serolwana selo se botlhofo mme fa o supela kwa letlhakoreng le le botala jwa legodimo selo se bokete. Kwala botlhofo kgotsa bokete.



botlhofo



Thala kgotsa kgomaretsa dilo go ya ka moo sekale se bontshang ka teng.



Teacher:

Sign:

Date:




Letlha:



Dipateronepalo: Bo-pedi

A re baleng ka bobedi.



Thala kgotsa kgomaretsa ditshwantsho tsa dilo tse di tlang ka bobedi.

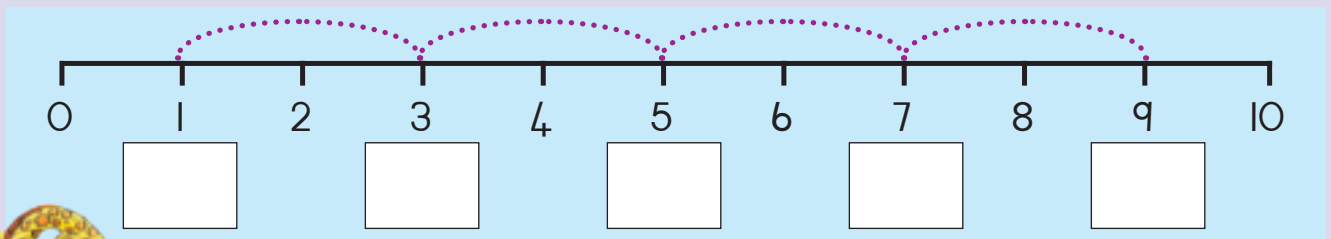
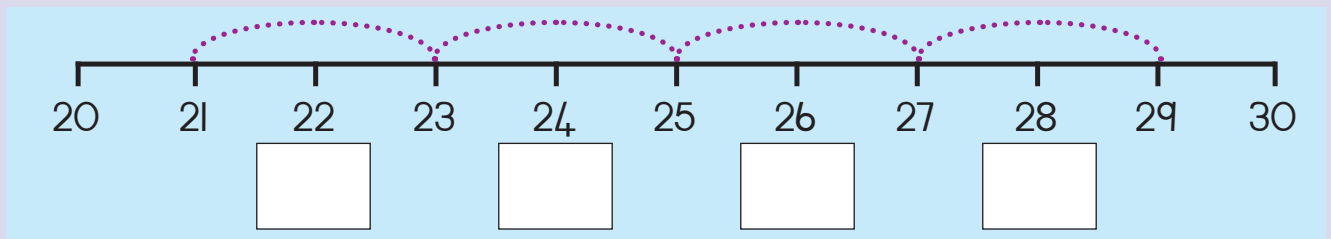
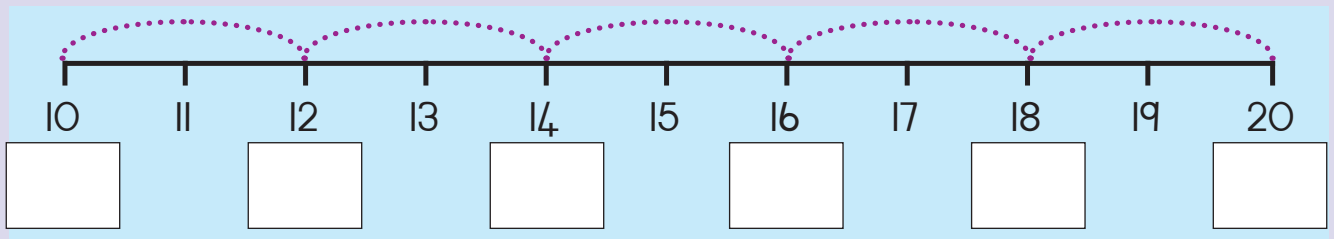
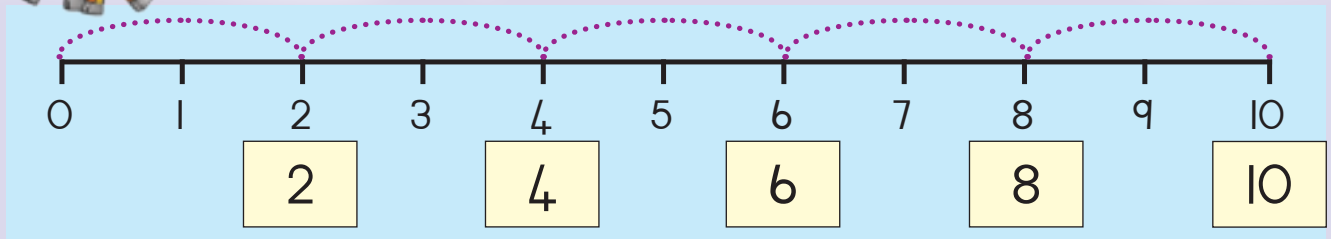


Re simolotse paterone. E feleletse.

1	2	3	4	5	6	7	8	9	10
11	12	13	14	15	16	17	18	19	20
21	22	23	24	25	26	27	28	29	30
31	32	33	34	35	36	37	38	39	40
41	42	43	44	45	46	47	48	49	50
51	52	53	54	55	56	57	58	59	60
61	62	63	64	65	66	67	68	69	70
71	72	73	74	75	76	77	78	79	80
81	82	83	84	85	86	87	88	89	90
91	92	93	94	95	96	97	98	99	100



Dirisa melapalo go kwala paterone.



Feleletsa tse di latelang.

2, 4, 6, __, __, __

62, 64, 66, __, __, __

44, 46, 48, __, __, __

1, 3, 5, __, __, __

13, 15, 17, __, __, __

55, 57, 59, __, __, __

10, 8, 6, __, __, __

98, 96, 94, __, __, __

26, 24, 22, __, __, __

11, 9, 7, __, __, __

29, 27, 25, __, __, __

95, 93, 91, __, __, __



Teacher: _____
Sign: _____
Date: _____



Letlha:

Oketsa gabedi

Lebelela setshwantsho sa ntlha le sa bobedi. Go diragetse eng?

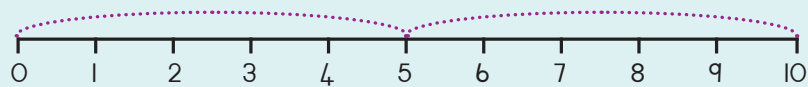
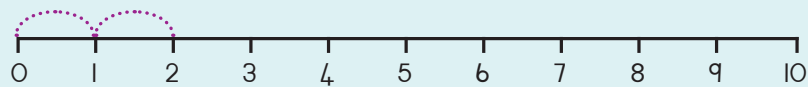
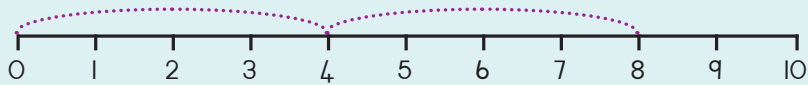
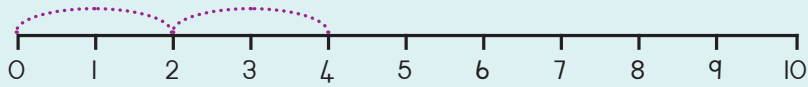
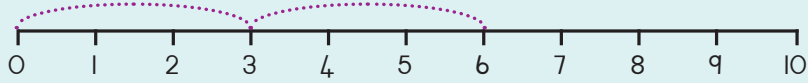


Tsenya maronthorontho o bo o kwala karabo ya e nngwe le e nngwe.

		<input type="text"/> + <input type="text"/> = <input type="text"/>
		<input type="text"/> + <input type="text"/> = <input type="text"/>
		<input type="text"/> + <input type="text"/> = <input type="text"/>
		<input type="text"/> + <input type="text"/> = <input type="text"/>
		<input type="text"/> + <input type="text"/> = <input type="text"/>



Dirisa melapalo go kwala palo.



$$\square + \square = \square$$

$$\square + \square = \square$$

$$\square + \square = \square$$

$$\square + \square = \square$$

$$\square + \square = \square$$



Bala dinomere tse di latelang gabedi.

Bala 1 gabedi

$$1 + 1 = 2$$

$$2 \times 1 = 2$$

Bala 2 gabedi

$$\square + \square = \square$$

$$2 \times \square = \square$$

Bala 3 gabedi

$$\square + \square = \square$$

$$2 \times \square = \square$$

Bala 4 gabedi

$$\square + \square = \square$$

$$2 \times \square = \square$$

Bala 5 gabedi

$$\square + \square = \square$$

$$2 \times \square = \square$$



Ke na le R5. Tsala ya me e na le yona gabedi. Tsala ya me e na le bokae?



Teacher:

Sign:


Date:



Letha:

Oketsa gabedi gape

Lebelela setshwantsho sa ntlha le sa bobedi. Go diragetse eng?

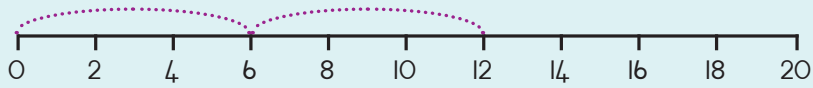


Tlhakanya maronthorontho o bo o kwala karabo ya e nngwe le e nngwe.

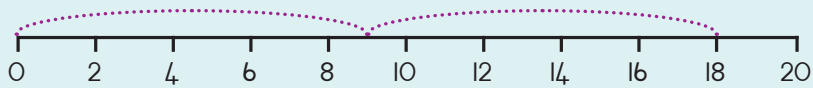
		<input type="text"/>	+	<input type="text"/>	=	<input type="text"/>
		<input type="text"/>	+	<input type="text"/>	=	<input type="text"/>
		<input type="text"/>	+	<input type="text"/>	=	<input type="text"/>
		<input type="text"/>	+	<input type="text"/>	=	<input type="text"/>
		<input type="text"/>	+	<input type="text"/>	=	<input type="text"/>



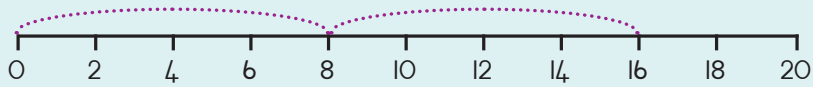
Dirisa melapalo go kwala palo.



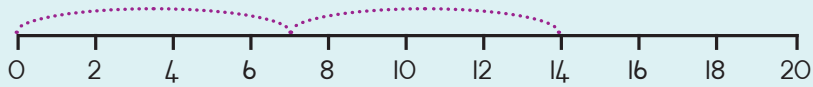
$$\square + \square = \square$$



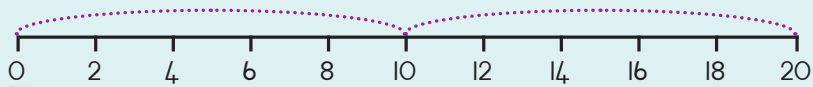
$$\square + \square = \square$$



$$\square + \square = \square$$



$$\square + \square = \square$$



$$\square + \square = \square$$



Bala dinomere tse di latelang gabedi.

Bala 6 gabedi

$$\square + \square = \square$$

$$2 \times 6 = 12$$

Bala 7 gabedi

$$\square + \square = \square$$

$$2 \times \square = \square$$

Bala 8 gabedi

$$\square + \square = \square$$

$$2 \times \square = \square$$

Bala 9 gabedi

$$\square + \square = \square$$

$$2 \times \square = \square$$

Bala 10 gabedi

$$\square + \square = \square$$

$$2 \times \square = \square$$



Tsala ya me e na le dimmabole di le 9. Ke na le tsona gabedi. Ke na le dimmabole di le kae?



Teacher:

Sign:

Date:



Letlha:

Oketsa gabedi

8 Gabedi

1 2 3 4 5 6 7 8 1 2 3 4 5 6 7 8



1 2 3 4 5 6 7 8 9 10 11 12 13 14 15 16

9 Gabedi

1 2 3 4 5 6 7 8 9 1 2 3 4 5 6 7 8 9



1 2 3 4 5 6 7 8 9 10 11 12 13 14 15 16 17 18



Sekeletsa dibaga go oketsa dipalo gabedi. Re go simoleletse ya ntlha.

Bala 5 gabedi



$$\boxed{5} + \boxed{5} = \boxed{}$$

Bala 6 gabedi



$$\boxed{} + \boxed{} = \boxed{}$$

Bala 7 gabedi



$$\boxed{} + \boxed{} = \boxed{}$$

Bala 8 gabedi



$$\boxed{} + \boxed{} = \boxed{}$$

Bala 9 gabedi



$$\boxed{} + \boxed{} = \boxed{}$$



Bala dinomore gabedi. Khalara diboloko go bontsha karabo ya gago.

Bala 6 gabedi

$$6 + 6 = \square$$

$$2 \times 6 = \square$$

Bala 8 gabedi

$$\square + \square = \square$$

$$2 \times \square = \square$$


Bala 7 gabedi

$$\square + \square = \square$$

$$2 \times \square = \square$$

Bala 9 gabedi

$$\square + \square = \square$$

$$2 \times \square = \square$$


Bala tse di latelang gabedi.

Bala 7 gabedi

$$\square + \square = \square$$

$$2 \times \square = \square$$

Bala 9 gabedi

$$\square + \square = \square$$

$$2 \times \square = \square$$

Bala 6 gabedi

$$\square + \square = \square$$

$$2 \times \square = \square$$

Bala 8 gabedi

$$\square + \square = \square$$

$$2 \times \square = \square$$

Bala 10 gabedi

$$\square + \square = \square$$

$$2 \times \square = \square$$



Ke nositse dintlha di le 8. Tsala ya me e di nositse gabedi.
Tsala ya me e nositse dintlha di le kae?



Teacher:

Sign:


Date:



Letlha:

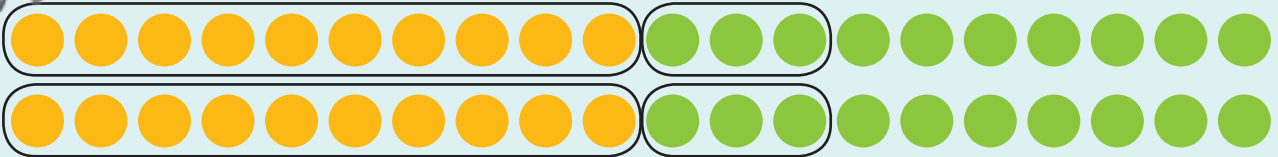
Tsweletso ya go oketsa gabedi

Bala 12 gabedi



Sekeletsa dibaga go oketsa dipalo gabedi. Re go simoleletse ya ntlha.

Bala 13 gabedi




Bala 15 gabedi

$$\square + \square = \square$$




Bala 14 gabedi

$$\square + \square = \square$$




Bala 11 gabedi

$$\square + \square = \square$$



Bala 16 gabedi

$$\square + \square = \square$$



$$\square + \square = \square$$



Oketsa dipalo gabedi. Khalara diboloko go bontsha karabo ya gago.

Bala 11 gabedi

$$\begin{array}{l} \square + \square = \square \\ 2 \times \square = \square \end{array}$$

Bala 13 gabedi

$$\begin{array}{l} \square + \square = \square \\ 2 \times \square = \square \end{array}$$

Bala 14 gabedi

$$\begin{array}{l} \square + \square = \square \\ 2 \times \square = \square \end{array}$$

Bala 15 gabedi

$$\begin{array}{l} \square + \square = \square \\ 2 \times \square = \square \end{array}$$

Oketsa tse di latelang gabedi.



Bala 11 gabedi

$$\square + \square = \square$$

Bala 13 gabedi

$$\square + \square = \square$$

Bala 16 gabedi

$$\square + \square = \square$$

Bala 17 gabedi

$$\square + \square = \square$$

Bala 18 gabedi

$$\square + \square = \square$$

$$2 \times \square = \square$$

$$2 \times \square = \square$$

$$2 \times \square = \square$$

$$2 \times \square = \square$$

$$2 \times \square = \square$$


Ke bone mafoko a le 14 mo motshamekong wa mopeleto. Mofenyi o bone palo eo gabedi. Mofenyi o bone mafoko a le makae?



Teacher:

Sign:

Date:



Diduti le mothamo

Buang ka ga diduti tse di mo didesekeeng.

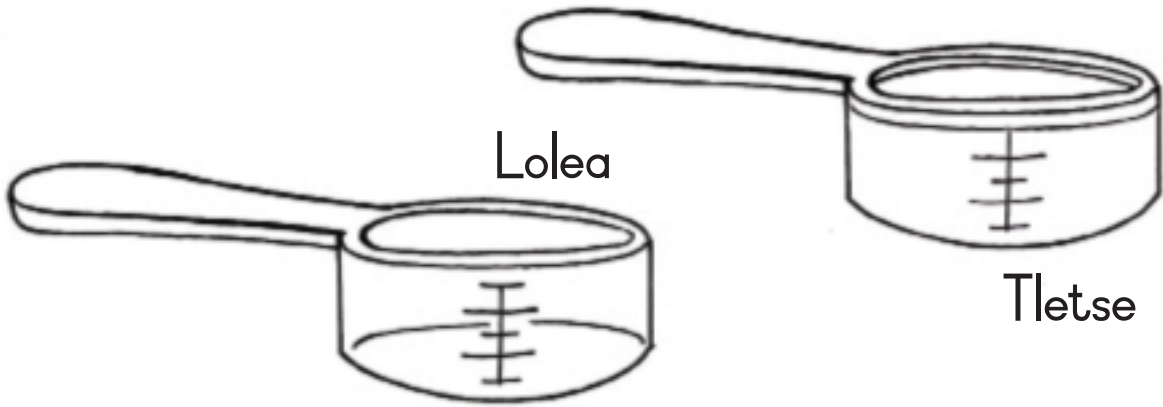


Bua gore a seduti se tletse kgotsa se lolea.





Khalara go bontsha gore diduti kana ditshelo tse di _____.



Thala diduti tsa gago o bo o khalara diteng tsa tsona go bontsha:

Lolea	Tletse
Lolea	Tletse



Teacher:
Sign:
Date:



Katiso: $\times 3$

Go na le dimonamone di le kae mo tafoleng nngwe le nngwe?




Feleletsa tse di latelang:

●●● ●●●
 ditlhopho di le 2 tsa 3 $3 + 3 =$ $2 \times 3 =$

●●● ●●● ●●● ●●● ●●●
 ditlhopho di le 5 tsa 3 $3 + 3 + 3 + 3 + 3 =$ $5 \times 3 =$

●●● ●●● ●●● ●●●
 ditlhopho di le 4 tsa 3 $3 + 3 + 3 + 3 =$ $4 \times 3 =$

●●● ●●● ●●● ●●● ●●● ●●●
 ditlhopho di le 6 tsa 3 $3 + 3 + 3 + 3 + 3 + 3 =$ $6 \times 3 =$

●●● ●●● ●●● ●●● ●●● ●●● ●●●
 ditlhopho di le 7 tsa 3 $3 + 3 + 3 + 3 + 3 + 3 + 3 =$ $7 \times 3 =$



Dira sethalo sa tse di latelang:

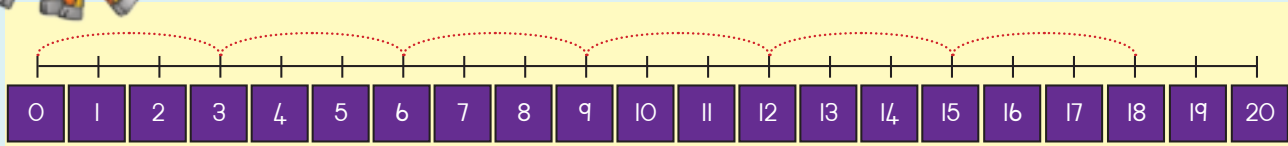
ditlhopho di le 3 tsa 3

ditlhopho di le 4 tsa 3

ditlhopho di le 5 tsa 3



Dira sethalo sa tse di latelang:



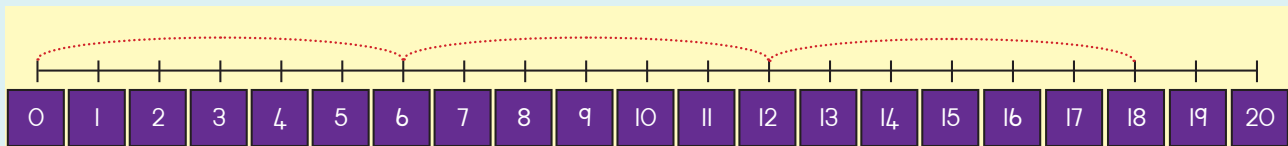
3, 6, 9, 12, ____, ____

$3 + 3 + 3 + 3 + 3 + 3 = \square$

ditlhopha di le 6 tsa $\square = \square$

$6 \times 3 = \square$

Sethalo



6, ____, ____

$6 + \square + \square = \square$

ditlhopha di le 3 tsa $\square = \square$

$3 \times \square = \square$

Sethalo



Pitsa e e apayang e na le maoto a le mararo. Dipitsa di le 7 tse di apayang di na le maoto a le makae?


\square




Teacher:
Sign:
Date:



Dipateronepalo: Botharo



Thala kgotsa kgomaretsa ditshwantsho tse di tlang ka boraro.

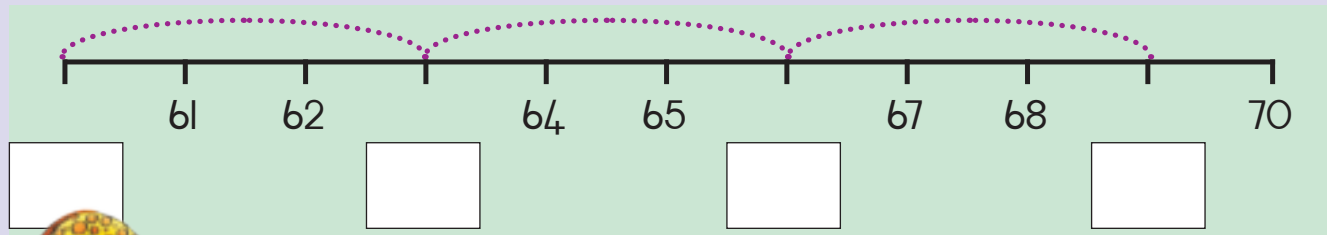
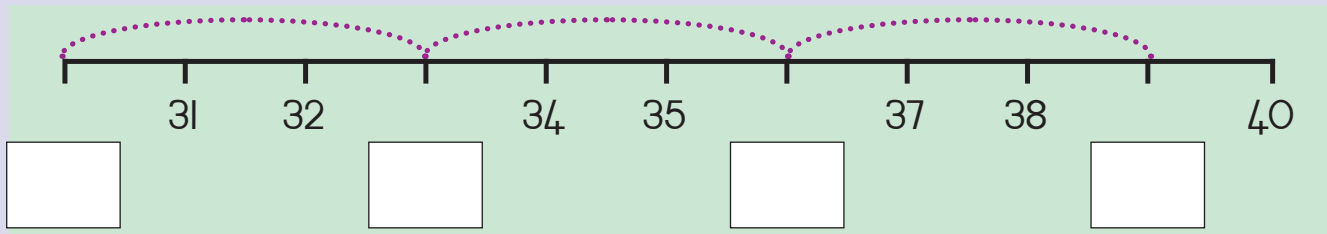
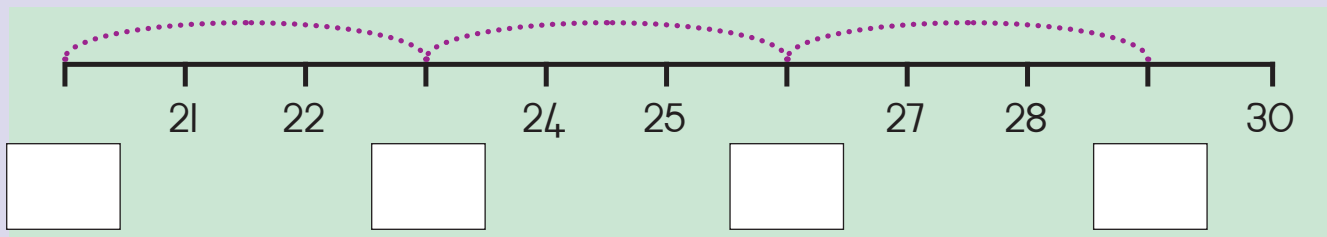
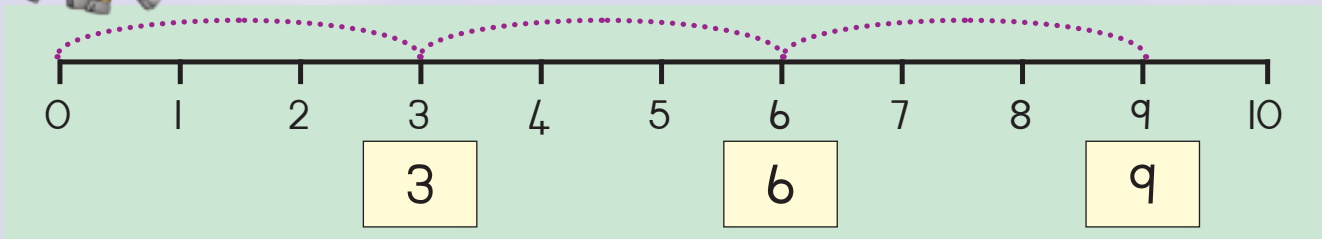


Re simolotse paterone. E feleetse.

1	2	3	4	5	6	7	8	9	10
11	12	13	14	15	16	17	18	19	20
21	22	23	24	25	26	27	28	29	30
31	32	33	34	35	36	37	38	39	40
41	42	43	44	45	46	47	48	49	50
51	52	53	54	55	56	57	58	59	60
61	62	63	64	65	66	67	68	69	70
71	72	73	74	75	76	77	78	79	80
81	82	83	84	85	86	87	88	89	90
91	92	93	94	95	96	97	98	99	100



Dirisa melapalo go kwala paterone.



Feleletsa tse di latelang:

3, 6, 9, __, __, __	1, 4, 7, __, __, __	99, 96, 93, __, __, __
36, 39, 42, __, __, __	22, 25, 28, __, __, __	66, 63, 60, __, __, __
12, 15, 18, __, __, __	15, 12, 9, __, __, __	40, 37, 34, __, __, __



Go na le diteraesekele di le 10 kwa Kheretsheng.
Go tlaa nna le maotwana a diteraesekele a le makae



Teacher:
Sign:
Date:



Katiso: x 4

Go na le dimonamone di le kae mo tafoleng e nngwe le e nngwe?




Feleletsa tse di latelang.

●●●● ●●●● ●●●●

ditlhophadi le 3 tsa 4 $4 + 4 + 4 =$ $3 \times 4 =$

●●●● ●●●●

ditlhophadi le 2 tsa 4 $4 + 4 =$ $2 \times 4 =$

●●●● ●●●● ●●●● ●●●●

ditlhophadi le 4 tsa 4 $4 + 4 + 4 + 4 =$ $4 \times 4 =$

●●●● ●●●● ●●●● ●●●● ●●●● ●●●●

ditlhophadi le 6 tsa 4 $4 + 4 + 4 + 4 + 4 + 4 =$ $6 \times 4 =$

●●●● ●●●● ●●●● ●●●● ●●●● ●●●● ●●●●

ditlhophadi le 7 tsa 4 $4 + 4 + 4 + 4 + 4 + 4 + 4 =$ $7 \times 4 =$



Dira sethalo sa tse di latelang:

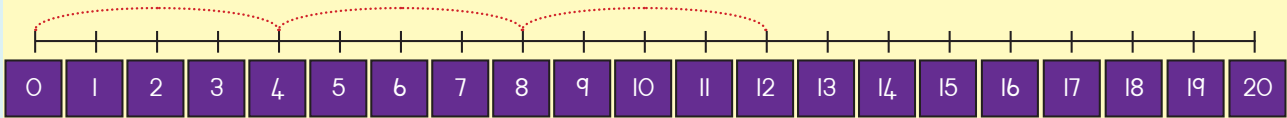
ditlhophadi le 3 tsa 4

ditlhophadi le 4 tsa 4

ditlhophadi le 5 tsa 4



Dira sethalo sa tse di latelang.



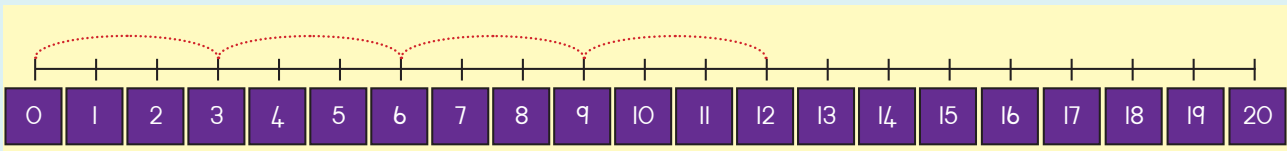
4, 8, ____

$$4 + 4 + 4 = \square$$

ditlhopho di le 3 tsa 4 =

$$3 \times 4 = \square$$

Sethalo



3, 6, 9, ____

$$3 + 3 + 3 + 3 = \square$$

ditlhopho di le 4 tsa =

$$4 \times \square = \square$$

Sethalo



Pitse e na le maoto a le 4. Dipitse di le 3 di na le maoto a le makae?

4 8 12 16 20 24
28 32 36 40

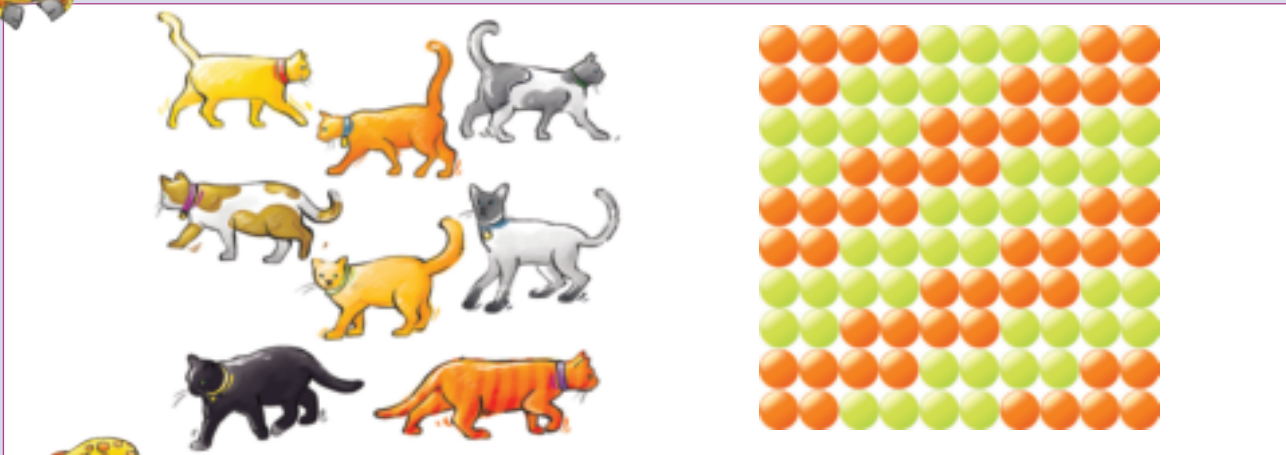


Teacher: _____
Sign: _____
Date: _____




Dipateronepalo: Bonne

A re baleng ka bone.



Thala kgotsa kgomaretsa dilo tse di tlang ka bone.

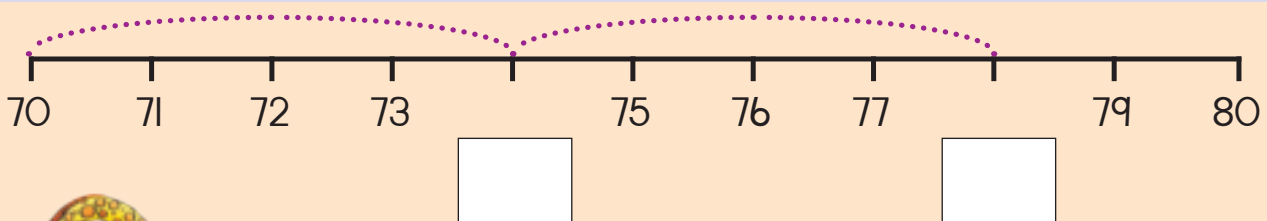
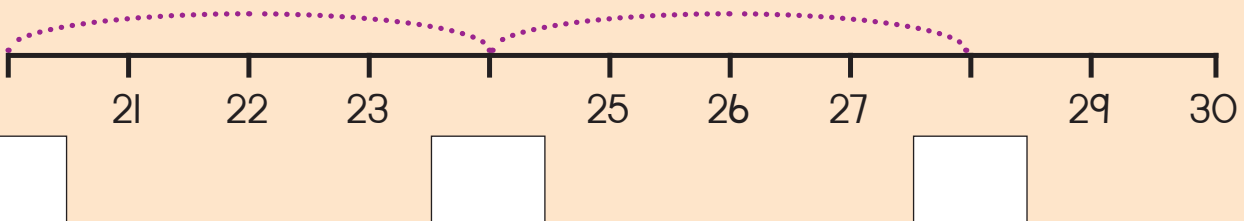
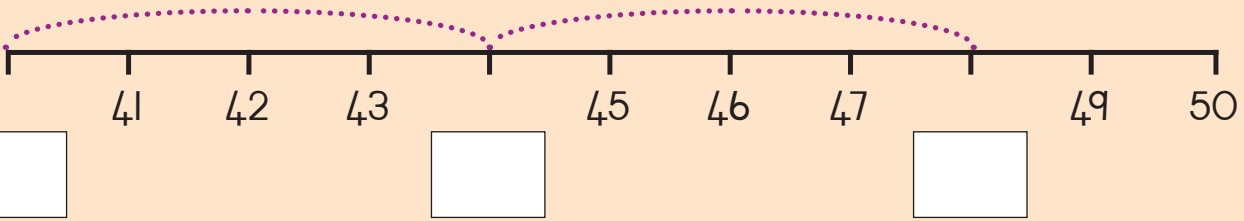
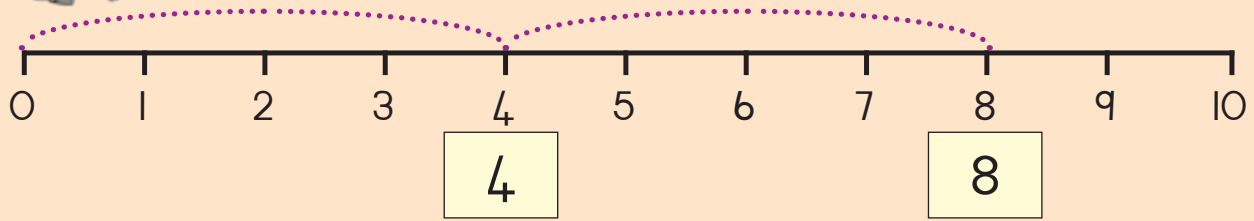


Re simolotse paterone. E feleletse.

1	2	3	4	5	6	7	8	9	10
11	12	13	14	15	16	17	18	19	20
21	22	23	24	25	26	27	28	29	30
31	32	33	34	35	36	37	38	39	40
41	42	43	44	45	46	47	48	49	50
51	52	53	54	55	56	57	58	59	60
61	62	63	64	65	66	67	68	69	70
71	72	73	74	75	76	77	78	79	80
81	82	83	84	85	86	87	88	89	90
91	92	93	94	95	96	97	98	99	100



Dirisa melapalo go kwala paterone.



Feleletsa tse di latelang.

4, 8, 12, __, __, __

28, 32, 36, __, __, __

12, 16, 20, __, __, __

1, 5, 9, __, __, __

42, 46, 50, __, __, __

20, 16, 12, __, __, __

48, 44, 40, __, __, __

60, 56, 52, __, __, __

70, 66, 62, __, __, __



Go na le dibesikiti di le nne mo paketeng. Ke rekisitse dipakete di le 9.
Ke rekisitse dibesikiti di le kae?



Teacher:

Sign:

Date:



Letlha:

Dikgang tsa go atisa

Itlhomele kgang ya gago o dirisa mafoko a tshwana le matlho, maoto, diatla, dinao, diphologolo, batho. Tsenya palo mo lengwe le lengwe.



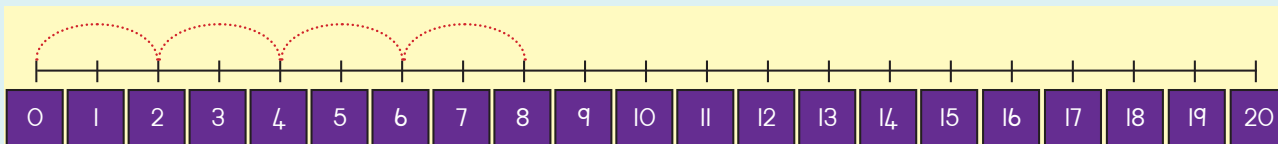
Katse e na le matlho a le 2. Dikatse di le 4 di na le matlho a le makae?

Khalara matlho a dikatse.

E bontshe ka dibadisi.



E bontshe mo molapalong.



$$\square + \square + \square + \square = \square$$

$$\square \times \square = \square$$



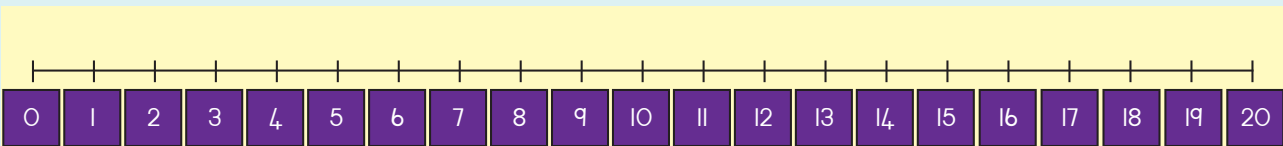
Teraesekele e na le maotwana a le 3. Diteraesekele di le 5 di na le maotwana a le makae?



Khalara maotwana a teraesekele.

E bontshe ka dibadisi.

E bontshe mo molapalong.




$$\square + \square = \square$$

$$\square \times \square = \square$$



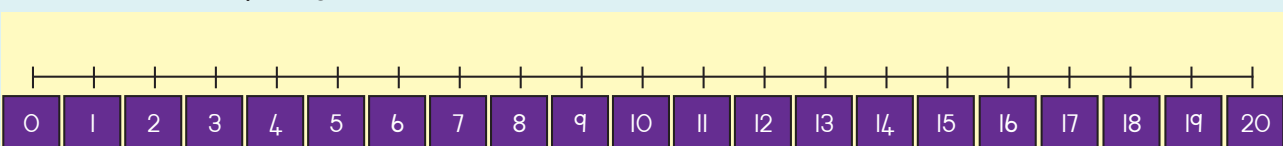
Ntšwa e na le maoto a le 4. Dintšwa di le 4 di na le maoto a le makae.



Khalara maoto a dintšwa.

E bontshe ka dibadisi.

E bontshe mo molapalong.



$$\square + \square = \square$$

$$\square \times \square = \square$$



Teacher:
Sign:
Date:



Letlha:

Diura




Bua ka ga tleloko.



Lenaka le lekhutshwane le re supetsa diura.
Fano le re supetsa diura **di le 7**.

Lenaka la tleloko le a dikologa,
le dikologe le bo le dikologe.
Lenaka la tleloko le dikologa jaana go re supetsa nako.



Lenaka le lekhutshwane le re supetsa eng?



ura



diura



diura



diura



diura



diura



diura



diura



diura



diura



diura



diura



Thala lenaka le lekhutshwane.

Diura 4



Ura 1



Diura 11



Diura 7



Diura 9



Diura 10



Diura 2



Diura 5



Diura 3



Diura 6



Diura 8



Diura 12



Ke eng se se ka tsayang ura go se dira? Khalara karabo e e nepagetseng.



Go dira tirogae.



Go robala.



Go tlhapa meno.



Teacher:

Sign:

Date:



Letlha:

Dipateronepalo: Botlhano

A re baleng ka botlhano.




Thala kgotsa kgomaretsa ditshwantsho tse di tlang ka **botlhano**.

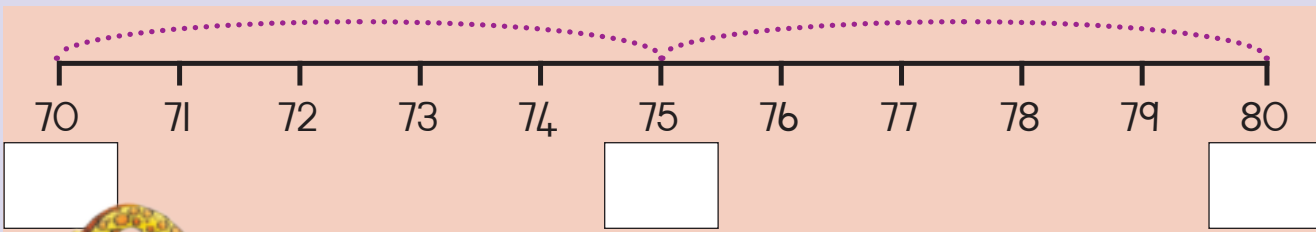
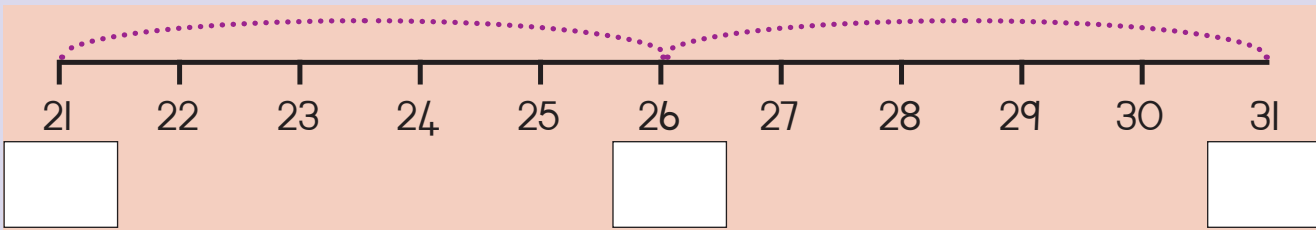
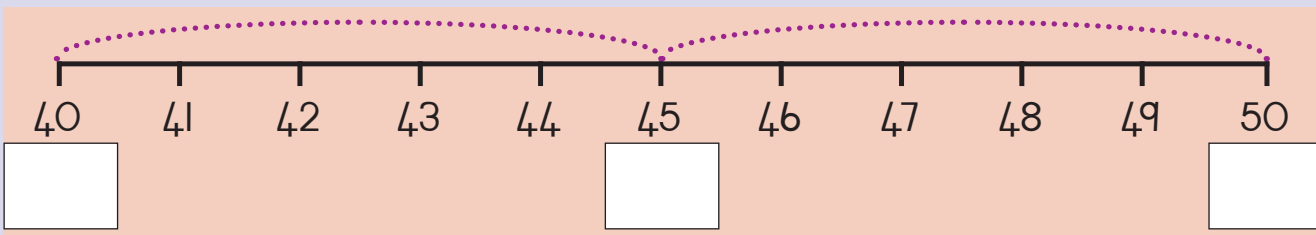
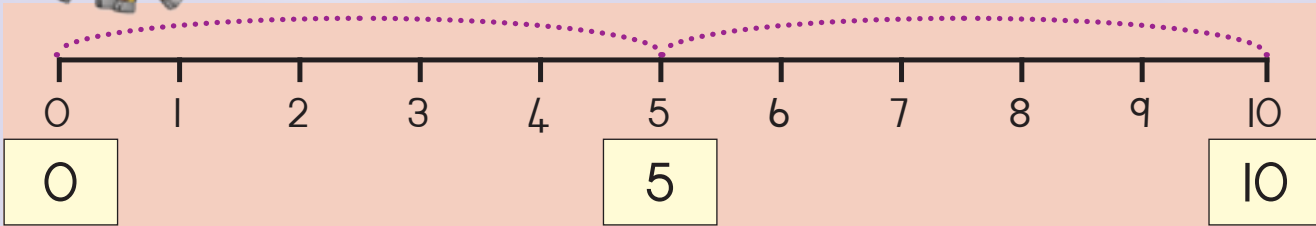


Re simolotse paterone. E feleletse.

1	2	3	4	5	6	7	8	9	10
11	12	13	14	15	16	17	18	19	20
21	22	23	24	25	26	27	28	29	30
31	32	33	34	35	36	37	38	39	40
41	42	43	44	45	46	47	48	49	50
51	52	53	54	55	56	57	58	59	60
61	62	63	64	65	66	67	68	69	70
71	72	73	74	75	76	77	78	79	80
81	82	83	84	85	86	87	88	89	90
91	92	93	94	95	96	97	98	99	100



Dirisa molapalo go kwala paterone.



Feleletsa tse di latelang.

5, 10, 15, __, __, __

20, 25, 30, __, __, __

30, 35, 40, __, __, __

1, 6, 11, __, __, __

23, 28, 33, __, __, __

25, 20, 15, __, __, __

50, 45, 40, __, __, __

60, 55, 50, __, __, __

54, 49, 44, __, __, __



5 10 15 20 25 30 35 40 45 50



Teacher:

Sign:

Date:

57a


Kgweditshano 2



Letha:

Metsotso

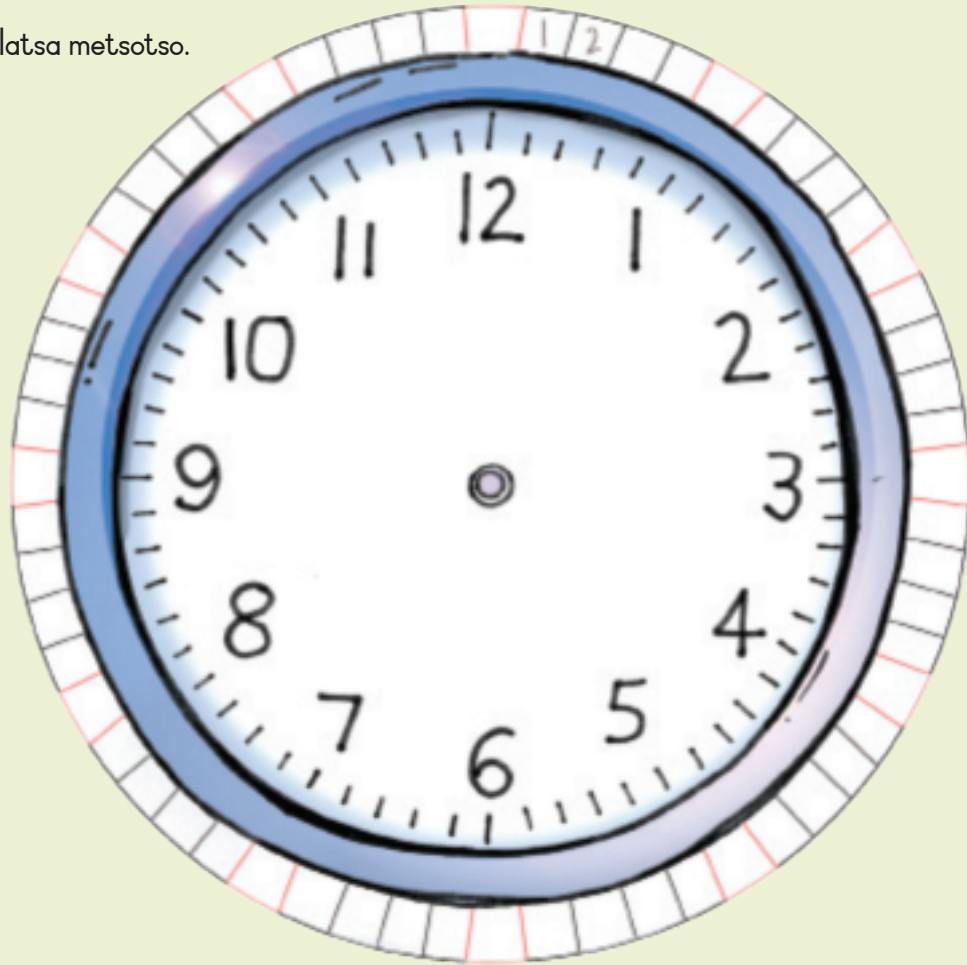
Re dirisa mela e mekhutshwane e mentsho jang mo sefatlhegong sa tleloko?



Akanya ka ga dilo tsotlhe tse o ka di dirang mo motsotsong o le mongwe.



Tlatsa metsotso.



Kwala dipalo tse di mo dikwereng tse di khibidu fa.

Row of 12 empty boxes for writing numbers.



Thala dilo tse o ka di dirang mo

O ka nna wa tlhoka thuso ya mogolo.



Motsotso 1

Metsotso e 5

Metsotso e 30

Metsotso e 60



Teacher:
Sign:
Date:

57b

Kgweitharo 2



Bua ka ga tleloko.

Metsotso gape

Letlha:
.....



Lenaka le leleele le supetsa metsotso. Fano le re supetsa metsots e le 10.

Lenaka la tleloko le a dikologa,
le dikologe le bo le dikologe.
Lenaka la tleloko le dikologa jaana go re supetsa nako.



Lenaka le leleele le re supetsa eng?



metsotso



metsotso



metsotso



metsotso



metsotso



metsotso



Thala lenaka
le lelele.

Metsotso e 55



Metsotso e 35



Metsotso e 60



Metsotso e 10



Metsotso e 45



Metsotso e 12



Ke eng se se ka tsayang motsotso go se dira? Khalara karabo e e nepagetseng.



Gio tlola kgati



Gio tshameka



Gio ja



Teacher:

Sign:

Date:




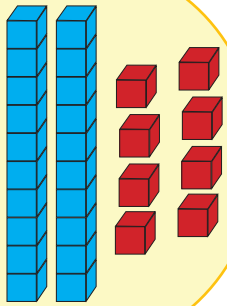

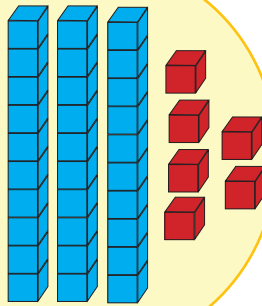



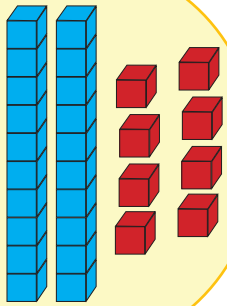

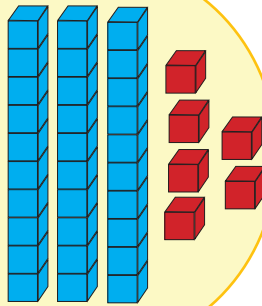
Letlha:



Go bopa ditlhopha le go aroganya

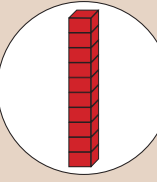
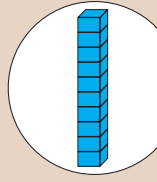
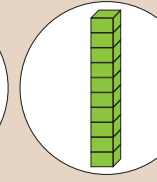
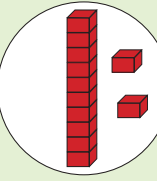

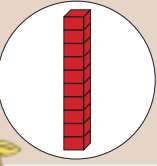
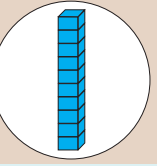
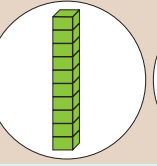
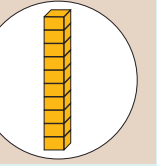
Go na le diboloko di le kae mo sekeleng nngwe le nngwe? Di aroganye mo baneng ka go lekalekana.



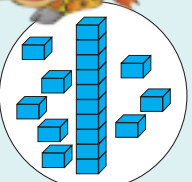
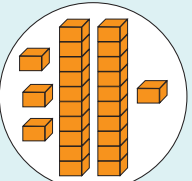


Go na le diboloko di le kae mo sedikong sengwe le sengwe? Kwala palogotlhe mo sedikong se se botala jwa legodimo.

			<input type="text"/> × <input type="text"/> = <input type="text"/>	
			<input type="text"/> × <input type="text"/> = <input type="text"/>	
				<input type="text"/> × <input type="text"/> = <input type="text"/>



Aroganya diboloko ka go lekalekana magareng ga didiko kana disekele.

	<input type="text"/>	<input type="text"/>	<input type="text"/> aroganngwa magareng <input type="text"/> = <input type="text"/>
	<input type="text"/>	<input type="text"/>	<input type="text"/> aroganngwa magareng <input type="text"/> = <input type="text"/>



Thala tse di latelang. Kwala karabo ya e nngwe le e nngwe.

ditlhopha di le 3 tsa 2

+ Palo ya tlhakanya:

× Palo ya atisa:

ditlhopha di le 2 tsa 14

+ Palo ya tlhakanya:

× Palo ya atisa:

Arola dibadisi di le 12 ka 4.

— Palo ya ntsha:

÷ Arogangwa magareng ga palelo (Go arola):

Arola dibadisi di le 36 ka 3.

— Palo ya ntsha:

÷ Arogangwa magareng ga palelo (Go arola):



Balela.

Ditlhopha di le 2 tsa 7 _____ Ditlhopha di le 3 tsa 8 _____

Ditlhopha di le 4 tsa 5 _____ Ditlhopha di le 2 tsa 15 _____

Arola 18 ka 2 _____ Arola 24 ka 3 _____

Arola 35 ka 5 _____ Arola 50 ka 10 _____



Go ne go le ditlhopha di le 6 tsa bana ba le 5 kwa moletlong wa me.
Go ne go le bana ba le kae kwa moletlong wa me?



Teacher:


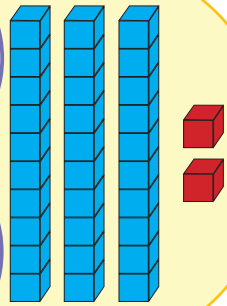

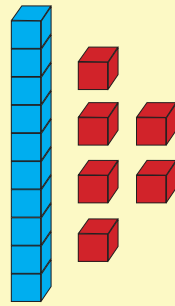

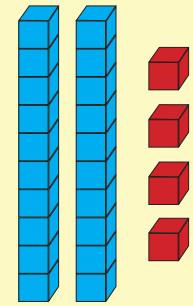

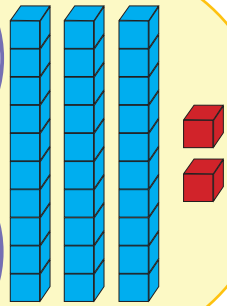

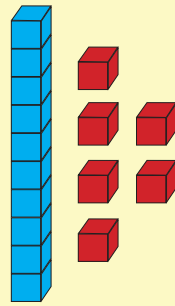

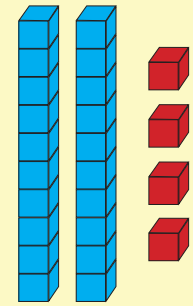
Sign:

Date:

Go bopa ditlhopha le go aroganya gape

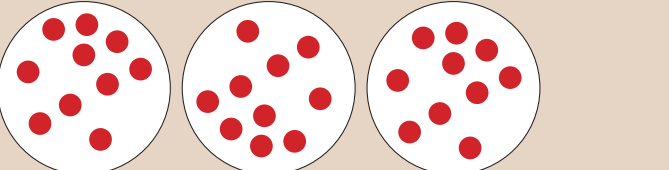
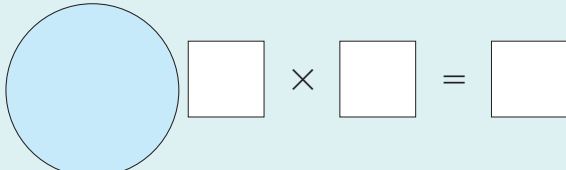

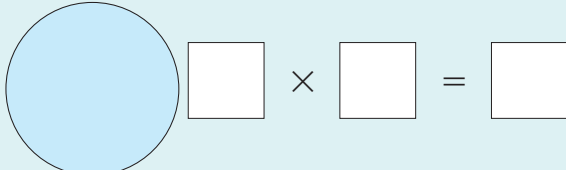
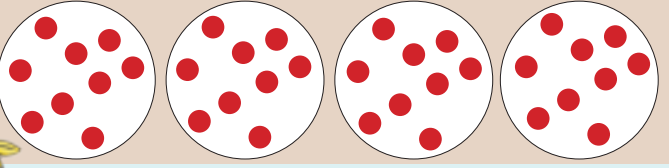
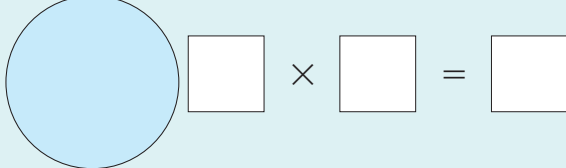
Go na le dibadi di le kae mo sekeleng nngwe le nngwe? Di aroganye mo baneng ka go lekalekana.




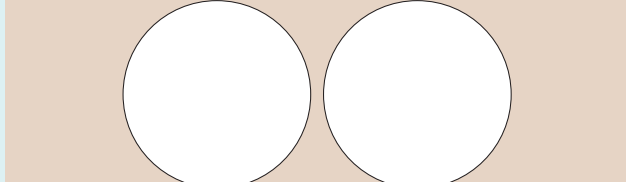




Go na le dibadisi di le kae mo sedikong sengwe le sengwe? Kwala palogotlhe mo sedikong se se botala jwa legodimo.



Aroganya dibadisi magareng ga didiko.

		<input type="text"/> aroganngwa magareng <input type="text"/> = <input type="text"/>
		<input type="text"/> aroganngwa magareng <input type="text"/> = <input type="text"/>



Thala tse di latelang. Kwala karabo ya e nngwe le e nngwe.

ditlhopha di le 3 tsa 12

+ Palo ya tlhakanya:

× Palo ya atisa:

ditlhopha tsa 5 tsa 10

+ Palo ya tlhakanya:

× Palo ya atisa:

Aroganya dibadisi di le 24 magareng ga 4.

— Palo ya ntsha:

÷ Arogangwa magareng ga palelo (Go arola):

Aroganya dibadisi di le 25 magareng ga 5.

— Palo ya ntsha:

÷ Arogangwa magareng ga palelo (Go arola):



Balela.

Ditlhopha di le 2 tsa 11 _____ Ditlhopha di le 3 tsa 10 _____

Ditlhopha di le 4 tsa 4 _____ Ditlhopha di le 2 tsa 25 _____

Arola 20 ka 2 _____ Arola 27 ka 3 _____

Arola 50 ka 5 _____ Arola 28 ka 2 _____



gabedi aroganya



Teacher:

Sign:










Date:




Go bopa ditlhopha le go aroganya gape




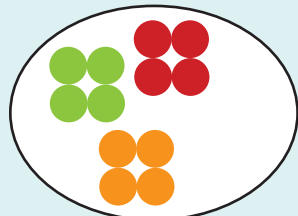
Go na le dibadi di le kae mo sekeleng nngwe le nngwe? Di aroganye mo baneng ka go lekalekana.









Go na le dibadisi di le kae mo sedikong sengwe le sengwe?

			
<input type="text"/>	<input type="text"/>	<input type="text"/>	<input type="text"/>



Sega dibopego go tswa mo go e-e-segeletsweng ruri 4 mme o e kgomaretse mo bolokong bo bo nepagetseng. Bala dibopego.

	<input type="text"/>		<input type="text"/>
	<input type="text"/>		<input type="text"/>



Aroganya dibopego magareng ga bana. Dirisa dibopego go tswa go e-e-segeletsweng ruri 4. (Karolo ya Papetlana bO)

dikhutlotharo

dikwere















Aroganya maungo magareng ga bana. A thale.



dinamune

diapole















John le Belinda ba arogane dimonamone di le 12 ka go lekana. Mongwe le mongwe o bone di le kae?



Teacher:

Sign:

Date:

61

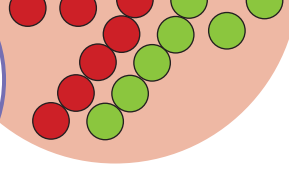
Letlha:

Kgweitharo 2

Go bopa ditlhopha le go aroganya gape

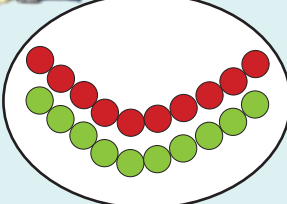
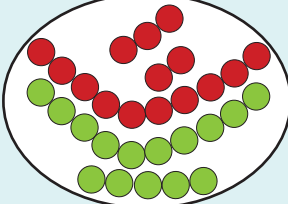
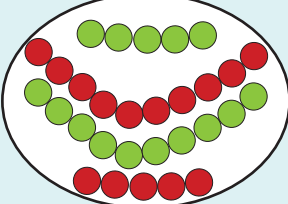
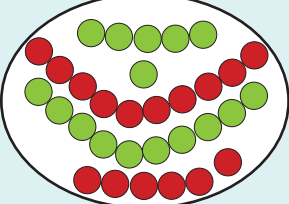
O bala dibaga di le kae mo sedikong sengwe le sengwe. Di arogaye magareng ga bana.





Sega dibaga go tswa go E e segeletsweng ruri 4 mme o e kgomaretse fa.

			
<input type="text"/>	<input type="text"/>	<input type="text"/>	<input type="text"/>



Sega dibaga go tswa go E e segilweng 4 (Karolo ya Papetlana 61) mme o di kgomaretse fano. Bala dibaga.

Dibaga tse di khibidu

Dibaga tse di botala jwa legodimo

Dibaga tse di serolwana

Dibaga tse di botala jwa tlhaga



Thala palo e e lekanang ya dibaga go ngwana mongwe le mongwe.



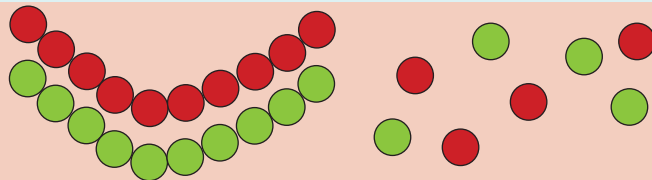
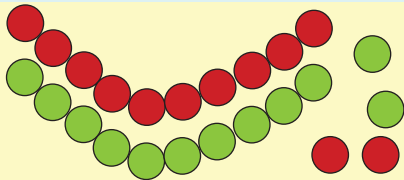








Aroganya dibaga magareng ga bana. Di thale.















Busi le Zaheda ba arogane dikheraeyone di le 32 ka go lekana. Mongwe le mongwe o bone di le kae?



Teacher:

Sign:


Date:










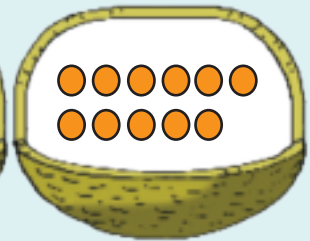


Letlha:

Dihalfo: 1 – 20

Go diragetse eng ka diapole?

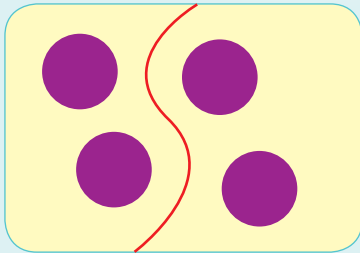


Aroganya maungo a a ka fa molemeng mo dirotong tse di ka fa mojang. A thale.







Thala mola go bontsha halofo.




Halofo ya 4 ke



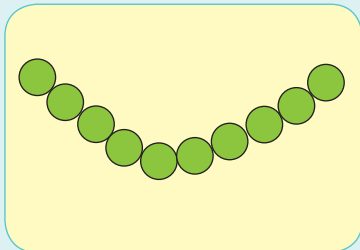
Halofo ya 6 ke



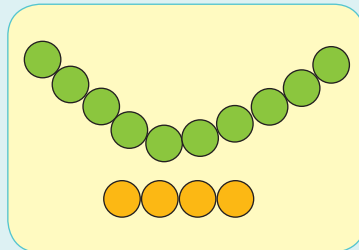
Halofo ya 8 ke



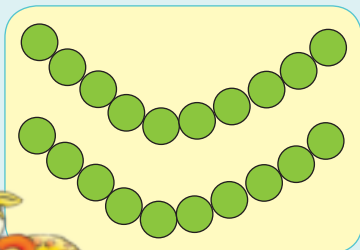
Halofo ya 2 ke



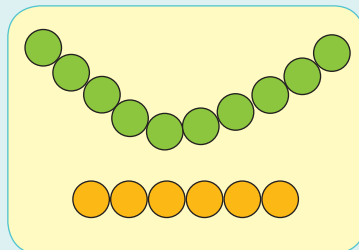
Halofo ya 10 ke



Halofo ya 14 ke



Halofo ya 20 ke



Halofo ya 16 ke



Halofo ya poleite e nngwe le e nngwe ya dijo ke bokae?

<input type="text"/>		<input type="text"/>		<input type="text"/>		<input type="text"/>	
<input type="text"/>		<input type="text"/>		<input type="text"/>			



Teacher:
Sign:
Date:



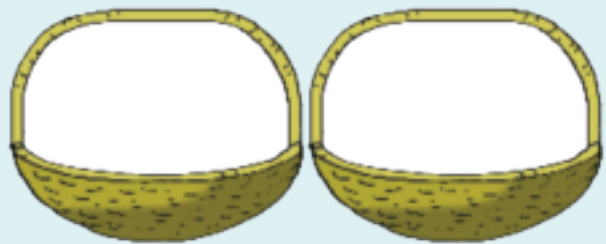
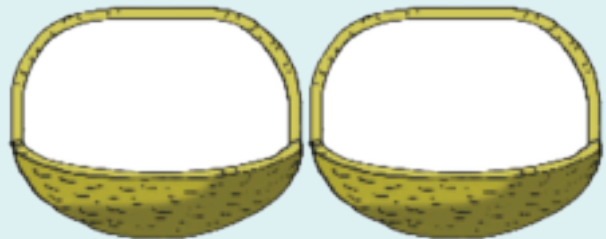
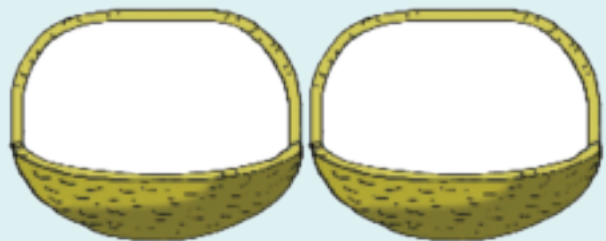
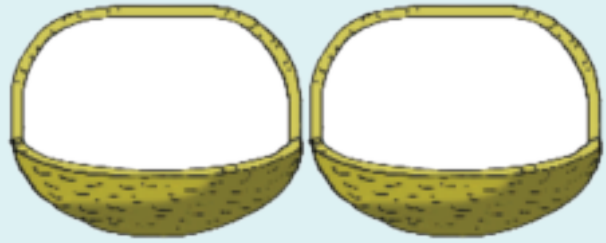
Letlha:

Go aroganya 20 – 50

Bolelela tsala ya gago ka moo dibaga di arogwanwang ka teng magareng ga megopo e mebedi.

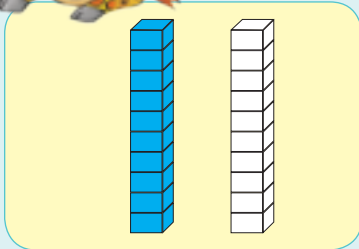


Aroganya dibaga ka go lekana magareng ga dirotong tse pedi. Di thale fa o ntse o di tsenya mo dirotong.

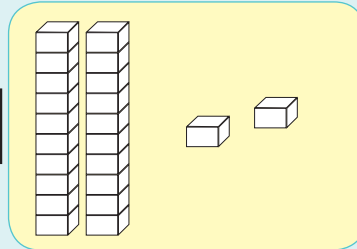







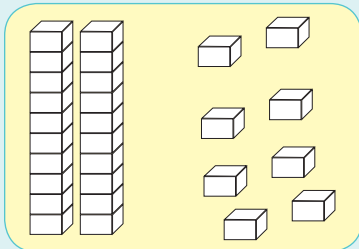
Khalara seripa kana halofo ka mmala o o farologaneng.



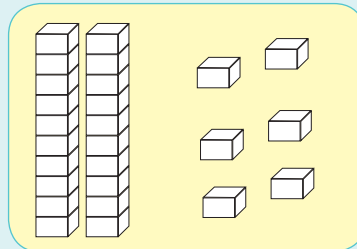
Halofa ya 20 ke



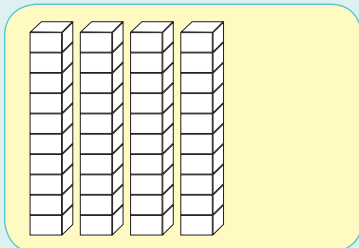
Halofa ya 22 ke



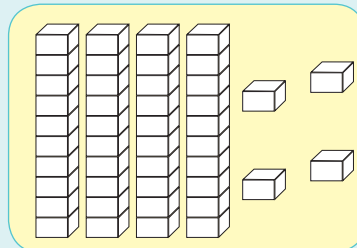
Halofa ya 28 ke



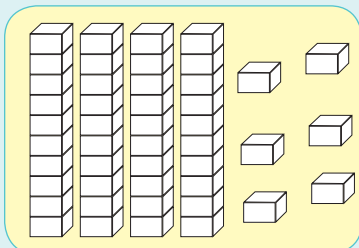
Halofa ya 26 ke




Halofa ya 40 ke



Halofa ya 44 ke



Halofa ya 46 ke



Halofa ya 50 ke



Khalara halofo ya setshwantsho sengwe le sengwe.


--	--	--	--	--	--	--	--	--	--	--	--	--	--	--	--	--	--	--	--



Teacher: _____
 Sign: _____
 Date: _____

Se - se - segilweng I

Dipapetlanatiro 10 le 40



Papetlanatiro 13

makuku

thapama

maitseboa

bosigo

bosigogare

phakela le
maitseboanyana



Se - se - segilweng 2

Papetlanatiro 22

Ditiragalo tsa Hisetori le tse di kgethegileng

Letsatsi la
Ditshwanelo tsa
Botho

Letsatsi la
Poelano

Letsatsi la
Badiri


Letsatsi la
Bašwa

Letsatsi la
Ngwaoboswa

Letsatsi la
Bosetšhaba
la Basadi

Letsatsi la
Kgololosego

Disimbolo tsa Ditumelo



Bahai

Sejuta

Sebudha

Seiselamo

Sekeresete

Seaforika

Sehindu



Cut-out 3


Worksheets 25 and 26




R50	R50	R50	R50	R50
R10	R10	R10	R10	R10
R20	R20	R20	R20	R20
R100	R100	R100	R100	R100
R50	R50	R50	R50	R50
R10	R10	R10	R10	R10
R20	R20	R20	R20	R20
R100	R100	R100	R100	R100

Cut-out 4

Worksheet 27



Worksheet 60



Worksheet 61

