

Ku dyondza hi Vumbiwa ra Riphabiliki ra Afrika-Dzonga (1996)

Vumbiwa ra Afrika-Dzonga (1996) ri na milawu ya le henhla ya tiko. Milawu leyi yi le henhla ku tlula na puresidente, yi le henhla ku tlula tihuvo na ku tlula mfumo. Yi hlamusela ndlela leyi vanhu va tiko va faneleke ku khomana hiyona, timfanelo na vutihlamuleri bya vona eka vanhu van'wana. Vumbiwa ra Tiko ri kona leswaku ri kota ku sirhelela hinkwerhu ka hina sweswi na vana va hina eka minkarhi leyi taka.

Lemuka matimu ya hina.

Hi nga vu yeleti swihoxo swa nkarhi lowu nga hundza.

Vumbiwa ra hina ri hi pfuna ku anaka nya no aka vumundzu ku byo antswa bya vanhu hink wavo.

Hina, vanhu va Afrika-Dzonga,

Hi lemuka ku kala vululami ka nkarhi lowu hundzeke evuton'wini bya hina;

Hi xixima lava va xanisekeke hikwalaho ko hisekela vululami na ntshunxeko etikweni rerhu;

Hi hlonipha lava va tirheke ku aka no hlulukisa tiko ra hina; naswona

Hi tshemba leswaku Afrika-Dzonga i ra hinkwavo lava tshamaka eka rona, hi hlanganile hi ku hambana-hambana ka hina.

Kutani, hi ku tirhisa vayimeri va hina lava hi tihlawuleleke vona hi ntshunxekile, hi amukela Vumbiwa leri tanihi nawu lowu kulukumba wa Riphabliki ku endlela—

Ku lulamisa ku hambanisiwa ka nkarhi lowu hundzeke no vumba rixaka leri simekiweke ehenhla ka masungulo ya swipimelo swa xidemokhirasi, vululami exikarhi ka vanhu na timfanelo ta ximunhu ta masungulo;

Ku simeka masungulo ya rixaka ra xidemokhirasi leri vekaka swilo erivaleni laha eka rona mfumo wu simekiweke ehenhla ka ku navela ka vanhu naswona vaaka-tiko hinkwavo va sirheleriwile hi ku ringana hi nawu;

Ku antswisa xiyimo xa vutomi bya vaaka-tiko hinkwavo no humesela erivaleni vuswikoti bya munhu un'wana na un'wana na;

Ku aka Afrika-Dzonga leri vumbaneke ra xidemokhirasi leri ri kotaka ku teka vutshamo bya rona lebyi faneleke tanihi tiko leri tiyimeleke endyangwini wa tinxaka.

Lava timfanelo ta wena tanihi Muafrika-Dzonga u tlhela u va na vutihlamule ri byo sirhelela timfanelo ta vanhu van'wana.

Tiva Nawumbisi wa timfanelo ta wena & Nawumbisi wa Vutihlamule ri.

Xikwemba a xi sirhelele vanhu va hina.

Nkosi Sikelel' iAfrika. Morena boloka setjhaba sa heso.

God seën Suid-Afrika. God bless South Africa.

Mudzimu fhatutshedza Afurika. Hosi katekisa Afrika.

ISBN 978-1-4315-0135-9



9 781431 501359




**MATHEMATICS IN XITSONGA
GRADE 1 – BOOK 2
TERMS 3 & 4
ISBN 978-1-4315-0135-9
THIS BOOK MAY NOT BE SOLD.
14th Edition**



MATEMATIKI HI XITSONGA – Giredi ya 1 Buku ya 2

ISBN 978-1-4315-0135-9



Leyi pfuxetiweke hi xiCAPS

Giredi ya 1

Vito: Tlilasi:

basic education
Department:
Basic Education
REPUBLIC OF SOUTH AFRICA

**MATEMATIKI
HI XITSONGA**
Buku ya 2
Tikotara ta
3 na 4

Leswi nga endzeni

Nomboro	Nhlokomhaka	Pheji
65	Twisisa nomboro ya 11	2
66	Twisisa nomboro ya 12	4
67	Twisisa nomboro ya 13	6
68	Twisisa nomboro ya 14	8
69	Twisisa nomboro ya 15	10
70	Ku hlanganisa ku fika eka 20 – Ku ya emahlweni no hlayela	12
71	Ku hlanganisa – ku aka no tlhantlha tinomboro ku fika eka 10	14
72	Ku hlanganisa – ku aka no tlhantlha tinomboro ku fika eka 20	16
73	Ku hlanganisa – ku aka no tlhantlha tinomboro ku fika eka 20	18
74	Ku leha	20
75	Mali na cinci	22
76	Mali na cinci	24
77	Mali: ku hlanganisa na ku susa	26
78	Switiviwa	28
79	Switiviwa na nkarhi	30
80	Mintlawa ya vuntlhanu ku fika eka 15	32
81	Vuntlhanu: ku hlanganisa ko vuyeleriwa ku fika eka 15	34
82	Vuntlhanu ku fika eka 15	36
83	Tipatironi ta tinomboro ta vuntlhanu ku fika eka 50	38
84	Tipatironi ta tinomboro ta vuntlhanu ku fika eka 80	40
85	Ku mbirihata	42
86	Tihafu	44
87	Minchumu ya 3 wa matlhelo	46
88	Minchumu ya 3 wa matlhelo – Sajizi na ku khunguluka	48
89	Tipatironi ta jometiri	50
90	Mintlawa ya mbirhi ku fika eka 15	52
91	Ku hlanganisa ko vuyelela mbirhi ku fika eka 15	54
92	Vumbirhi ku fika eka 15	56
93	Tipatironi ta tinomboro ta 2 ku fika eka 50	58
94	Ndzingano	60
95	Tinomboro na xijimela-nkoka	62
96	Vulehi	64

Nomboro	Nhlokomhaka	Pheji
97	Nomboro ya 16	66
98	Nomboro ya 17	68
99	Nomboro ya 18	70
100	Nomboro ya 19	72
101	Nomboro ya 20	74
102	Ku hlanganisa	76
103	Ku susa	78
104	Ku hlanganisa no susa	80
105	Tinomboro to landzelelana	82
106	Minchumu na swivumbeko	84
107	Mali	86
108	Mali yin'wana	88
109	Swivumbeko swa 2 wa matlhelo	90
110	Swivumbeko swa 2 wa matlhelo – matlhelo yo kongoma thwixi na matlhelo ya xirhendzevutana	92
111	Swivumbeko swin'wana swa 2 wa matlhelo	94
112	Mintlawa ya vuntlhanu ku fika eka 20	96
113	Vuntlhanu – ku hlanganisa ko vuyelela ku fika eka 20	98
114	Ku ava ku fika eka 20	100
115	Tipatironi ta tinomboro – vuntlhanu ku fika eka 100	102
116	Xijimo na tlhelo	104
117	Mintlawa ya vumbirhi ku fika eka 20	106
118	Vumbirhi – ku hlanganisa ko vuyelela ku fika eka 20	108
119	Patironi ya tinomboro – vumbirhi ku fika eka 100	110
120	Tipatironi ta tinomboro – vumbirhi ku fika eka 100	112
121	Masa (ntiko)	114
122	Ku mbirihata	116
123	Ku hafula	118
124	Switiviwa	120
125	Switiviwa swin'wana	122
126	Vundzeni	124
127	Tipatironi ta jometiri	126
128	Ndzingano	128



Manana Angie Motshekga, Holobye wa Dyondzo ya Masungulo



Dkd. Reginah Mhaule Xandla xa Holobye wa Dyondzo ya Masungulo

Tibuku leti to tirhela ti endleriwe vana va Afrika-Dzonga ehansi ka vurhangeri bya Holobye wa Dyondzo ya Masungulo, Manana Angie Motshekga, na Xandla xa Holobye wa Dyondzo ya Masungulo, Dkd. Reginah Mhaule.

Tibuku to tirhela ta Rainbow ti vumba xiyenge xin'wana xa ntlawa wa migingiriko ya Ndzawulo ya Dyondzo ya Masungulo leyi kongomisiweke eka ku antswisa matirhelo ya vadyondzi va Afrika-Dzonga eka tigiredi ta ntsevu to sungula. Tanihi xin'wana xa swilo leswi nga swirhangana eka nkunguhato wa matirhelo ya mfumo, phurojeke leyi yi humelerile hi ku seketeriwa hi timali hi Nkwama wa Timali ta Tiko. Leswi swi endlile leswaku Ndzawulo yi swi kota ku endla leswaku tibuku leti to tirhela, ti kumeka hi tindzimi hinkwato ta ximfumo handle ko hakeleriwa.

Hi tshemba leswaku tibuku leti ti ta pfuna vadyondzisi eka migingiriko ya vona yo dyondzisa ya masiku hinkwawo no tiyisisa leswaku vadyondzi va vona va kota ku heta kharikhulamu. Hi tiyisisa leswaku hi letela mudyondzisi eka nghingiriko wun'wana na wun'wana hi ku katsa mifungho leyi kombisaka leswi mudyondzi a faneleke ku endla swona.

Hi ni ntshembo wa leswaku vana va ta tiphina no tsakela ku tirha migingiriko leyi nga ebukwini loko va ri karhi va ya emahlweni no dyondza, na leswaku wena, mudyondzisi, u ta tsaka swin'we na vona.

Hi mi navelela ku humelela, wena na vadyondzi va wena eku tirhiseni tibuku leti to tirhela.



Giredi
ya



M a t e m a t i k i

Buku leyi i ya:

XITSONGA

Buku ya

2



1 2 3 4 5 6 7 8 9 10 11 12 13 14 15 16 17 18 19 20

Twisisa nomboro ya II

Mpfluxeto:

Titolovete ku tsala tinomboro.

 n'we

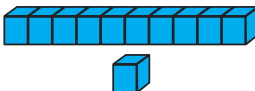
1 1


 mbirhi

2 2



Yelanisa swifaniso.






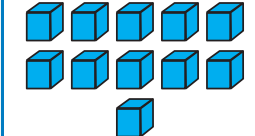
10 1

11





11





10 1




Bana swirhendzevutana eka minchumu.

Bana xirhendzevutana eka 10 wa malekere ntsena.



Xana ku sale malekere mangani?

Bana xirhendzevutana eka 10 wa maapula ntsena.



Xana ku sale maapula mangani?





Landzelerisa tinomboro.



Kholomu yin'wana na yin'wana yi fanele ku hlangana yi endla II. Tatisa tinomboro leti siyiweke.



3	5	4
4	5	
4		2

khumen'we			



Dirowa II wa minchumu.



Tatisa tinomboro leti siyiweke.



1

2

4



Hlayela minchumu leji landzelaka.



Hetisa tafula leri landzelaka. Rixaxa rin'wana na rin'wana ri na xifaniso, nomboro na vito ra nomboro leyo.



		khumen'we
		khumen'we
	khumen'we	

Hi kuma yini loko hi yisa II ehansi hi n'we? _____

Hi kuma yini loko hi engetela n'we eka II? _____

Teacher: _____

Sign: _____

Date: _____



Twisisa nomboro ya 12


Kotara ya 3

Mpuxeto:

Titolovete ku tsala tinomboro.

 nharhu

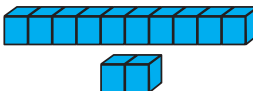
3 3

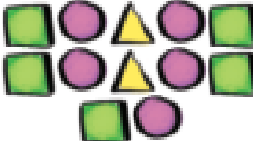
 mune

4 4



Yelanisa swifaniso.






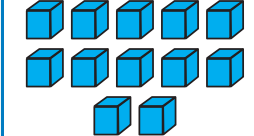
10
2


12





12





10
2




Bana swirhendzevutana eka minchumu.

Bana xirhendzevutana eka 10 wa tintanghu ntsena.



Xana ku sale tintanghu tingani?

Bana xirhendzevutana eka 12 wa tinkatla ta lwandle ntsena.



Xana ku sale tinkatla ta lwandle tingani?





Landzelerisa tinomboro.

12 12 12 12

khumembirhi

12 12 12 12



Kholomu yin'wana na yin'wana yi fanele ku hlangana yi endla 12. Tatisa tinomboro leti siyiweke.

	7	6
4		4
3	2	
12	12	12



Dirowa 12 wa minchumu.



Tatisa tinomboro leti siyiweke.

3		5			
8			11		



Hlayela minchumu leyi landzelaka.



Hetisa tafula leri landzelaka. Rixaxa rin'wana na rin'wana ri na xifaniso, nomboro na vito ra nomboro leyo.



		khumembirhi
	12	khumembirhi
		12
khumembirhi		

Hi kuma yini loko hi yisa 12 ehansi hi n'we? _____

Hi kuma yini loko hi engetela n'we eka 12? _____

Teacher: _____

Sign: _____

Date: _____



Twisa nomboro ya 13

Kotara ya 3

Mpuxeto:

Titolovete ku tsala tinomboro.

 ntlhanu

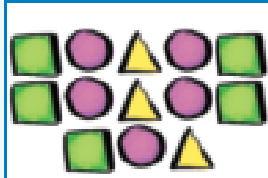
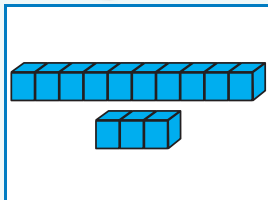
5 5

 ntsevu

6 6

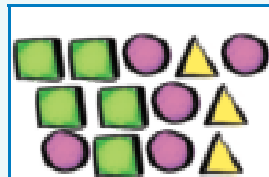


Yelanisa swifaniso.

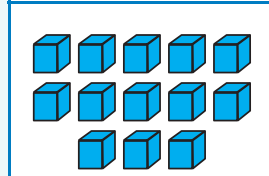


10
3

13



13



10
3




Bana swirhendzevutana eka minchumu.

Bana xirhendzevutana eka 10 wa swimanga ntsena.



Xana ku sale swimanga swingani?

Bana xirhendzevutana eka 13 wa makheroti ntsena.



Xana ku sale makheroti mangani?





Landzelerisa tinomboro.



Kholomu yin'wana na yin'wana yi fanele ku hlangana yi endla 13. Tatisa tinomboro leti siyiweke.

13	13	13	13
khumenharhu			
13	13	13	13

1	2	6
1		
	3	2
13	13	13



Dirowa 13 wa minchumu.

Sweswi yi dirowe hi ndlela yo hambana.





Tatisa tinomboro leti siyiweke.

	10		12	
--	----	--	----	--



Hlayela minchumu leyi landzelaka.



Hetisa tafula leri landzelaka. Rixaxa rin'wana na rin'wana ri na xifaniso, nomboro na vito ra nomboro leyo.



		khumenharhu
	13	khumenharhu
13		
	khumenharhu	

Hi kuma yini loko hi yisa 13 ehansi hi n'we? _____

Hi kuma yini loko hi engetela n'we eka 13? _____

Teacher: _____

Sign: _____

Date: _____




Twisisa nomboro ya 14

Kotara ya 3

Mpfluxeto:

Titolovete ku tsala tinomboro.

 nkombo

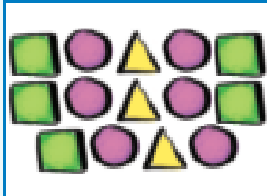
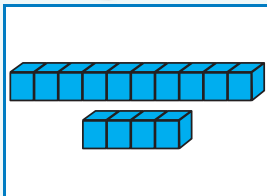
7 7

 nhungu

8 8

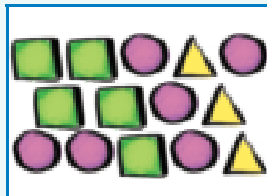


Yelanisa swifaniso.

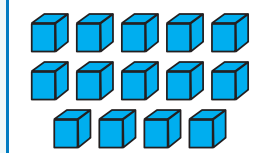


10
4

14



14



10
4



Bana swirhendzevutana eka minchumu.

Bana xirhendzevutana eka 10 wa maphaphatani ntsena.



Xana ku sale maphaphatani mangani?

Bana xirhendzevutana eka 14 wa tirhoko ntsena.



Xana ku sale tirhoko tingani?





Landzelerisa tinomboro.



Kholomu yin'wana na yin'wana yi fanele ku hlangana yi endla 14. Tatisa tinomboro leti siyiweke.



1		2
	5	1
3	2	
14	14	14

14	14	14	14
khumemune			
14	14	14	14



Dirowa 14 wa minchumu.


Sweswi yi dirowe hi ndlela yo hambana.



Hlayela minchumu leyi landzelaka.



Tatisa tinomboro leti siyiweke.



Hetisa tafula leri landzelaka. Rixaxa rin'wana na rin'wana ri na xifaniso, nomboro na vito ra nomboro leyo.



	14	khumemune
14		
	khumemune	

Hi kuma yini loko hi yisa 14 ehansi hi n'we? _____

Hi kuma yini loko hi engetela n'we eka 14? _____

Teacher: _____
Sign: _____
Date: _____



Twisisa nomboro ya 15

Mpfuxeto:

Titolovete ku tsala tinomboro.



kaye

9 9



khume

10 10




Yelanisa swifaniso.

10
5
15



Bana swirhendzevutana eka minchumu.

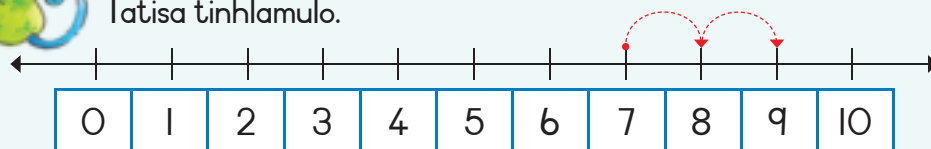
Bana xirhendzevutana eka 10 wa malamula ntsena.

Xana ku sale malamula mangani?

Bana xirhendzevutana eka 15 wa tinyeleti ntsena.

Xana ku sale tinyeleti tingani? 

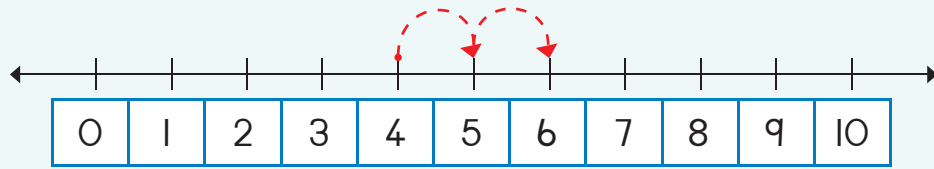
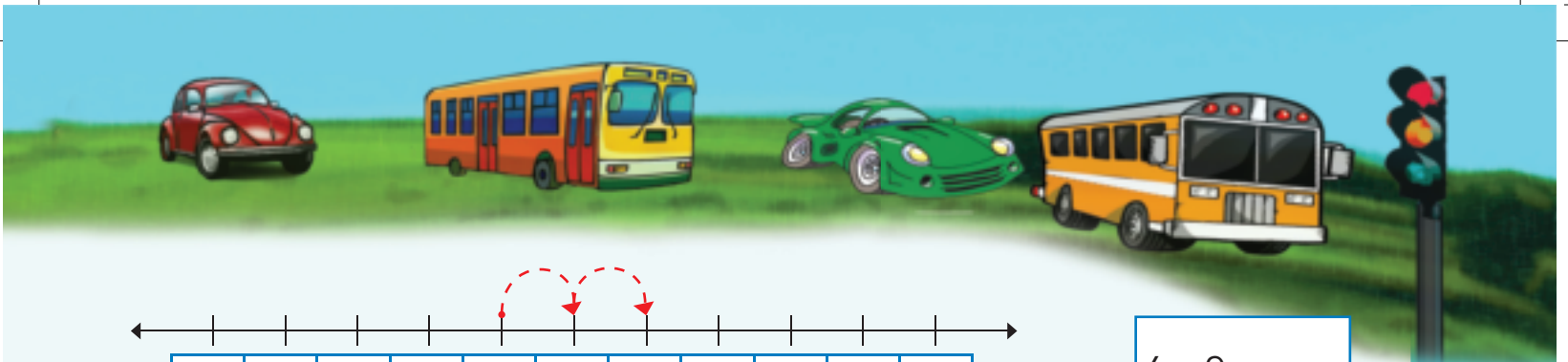
Tatisa tinhlamulo.



$7 + 2 =$



0 1 2 3 4 5 6 7 8 9 10



$$4 + 2 =$$



Landzelerisa tinomboro.

15 15 15 15

khumemune

15 15 15 15



Dirowa 15 wa minchumu.

Sweswi yi dirowe hi ndlela yo hambana.





Tatisa tinomboro leti siyiweke.

7



Hlayela minchumu leji landzelaka.



Hetisa tafula leri landzelaka. Rixaxa rin'wana na rin'wana ri na xifaniso, nomboro na vito ra nomboro leyo.

	15	khumemune
		khumemune
15		



Hi kuma yini loko hi yisa 15 ehansi hi n'we? _____

Hi kuma yini loko hi engetela n'we eka 15? _____



Teacher:
Sign:
Date:



11 12 13 14 15 16 17 18 19 20

Ku hlanganisa ku fika eka 20 – Ku ya emahlweni no hlayela

Mpfuxeto:

Titolovete ku tsala vito ra nomboro.


6

ntsevu



Languta xifaniso kutani u tsala xivulwa xa tinomboro xa swin'wana na swin'wana.


Lisa u na 3 wa malekere. Mandla u na 5 wa malekere. Xana va na malekere mangani loko ya hlanganile hinkwawo?



A hi hlayeleni:

3	...	4	5	6	7	8
<input type="text"/>	+	<input type="text"/>	=	<input type="text"/>		

A ndzi ri na 8 wa timabulu kutani ndzi lahlekeriwa hi 4 wa tona. Xana ndzi sale na timabulu tingani?

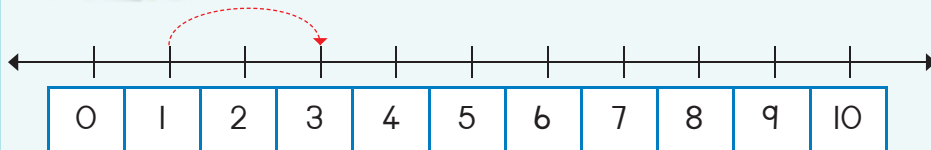


A hi hlayeleni hi xindzhaku:

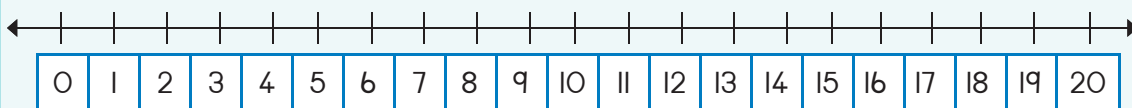
8	...	7	6	5	4
<input type="text"/>	-	<input type="text"/>	=	<input type="text"/>	



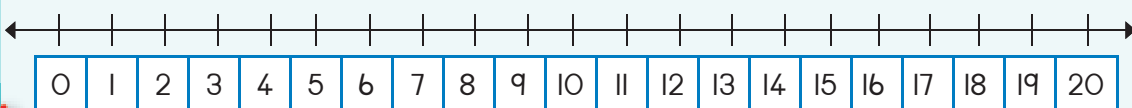
Tatisa tinhlamulo.



$1 + 2 = \square$



$13 + 2 = \square$

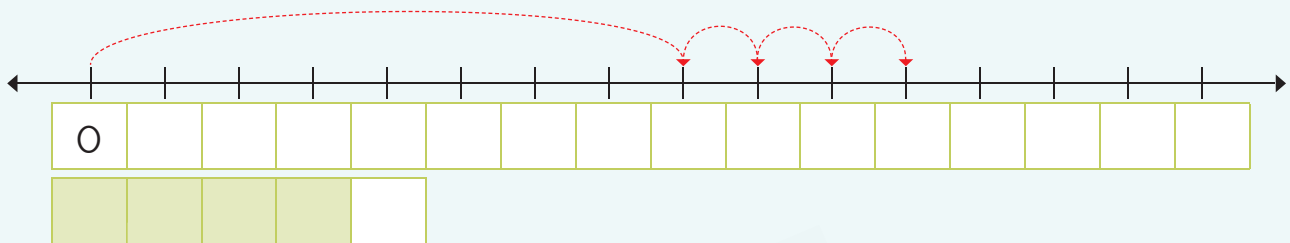
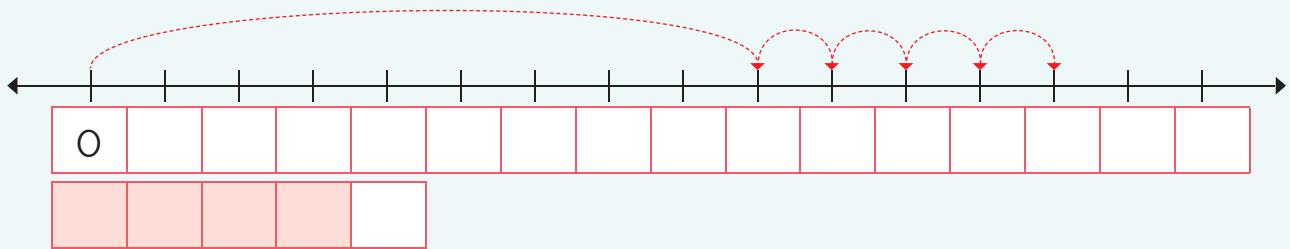
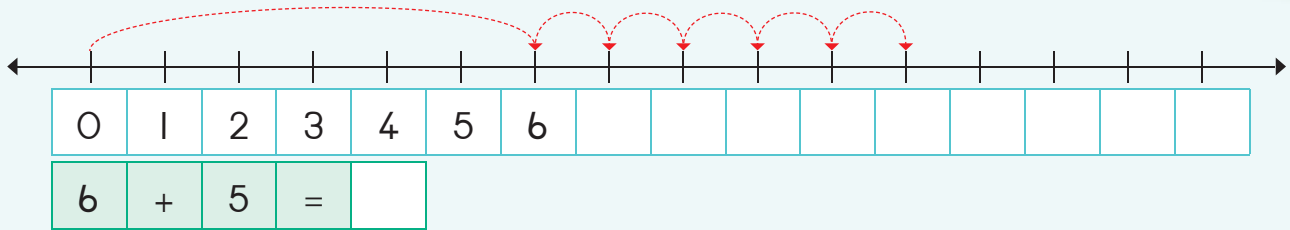


$15 + 2 = \square$





Tatisa tinomboro eka ndzhati wa mintsengo u tlhela u tsala xivulwa xa tinomboro xa ndzhati wun'wana na wun'wana wa mintsengo.



Engetela 2.

3	5
4	
2	



7	
8	
6	



Tatisa tinomboro.

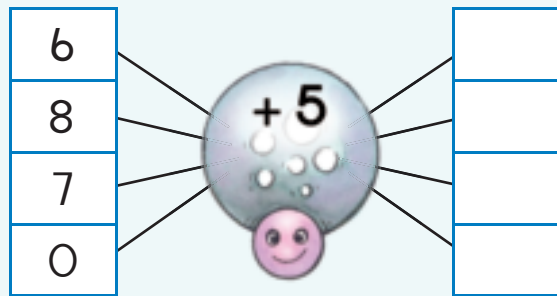
Ndzi na 7 wa malembe. Xana ndzi ta va na malembe mangani eka nkarhi wa 5 wa malembe?

7					
---	--	--	--	--	--

Ndzi ta va na _____ wa malembe.



Pfuna pume ku hetisa nhlayo.



Teacher:
Sign:
Date:



Ku hlanganisa – ku aka no tlhantlha tinomboro ku fika eka 10

Mpfuxeto:

Titolovete ku tsala vito ra nomboro.

7

nkombo



Tatisa nhlamulo.



Khalara ku kombisa leswi landzelaka.

$3 + 3 = \square$



$3 + 9$



$4 + 8$



$0 + 5 = \square$



$5 + 7$



$3 + 2 + 1 = \square$



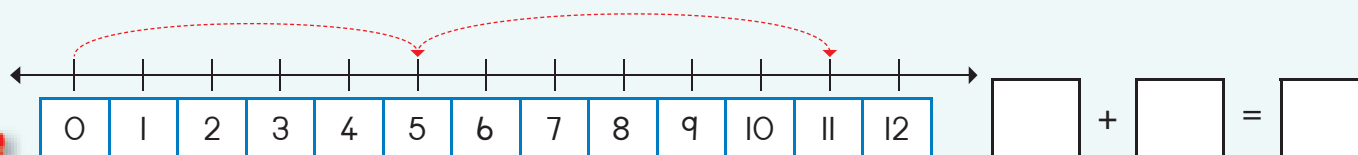
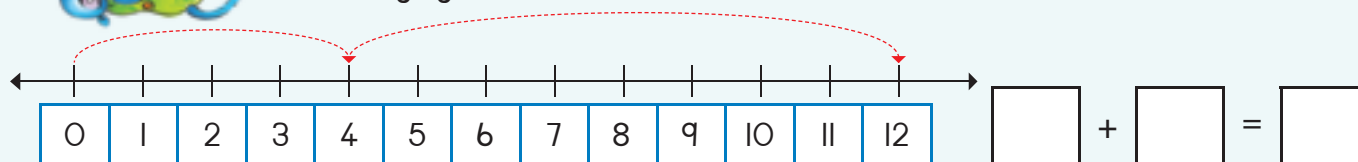
$6 + 6$



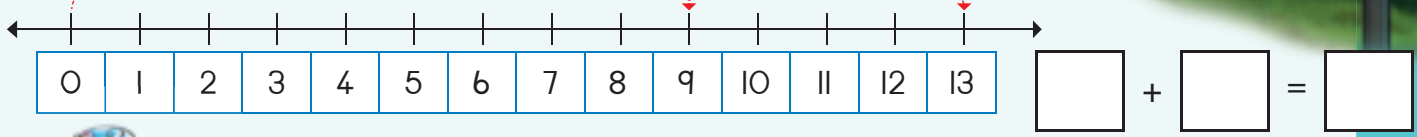
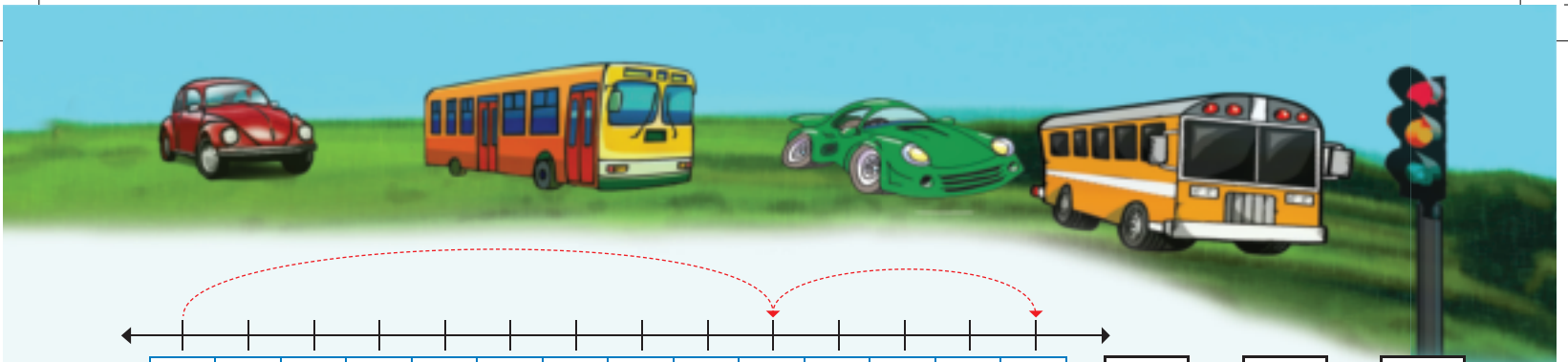
$7 + 5$



Tsala nhlayo ya:



0 1 2 3 4 5 6 7 8 9 10



Hetisa ndzhati wa mintsengo u tlhela u tatisa nhlamulo.



Oloxa leswi landzelaka hi ku dirowa swifaniso.

Ndzi na 5 wa timabulu kasi munghana wa mina u na 8. Xana hi na timabulu tingani hinkwerhu ka hina?

□ + □ = □

Ndzi na 9 wa swiluva swo nyika mudyondzisi wa hina kasi munghana wa mina u na 6 wa swiluva. Xana hi kumile swiluva swingani hinkwaswo ka swona.

□ + □ = □

Teacher:
Sign:
Date:

Ku hlanganisa – ku aka no tlhantlha tinomboro ku fika eka 20

Mpfluxeto:

Titolovete ku tsala vito ra nomboro.

8

nhungu






Tatisa nhlamulo.


$0 + 2 =$	$2 + 2 =$	$4 + 2 =$	$6 + 2 =$	$8 + 2 =$
$10 + 2 =$	$12 + 2 =$	$14 + 2 =$	$16 + 2 =$	$18 + 2 =$




Tirhisa swiluva swa mihlovo yo hambana ku endla swivulwa swa wena swa tinomboro.



Pfuna pume ku hetisa
tinhlayo.



Ku na timbilu tingani?



Endla nhlayo ya wena.

$$\square + \square = \square$$



0 1 2 3 4 5 6 7 8 9 10



Yelanisa tiphere ta tinomboro ku endla tinomboro leti landzelaka.

7	●	13	●	5
8	●			4
9	○			6
10	○			2
11	○			3

6	○	11	○	7
7	○			4
3	○			8
4	○			5
5	○			6

8	○	12	○	6
10	○			1
4	○			8
11	○			4
6	○			2



Tsala xivulwa xa tinomboro xa:

0 1 2 3 4 5 6 7 8 9 10 11 12 13 14 15

+ =

0 1 2 3 4 5 6 7 8 9 10 11 12 13 14 15

+ =

Mpfuxeto:

Mpfuxeto: Khalara nhlamulo leyi nga yona.

xifaniso xa le mahlweni
xifaniso xa le ndzhaku
xifaniso xa le tlhelo

xifaniso xa le mahlweni
xifaniso xa le ndzhaku
xifaniso xa le tlhelo

xifaniso xa le mahlweni
xifaniso xa le ndzhaku
xifaniso xa le tlhelo

xifaniso xa le mahlweni
xifaniso xa le ndzhaku
xifaniso xa le tlhelo

Teacher:
Sign:
Date:



Ku hlanganisa – ku aka no tlhantlha tinomboro ku fika eka 20

Mpfuxeto:

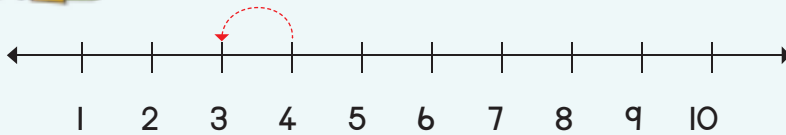
Titolovete ku tsala vito ra nomboro.

q

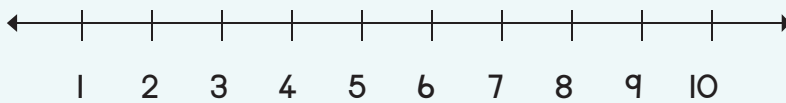
kaye



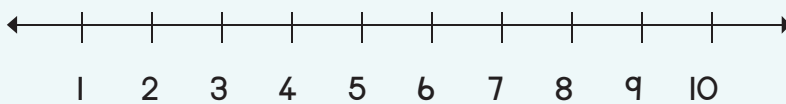
Tatisa nhlamulo.



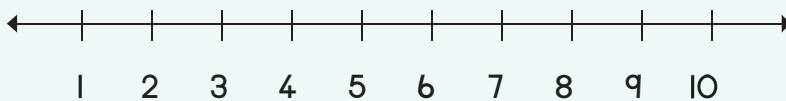
$4 - 1 = \square$



$5 - 3 = \square$




$4 - 2 = \square$



$5 - 2 = \square$

Pfuna pume ku hetisa
tinhlayo.

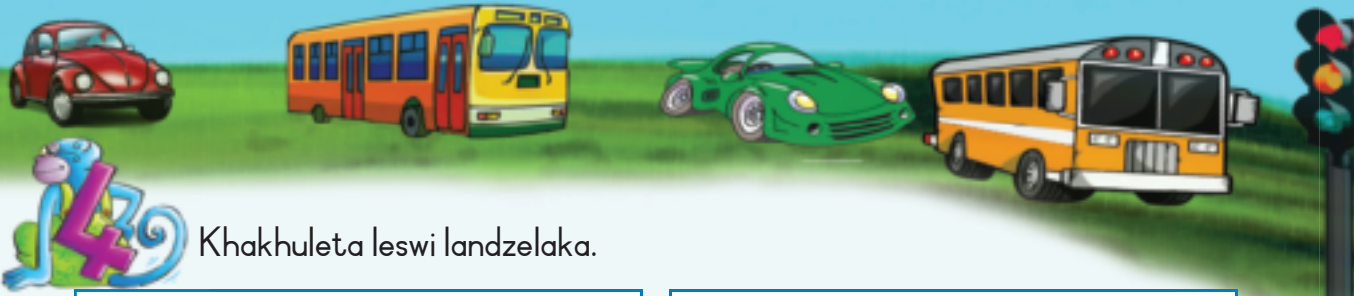
Ku na timbilu tingani?



Endla nhlayo ya wena.

$\square + \square = \square$





Khakhuleta leswi landzelaka.

$$7 + 4 = \square$$

$$7 + 4 + 1 = \square$$

$$10 + 1 = \square$$

$$6 + 6 = \square$$

$$6 + \square + \square = \square$$

$$10 + \square = \square$$

$$13 - 6 = \square$$

$$13 - 3 + 3 = \square$$

$$10 - 3 = \square$$

$$12 - 8 = \square$$

$$\square - \square + \square = \square$$

$$10 - 3 = \square$$



Tsala tinhlamulo, u khalaria u tlhela u dirowa.

$8 + 6 = \square$

Ku na tibolo tingani?

$(8 + 2) + 4 = \square \rightarrow 10 + 4 = \square$

$15 - 7 = \square$

Ku na tibolo tingani?

$(15 - 5) - 2 = \square \rightarrow 10 - 2 = \square$

$9 + 4 = \square$

Ku na tibolo tingani?

$(9 + 1) + 3 = \square \rightarrow \square = \square$

$14 - 5 = \square$

Ku na tibolo tingani?

$(\square - \square) - 1 = \square \rightarrow 10 - 1 = \square$

Mpuxeto:

Titolovete ku tsala vito ra nomboro.

10

khume


Teacher: _____
 Sign: _____
 Date: _____



Ku leha



Languta xifaniso kutani u hlamula swivutiso leswi landzelaka.



Xana i mani loyi a nga leha swinene?

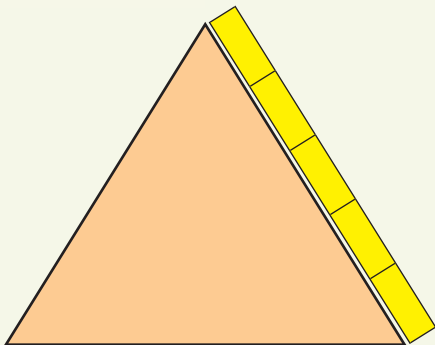
Mufana wo koma swinene i mani?


Xana i mani loyi a nga koma swinene?


Nhwanyana wo leha swinene i mani?



Matlhelo ya swivumbeko leswi landzelaka ya lehile ku ringana tibuloko tingani?












Hi byihi vulehi na vuanami bya tafula hi vulehi bya tibuloko na tipenisele?



Vuanami i ____ wa tibuloko.



Vulehi i ____ wa tibuloko.



Vuanami i ____ wa tibuloko.

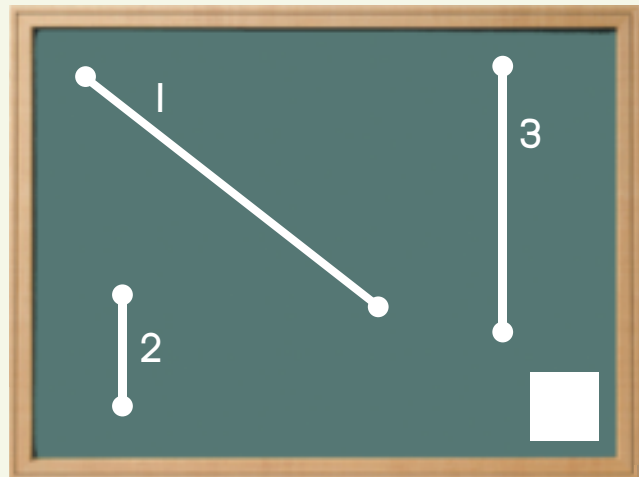
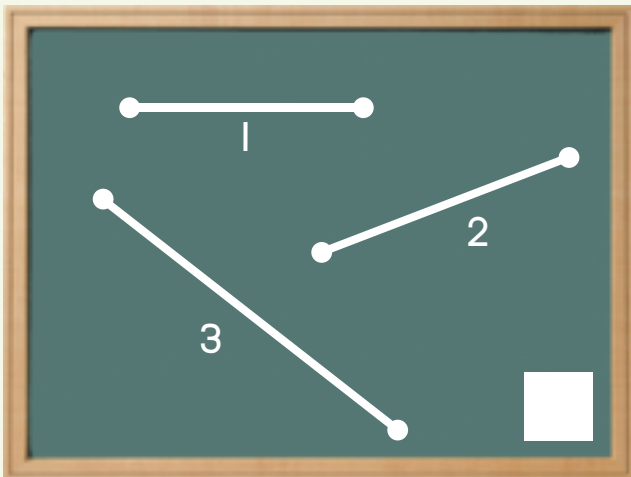


Vulehi i ____ wa tibuloko.



Hi wihi ntila wo koma swinene?
Ntila wa 1, wa 2 kumbe wa 3?

Hi wihi ntila wo leha swinene?
Ntila wa 1, wa 2 kumbe wa 3?



Teacher: _____
Sign: _____
Date: _____



Mali na cinciri



Gwajula ntsengo wa le henhla swinene eka rixaxa rin'wana na rin'wana.

 <input type="checkbox"/>	 <input checked="" type="checkbox"/>	 <input type="checkbox"/>	 <input type="checkbox"/>
 <input type="checkbox"/>	 <input type="checkbox"/>	 <input type="checkbox"/>	 <input type="checkbox"/>



Gwajula swingwece leswi ku nyikaka R10.

			
<input type="checkbox"/>	<input type="checkbox"/>	<input type="checkbox"/>	<input type="checkbox"/>
			
<input type="checkbox"/>	<input type="checkbox"/>	<input type="checkbox"/>	<input type="checkbox"/>



Gwajula swingwece leswi ku nyikaka R20.

					
<input type="checkbox"/>	<input type="checkbox"/>	<input type="checkbox"/>	<input type="checkbox"/>	<input type="checkbox"/>	<input type="checkbox"/>
		<input type="checkbox"/>			<input type="checkbox"/>
<input type="checkbox"/>	<input type="checkbox"/>	<input type="checkbox"/>	<input type="checkbox"/>	<input type="checkbox"/>	<input type="checkbox"/>





Khakhuleta leswi landzelaka:

$R5 + R10 =$		$R5 + R2 + R8 =$		$R10 + R10 =$	
$R3 + R10 + R2 + R2 =$		$R5 + R7 + R1 + R5 =$		$R10 + R1 + R5 + R2 =$	



Ololoxa leswi landzelaka:

Ndzi na xingwece xa R2 na xingwece xa R5. Munghana wa mina u na swingwece swinharhu swa R2. I mani loyi a nga na mali yo tala?

Ndzi na R5 na xingwece xa R1. Munghana wa mina u na swingwece swinharhu swa R5. I mani loyi a nga na mali yo tala?



Ndzi na R15:

Ndzi hakela

Cinci

$R4 + R7 = R11$	$R4$
$R6 + R9 =$	
$R8 + R3 =$	
$R2 + R11 =$	
$R3 + R8 =$	
$R6 + R8 =$	
$R0 + R2 =$	
$R2 + R2 =$	
$R4 + R2 =$	
$R6 + R2 =$	




Khakhuleta leswi landzelaka:

Ndzi na R15. Ndzi xava phakete ra machipisi hi R6. Xana ndzi sale na mali muni?



Yisa ehansi hi R2.

R11		R4	
R12		R6	
R10		R8	



Mali na cinci



Dirowa swingwece swo endla:

R11	
R12	
R13	
R14	



Grwajula u tlhela u tsala nhlamulo leyi faneleke.

$R18 - R8 =$ $R10$

$R12 - R2 =$

$R15 - R4 =$

$R14 - R7 =$



Khakhuleta leswi landzelaka:

$R15 - R10 =$	<input type="text"/>
$R10 - R1 - R1 - R2 =$	<input type="text"/>

$R20 - R2 - R8 =$	<input type="text"/>
$R5 - R4 =$	<input type="text"/>

$R20 - R5 =$	<input type="text"/>
$R10 - R1 - R5 - R2 =$	<input type="text"/>







Khakhuleta leswi landzelaka:

Ndzi na R15. Ndzi xava hi:	Xana ndzi sale na mali muni?
R2 na R4 =	R9
R8 na R4 =	
R12 na R2 =	
R5 na R5 =	
R8 na R7 =	
R10 na R2 =	
R8 na R2 =	
R6 na R2 =	
R4 na R2 =	
R2 na R2 =	
R9 na R6 =	
R10 na R2 =	



Ndzi na R15. Ndzi xava xiphaketana xa malekere hi R11.
Dirowa xifaniso ku kombisa mali leyi ndzi saleke na yona.



Mali: ku hlanganisa na ku susa



Khakhuleta leswi landzelaka:

$R10 + R2 =$	
$R10 + R4 =$	
$R9 + R5 =$	
$R12 + R5 =$	

$R10 + R5 =$	
$R10 + R7 =$	
$R8 + R4 =$	
$R14 + R2 =$	

$R10 + R1 =$	
$R10 + R6 =$	
$R7 + R6 =$	
$R11 + R6 =$	



Khakhuleta leswi landzelaka:

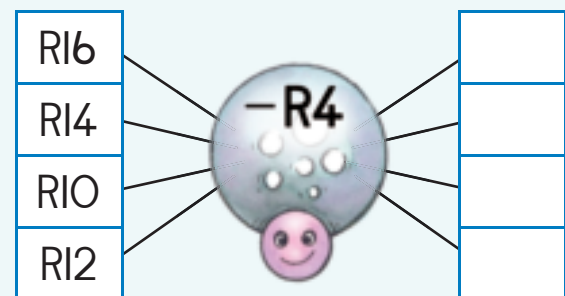
$R10 - R7 =$	
$R15 - R1 =$	
$R12 - R2 =$	
$R15 - R6 =$	

$R10 - R2 =$	
$R15 - R15 =$	
$R14 - R7 =$	
$R12 - R9 =$	

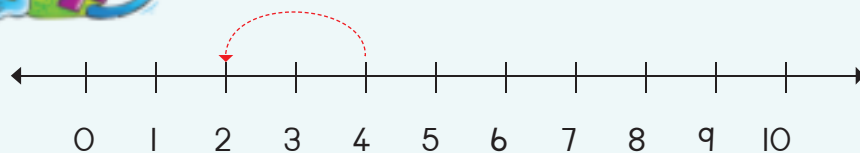
$R10 - R5 =$	
$R15 - R2 =$	
$R16 - R6 =$	
$R14 - R4 =$	



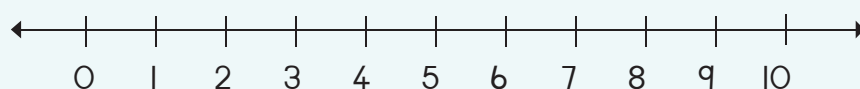
Pfunza pume ku hetisa tinhlayo hinkwato.



Yisa ehansi hi R2.



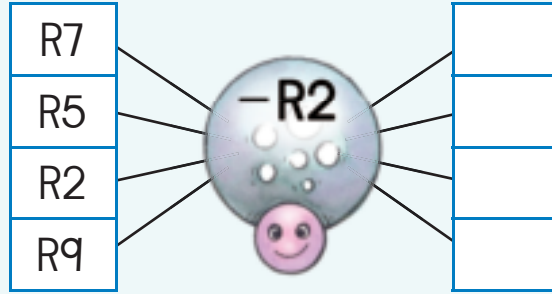
$R4 - R2 =$	
-------------	--



$R7 - R2 =$	
-------------	--



Pfuna pume ku endla tinhlayo hinkwato to susa.



Ololoxa leswi landzelaka.

A wu ri na R12. Manana wa wena u ku nyikile R5. Xana u na mali muni sweswi?

U na R19. U xava malekere hi R6. Xana u sale na mali muni?

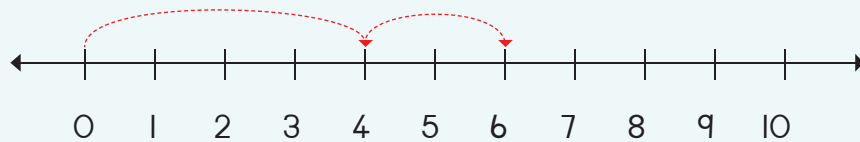


Xana ndzi hlayisile mali muni?

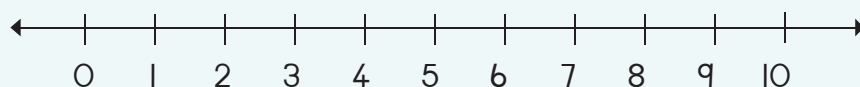


Kombisa ntsengo eka ndzhati wa mintsengo u tlhela u khakhuleta nhlamulo.


R4 + R2 =



R8 + R2 =



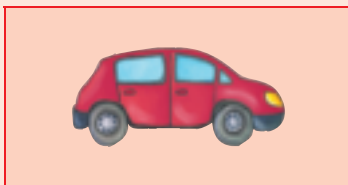
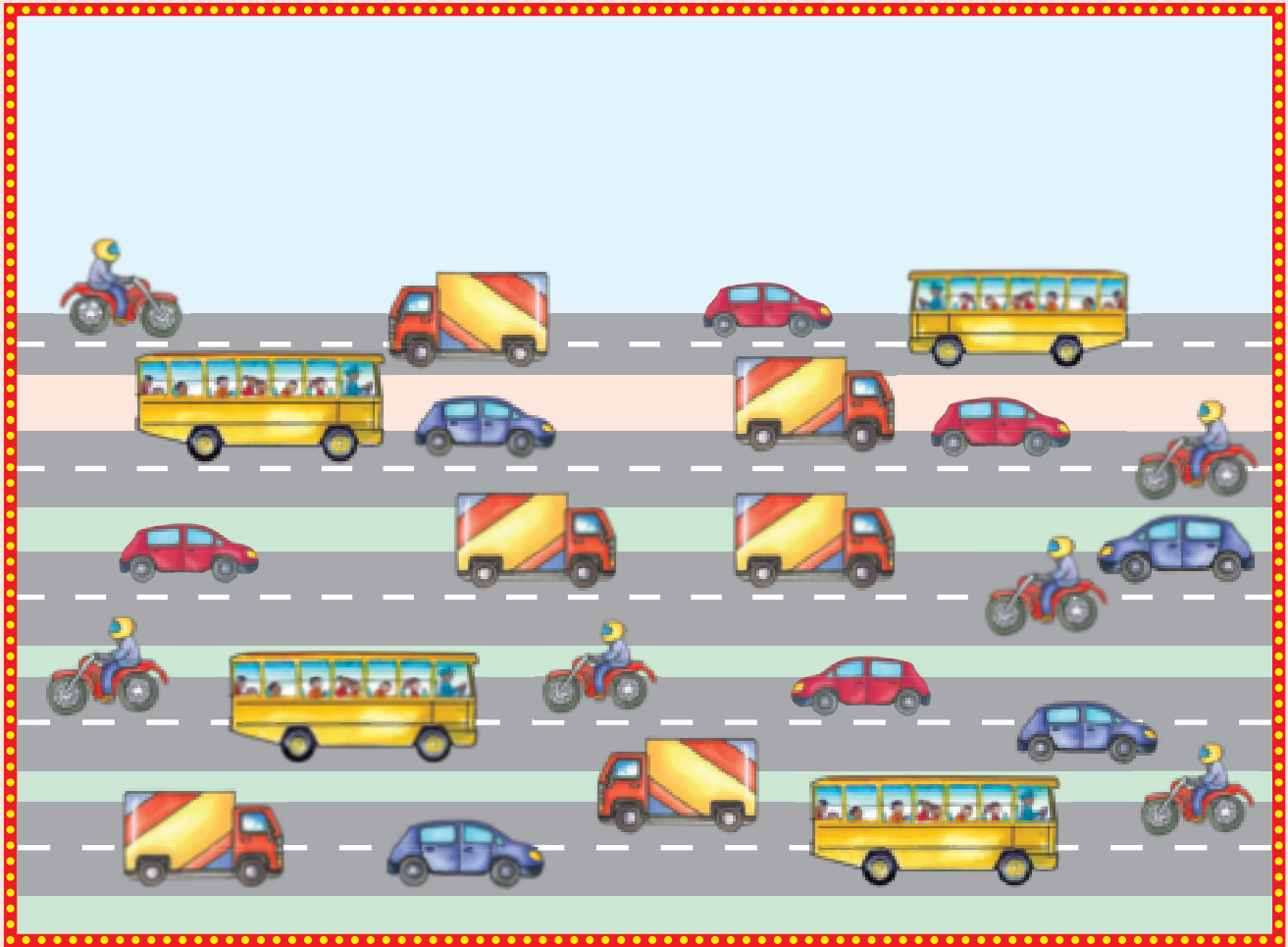
Teacher: _____
 Sign: _____
 Date: _____



Switiviwa



Hlayela leswaku ku na swingani swa rixaka rin'wana na rin'wana ra swifambo.





Hlayela swivumbeko u tlhela u khalara chati laha hansi ku kombisa leswaku ku na swingani swa rixaka rin'wana na rin'wana. Kutani hlamula swivutiso.



5						
4						
3						
2						
1						
		▲	●	■	♥	★
					●	

_____ hi yona yi nga tala ngopfu.
_____ hi byona lebyi nga talangiki.

○

□

△



Teacher:
 Sign:
 Date:



Switiviwa na nkarhi



Vulavula hi swifaniso leswi landzelaka kutani u swi veka hi ndzandzelelano lowu faneleke.



1



2



3



4



Tirhisa makhadi yo huma eka Xitsemiwa xa I ku hetisa girafu ya swifaniso.



--	--	--	--



Teacher:
Sign:
Date:



Mintlawa ya vuntlhanu ku fika eka 15

Mpfuxeto:

Titolovete ku tsala vito ra nomboro.

5

ntlhanu

Kotara ya 3



Languta xifaniso lexi landzelaka kutani u hlamula xivutiso.

Languta xifaniso. Leswi hi swona
leswi hi nga tsarisaka xiswona:I mintlawa ya 5 yingani leyi
u nga kotaka ku yi endla?


Dirowa xifaniso xa wena laha.



Intlawa wa 5 i 5




Hlayela tintiho kutani u tsala nhlamulo ya wena.




$$5 + 5 =$$



$$5 + 5 + 5 =$$



$$5 + 5 + 5 + 5 =$$

2 wa mintlawa
ya 5 i 10





Dirowa swirhendzevutana eka leswi landzelaka ku endla:




Tsala swivulwa swa tinomboro swa leswi landzelaka.

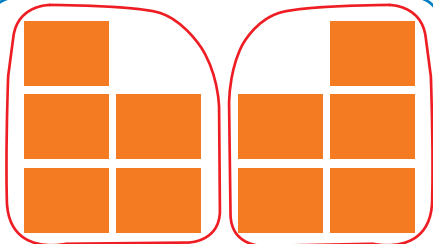

1 ntlawa wa 5



2 wa mintlawa ya 5



3 wa mintlawa ya 5



I mintlawa ya ntlhanu yingani leji u nga yi endlaka hi?

10	na	0		wa mintlawa
8	na	2		wa mintlawa
6	na	4		wa mintlawa
4	na	1		wa mintlawa
2	na	3		wa mintlawa



Teacher:
Sign:
Date:





Vuntlhanu: ku hlanganisa ko vuyeleriwa ku fika eka 15

Mpfluxeto:

Mpfluxeto: Tatisa tinomoro leti siyiweke.



Ku na swikunwana swingani na tintiho tingani?
Tsala xivulwa xa tinomoro xa swona.





Ntlawa wa mabanana ya ntlhanu

Mintlawa mimbirhi ya swiluva swa ntlhanu eka ntlawa wun'wana na wun'wana

Dirowa:




Dirowa swivumbeko swa leswi landzelaka.

$$5 + 5 = 10$$


$$5 + 5 + 5 = \square$$








Bana xirhendzevutana u tlhela u hlalela leswaku i mintlawa yingani ya vuntlhanu leyi u nga yi endlaka eka khadi rin'wana na rin'wana.







Tsala xivulwa xa tinomboro xa:

○	○	○	○	○	○	○	○	○	○	○	○	○	○	○	○	○	○	○	○



Tirhisa mihlovo yo hambana ku kombisa tinomboro leti u nga ta ti tirhisa ku endla mintlawa ya vuntlhanu.

1	2	3	4	5	6	7	8	9	10
11	12	13	14	15					



Xana i mintlawa yingani ya vuntlhanu leyi u nga yi endlaka?

1	na	14	swi endla		wa mintlawa
13	na	2	swi endla		wa mintlawa
8	na	2	swi endla		wa mintlawa
7	na	8	swi endla		wa mintlawa
9	na	2	swi endla		wa mintlawa



Teacher: _____

Sign: _____

Date: _____





Vuntlhanu ku fika eka 15



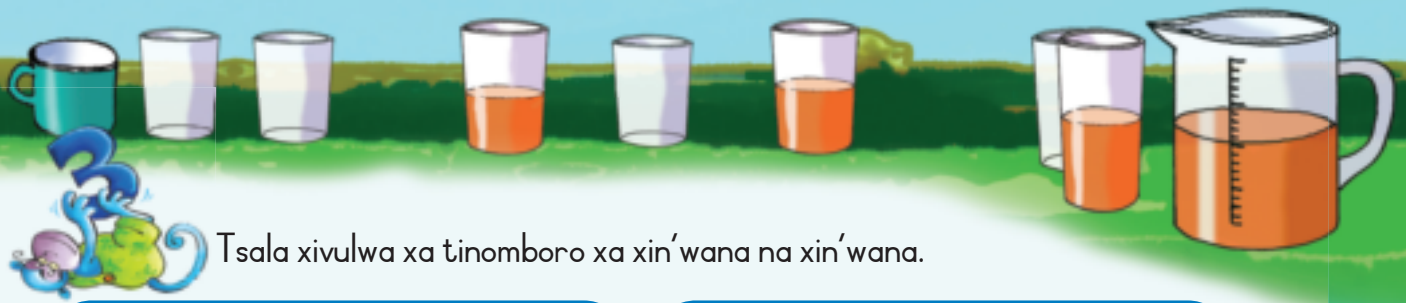
Tatisa tinomboro leti siyiweke.

I		3		5		7	8	9	
II	12								




Endla mintlawa ya vuntlhanu. Xifufunhunu xin'wana na xin'wana xi na ntlawa wa mathonsi ya ntlawa ya ntlhanu eka rimpapa rin'wana na rin'wana. Dirowa mathonsi lama siyiweke.






Tsala xivulwa xa tinomboro xa xin'wana na xin'wana.









Khakhuleta leswi landzelaka:

$0 + 5 = \square$

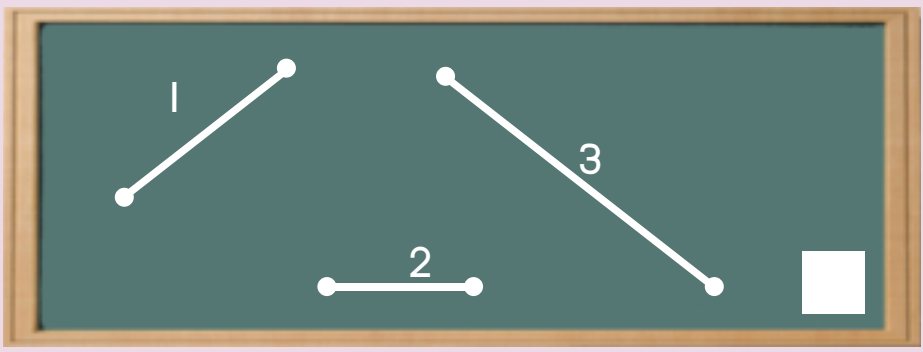
$5 + 5 + 5 = \square$

$5 + 5 = \square$

$5 + 5 + 5 + 5 = \square$

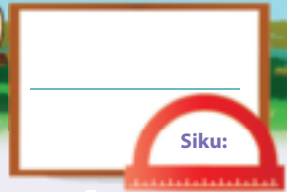

Mpfluxeto:

Mpfluxeto: Hi wihhi ntila wo leha swinene?



Teacher: _____
Sign: _____
Date: _____





Tipatironi ta tinomboro ta vuntlhanu ku fika eka 50

Kotara ya 3

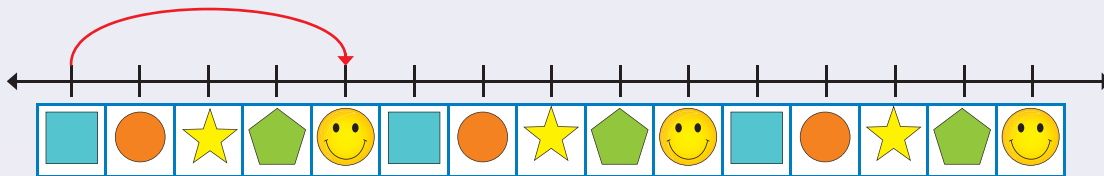


Hetisa patironi ya vuntlhanu hi ku khalara tinomboro.

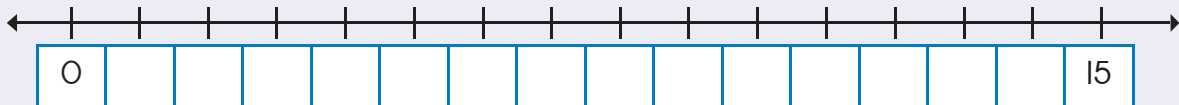
1	2	3	4	5	6	7	8	9	10
11	12	13	14	15	16	17	18	19	20
21	22	23	24	25	26	27	28	29	30
31	32	33	34	35	36	37	38	39	40
41	42	43	44	45	46	47	48	49	50



Dirowa tihupu ku kombisa mintlawa ya vuntlhanu.


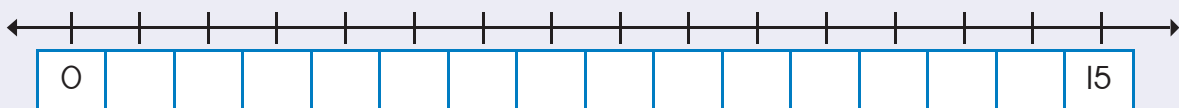


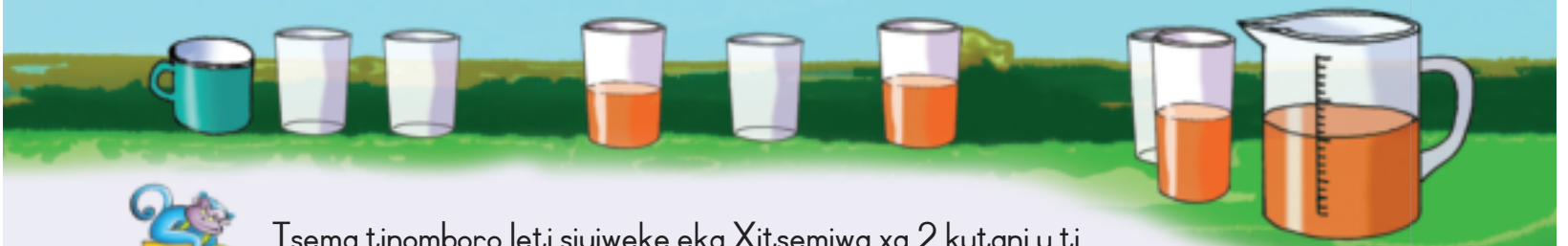
Tata tinomboro leti siyiweke u tlhela u dirowa tihupu ku kombisa mintlawa ya vuntlhanu.



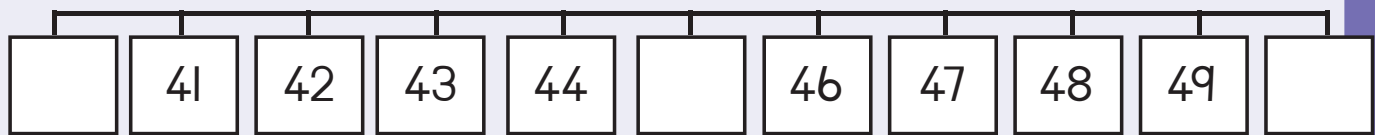
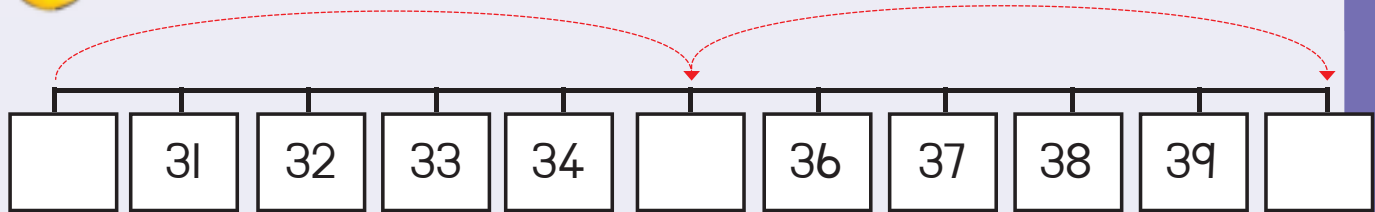
Hetisa ndzhati wa mintsengo. Dirowa tihupu ku kombisa mintlawa ya vuntlhanu.

Ku na wa mintlawa ya vuntlhanu.



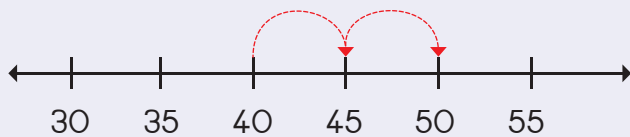


Tsema tinomboro leti siyiweke eka Xitsemiwa xa 2 kutani u ti veka eka mindzhati ya mintsengo.

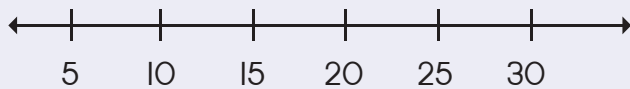


Dirowa tihupu ku kombisa tinomboro leti landzelaka:

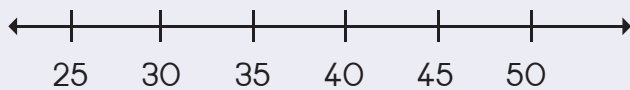
40, 45, 50



10, 15, 20



25, 30, 35



Teacher: _____
 Sign: _____
 Date: _____





Siku: _____

Tipatironi ta tinomboro ta vuntlhanu ku fika eka 80


Kotara ya 3



Xana i mintlawa yingani ya vuntlhanu leyi u yi vonaka exifanisweni lexi landzelaka?

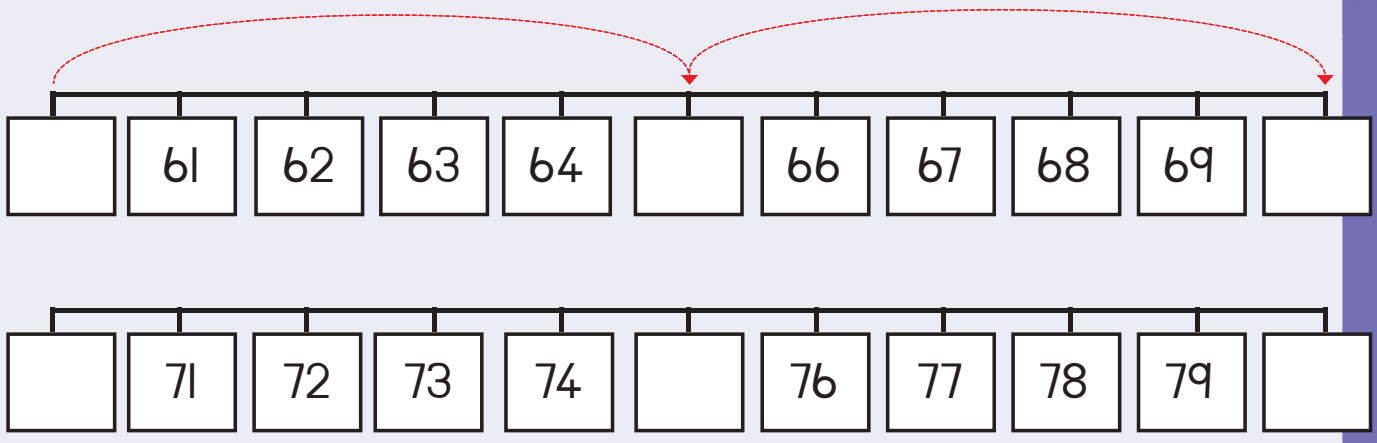


Hetisa swifaniso leswi landzelaka ku kombisa mintlawa mimbirhi ya vuntlhanu eka buloko yin'wana na yin'wana.



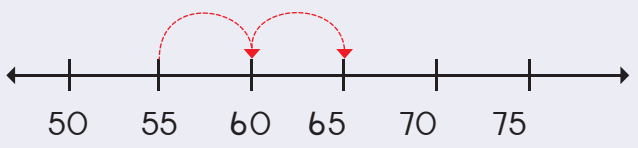


Tsema tinomboro leti siyiweke eka Xitsemiwa xa 2 kutani u ti veka eka mindzhati ya mintsengo.

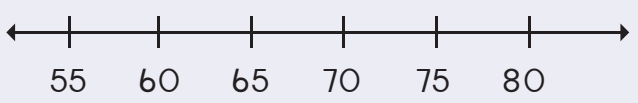


Dirowa tihupu ku kombisa leswi landzelaka:

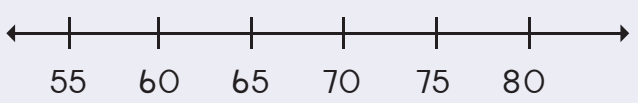
55, 60, 65



65, 70, 75



70, 75, 80



Teacher:
Sign:
Date:





Ku mbirhahata


Kotara ya 3



Mbirhahata swilo leswi landzelaka kutani u tatisa nhlamulo.



1 loko yi
mbirhahatiwile i



4 loko yi
mbirhahatiwile i



5 loko yi
mbirhahatiwile i



Hlayela swivumbeko eka rin'wana na rin'wana ra timpapa ta phaphatani.
Hetisa swivulwa swa tinomboro leswi mbirhahatiweke.



$7 + 7 =$
kumbe
7 kambirhi =



$5 + 5 =$
kumbe
5 kambirhi =







$2 + 2 =$
kumbe
2 kambirhi =



Hi ri 6 kambirhi i 12. Xana hafu ya 12 yi ta va yini? _____

Hetisa leswi landzelaka:











<p>Xana u vona mavhilwa mangani?</p>  <input type="text"/>	<p>Xana u vona mavhilwa mangani sweswi?</p>  <input type="text"/>	<p>Xana ku na matandza mangani endzeni ka bokisi?</p>  <input type="text"/>	<p>Xana u vona matandza mangani sweswi?</p>  <input type="text"/>
---	--	---	--



Hlayela mathonsi u tlhela u ya mbirihata.





Mbirihata tinomboro.

	1	kambirhi →		2	4	kambirhi →	8
	2	kambirhi →			5	kambirhi →	
	3	kambirhi →			6	kambirhi →	
	4	kambirhi →			3	kambirhi →	
	5	kambirhi →			2	kambirhi →	
					10	kambirhi →	



Hetisa leswi landzelaka:

<p>Xana ku na masiku mangani evhikini?</p> <table border="1" data-bbox="190 1428 581 1530"> <tr><td>S</td><td>M</td><td>T</td><td>W</td><td>T</td><td>F</td><td>S</td></tr> <tr><td></td><td></td><td></td><td></td><td></td><td></td><td></td></tr> </table> <input type="text"/>	S	M	T	W	T	F	S								<p>Xana ku na masiku mangani eka mavhiki mambirhi?</p> <table border="1" data-bbox="729 1383 1362 1474"> <tr><td>S</td><td>M</td><td>T</td><td>W</td><td>T</td><td>F</td><td>S</td></tr> <tr><td></td><td></td><td></td><td></td><td></td><td></td><td></td></tr> </table> <p>Hi ri 7 kambirhi i 14. Xana hafu ya 14 yi ta va yini?</p> <input type="text"/>	S	M	T	W	T	F	S							
S	M	T	W	T	F	S																							
S	M	T	W	T	F	S																							
<p>Xana u vona minkondzo yingani?</p>  <input type="text"/>	<p>Xana u vona minkondzo yingani sweswi?</p>  <input type="text"/> <input type="text"/> <p>Hi ri 2 kambirhi i 4. Xana hafu ya 4 yi ta va yini?</p>																												




Hetisa leswi landzelaka:

$2 + 2 + 1 =$	5	kumbe	$2 \text{ kambirhi} + 1 = 5$
$4 + 4 + 1 =$		kumbe	
$7 + 7 + 1 =$		kumbe	

Teacher: _____
Sign: _____
Date: _____





Tihafu



Bana nkhwati eka hafu ya vana kutani u tsala nhlamulo.

Kotara ya 3

Hafu ya 4 i _____

Hafu ya 6 i _____

Hafu ya 2 i _____

Hafu ya 8 i _____



Bana nkhwati eka hafu kutani u tatisa nhlamulo.

Hafu ya 2 = <input type="text"/>	Hafu ya 8 = <input type="text"/>
Hafu ya 4 = <input type="text"/>	Hafu ya 10 = <input type="text"/>
Hafu ya 6 = <input type="text"/>	



Ku na tinhlampfi tingani?













I yini hafu ya tinhlampfi?





Hlayela mathonsi u tlhela u ya hafula.

	2	hafu →		<input type="text" value="1"/>
	4	hafu →		<input type="text"/>
	6	hafu →		<input type="text"/>
	8	hafu →		<input type="text"/>
	10	hafu →		<input type="text"/>



Hafula tinomboro.

4	hafu →	<input type="text" value="2"/>
8	hafu →	<input type="text"/>
6	hafu →	<input type="text"/>
10	hafu →	<input type="text"/>
12	hafu →	<input type="text"/>
14	hafu →	<input type="text"/>



Xana ku na swivungu swingani?



Hafu ya swivungu i:



Hlamula leswi landzelaka:

Xana ku na milenge yingani?



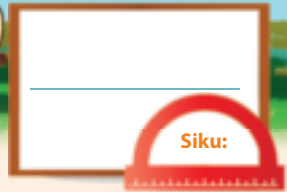
Ku na milenge yingani sweswi?



Hi ri hafu ya 8 i



Teacher: _____
Sign: _____
Date: _____









Minchumu ya 3 wa matlhelo

Kotara ya 3






Gwajula nchumu lowutsongo.

					
<input type="checkbox"/>	<input type="checkbox"/>	<input type="checkbox"/>	<input type="checkbox"/>	<input type="checkbox"/>	<input type="checkbox"/>




Dirowa nchumu lowukulu eka tlhelo ra xinene ra xifaniso xin'wana na xin'wana.


					
---	--	---	--	---	--



Dirowa bolo leyi nga yikulu ku tlula bolo ya wasi.

Dirowa bolo leyi nga yitsongo eka bolo ya mpunga.


	
---	--

	
--	--



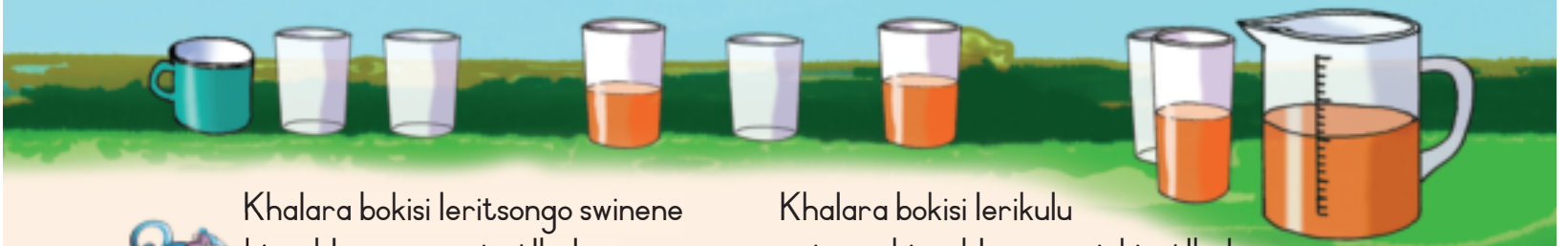
Dirowa bokisi leri nga ritsongo eka bokisi ra xitshopana.

Dirowa bokisi leri nga rikulu eka bokisi ra rihlaza.

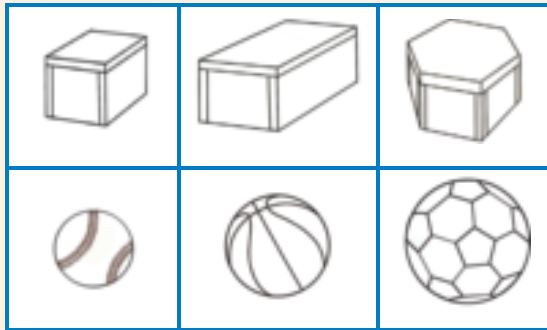
	
---	--

	
---	--

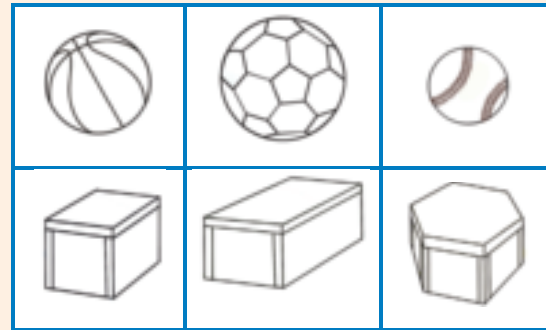




Khalara bokisi leritsongo swinene hi muhlovo wa wasi u tlhela u khalara bolo leyitsongo swinene hi muhlovo wa xitshopana.



Khalara bokisi lerikulu swinene hi muhlovo wa pinki u tlhela u khalara bolo leyikulu swinene hi muhlovo wo tshwuka.



Xana u nga aka khokholo hi swilo leswi landzelaka? Khalara ina kumbe e-e.



ina	e-e
-----	-----



ina	e-e
-----	-----



ina	e-e
-----	-----



Tsema u tlhela u namarheta swifaniso swo huma eka magazini kumbe pephahungu ku endla makhokholo ya wena mambirhi.

Tsundzuka leswaku makhokholo ya fanele ku balansa.

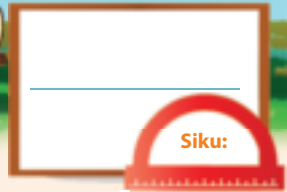


Teacher: _____

Sign: _____

Date: _____





Minchumu ya 3 wa matlhelo – Sayizi na ku khunguluka



Xana minchumu leyi yi ta khunguluka kumbe yi ta rheta?
Khalara nhlamulo leyi nga yona.



khunguluka	rheta
------------	-------



khunguluka	rheta
------------	-------



khunguluka	rheta
------------	-------



khunguluka	rheta
------------	-------




Leswi landzelaka swa koteka?
Khalara nhlamulo leyi faneleke.




ina	e-e
-----	-----



ina	e-e
-----	-----



ina	e-e
-----	-----





Hlawula minchumu leyi landzelaka hi ku yi dirowa endzeni ka buloko leyi faneleke.

	Tibolo	Mabokisi
--	--------	----------



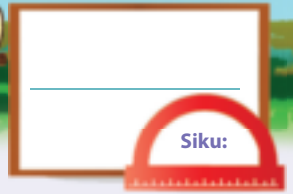
Hlawula minchumu ku ya hi tisayizi hi ku yi dirowa.

	Tibolo letitsongo	Mabokisi lamatsongo
	Tibolo letikulu	Mabokisi lamakulu



Teacher:
Sign:
Date:





Tipatironi ta jometiri

Mpfluxeto:

Dirowa leswi landzelaka:

xirhendzevutana

xikwere

yinhlamune



Hetisa patironi.





Dirowa ku ya emahlweni na patironi.



Dirowa patironi ya wena.



Namarheta swifaniso ku endla patironi ya wena.



Hetisa patironi.

A	B	C	A	B	C				A	B	C
---	---	---	---	---	---	--	--	--	---	---	---

11 12 13 14 15 16 17 18 19 20


Teacher: _____

Sign: _____

Date: _____



90



Mintlawa ya mbirhi ku fika eka 15

Kotara ya 3



Tsala vito ra mfungho lowu wa nomboro.

2

mbirhi



Hlamula swivutiso.



Xana u vona tiphengwini tingani?

Xana u vona tiphere tingani ta milenge?

Ti tsale tanihi xivulwa xa tinomboro:



Hlamula swivutiso.



Xana u vona tibuku tingani?

Xana ndzi nga endla mintlawa ya mbirhi yingani?

Yi tsale tanihi xivulwa xa tinomboro:





Tsala vito ra mfungho lowu wa nomboro.


4



Hlayela timpapa u tlhela u tatisa nhlamulo.


2 + 2 =


2 + 2 + 2 =


2 + 2 + 2 + 2 =






Dirowa swirhendzevutana eka leswi landzelaka ku endla:


4 wa mintlawa ya 2




5 wa mintlawa ya 2



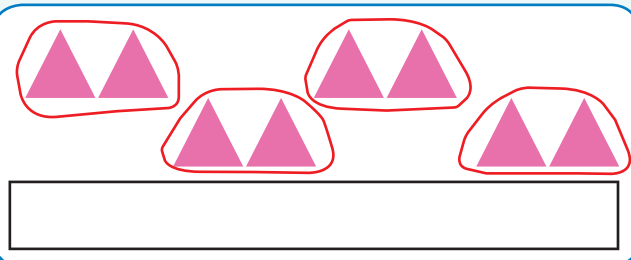
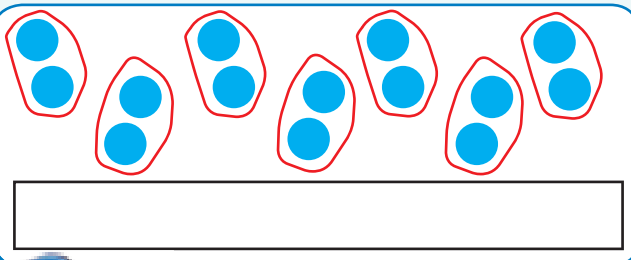

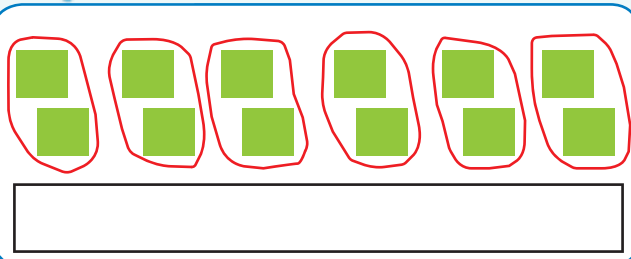
6 wa mintlawa ya 2



7 wa mintlawa ya 2



Tsala xivulwa xa tinomboro xa leswi landzelaka.



Xana ku na mintlawa ya mbirhi yingani leyi u nga kotaka ku yi endla?

13 na 1 swi ta endla	wa mintlawa
11 na 1 swi ta endla	wa mintlawa
9 na 1 swi ta endla	wa mintlawa
7 na 1 swi ta endla	wa mintlawa

12 na 1 swi ta endla	wa mintlawa
5 na 1 swi ta endla	wa mintlawa
1 na 1 swi ta endla	wa mintlawa
10 na 10 swi ta endla	wa mintlawa



Teacher: _____
Sign: _____
Date: _____



Ku hlanganisa ko vuyelela mbirhi ku fika eka 15



Xana ku na milenge yingani?

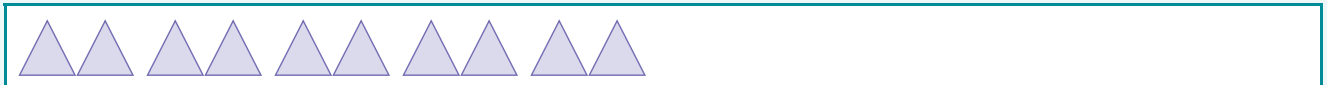


U yi hlayele hi ndlela yihl?



Dirowa swivumbeko ku kombisa leswi landzelaka:

$$\boxed{2} + \boxed{2} + \boxed{2} + \boxed{2} + \boxed{2} = \boxed{}$$



$$\boxed{2} + \boxed{2} + \boxed{2} + \boxed{2} + \boxed{2} + \boxed{2} + \boxed{2} = \boxed{}$$


$$\boxed{2} + \boxed{2} + \boxed{2} + \boxed{2} = \boxed{}$$

$$\boxed{2} + \boxed{2} + \boxed{2} + \boxed{2} + \boxed{2} + \boxed{2} = \boxed{}$$

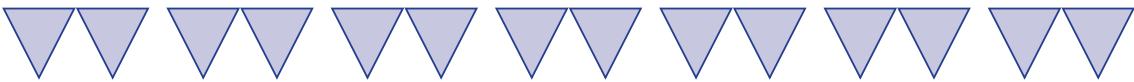





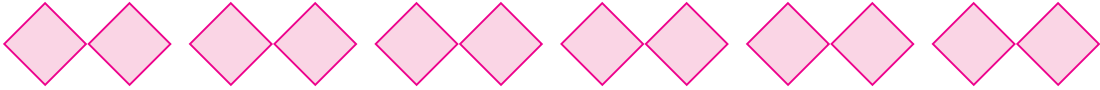
Tsala swivulwa swa tinomboro swa leswi landzelaka.



 $2 + 2 + 2 + 2 + 2 = \square$










Bana xirhendzevutana u tlhela u hlayela leswaku i mintlawe ya mbirhi yingani leyi u nga yi endlaka eka khadi rin'wana na rin'wana.





Hetisa patironi ya tinomboro leti u nga ti tirhisaka ku endla mintlawe ya mbirhi.

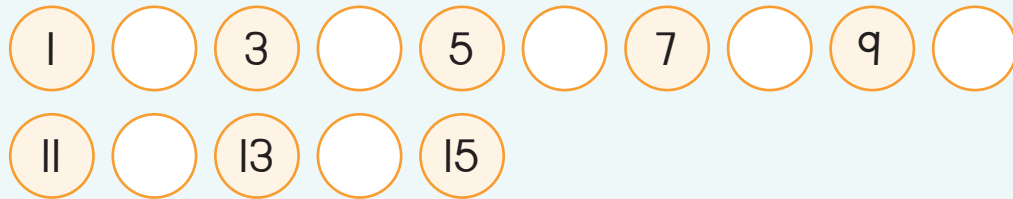
I	2	3	4	5	6	7	8	9	10
II	12	13	14	15					



Vumbirhi ku fika eka 15




Tatisa tinomboro leti siyiweke.



Endla mintlawa ya mbirhi.

Dirowa xirhendzevutana eka ntlawa wun'wana na wun'wana wa mbirhi.



Xana ku na mintlawa yingani ya maapula?

N'wana un'wana na un'wana u ta kuma maapula mangani?




Xana ku na mintlawa yingani ya malekere?

N'wana un'wana na un'wana u ta kuma maapula mangani?



Xana ku na mintlawa mingani ya malamula?

N'wana un'wana na un'wana u ta kuma malamula mangani?



Xana ku na mintlawa yingani ya timabulu?

N'wana un'wana na un'wana u ta kuma timabulu tingani?



Tatisa tinomboro leti siyiweke.

1	2	3	4		6	7	
2	4		8	10		14	16
0	3	6		12		18	21



Tsala xivulwa xa tinomboro u tirhisa swimbirhi-mbirhi.

$2 + 2 + 2 + 2 + 2 + 2 + 2 = 14$



Khakhuleta leswi landzelaka:

$2 + 2 + 2 =$	<input type="text"/>
$2 + 2 + 2 + 2 =$	<input type="text"/>
$2 + 2 + 2 + 2 + 2 =$	<input type="text"/>
$2 + 2 + 2 + 2 + 2 + 2 =$	<input type="text"/>
$2 + 2 + 2 + 2 + 2 + 2 + 2 =$	<input type="text"/>



Bana xirhendzevutana eka mintlawe ya mbirhi eka ntila wun'wana na wun'wana.



Teacher: _____
 Sign: _____
 Date: _____



Tipatironi ta tinomboro ta 2 ku fika eka 50

Kotara ya 3



Tsema tinomboro leti sijiweke eka Xitsemiwa xa 2 kutani u ti namarheta eka ndzhati wa mintsengo. Tlhela u hetisa na tihupu.



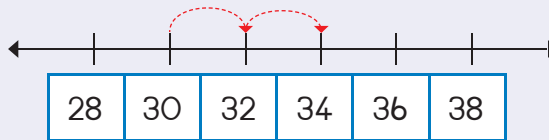
Hetisa patironi hi ku khalara tinomboro leti faneleke.

31	32	33	34	35	36	37	38	39	40
41	42	43	44	45	46	47	48	49	50

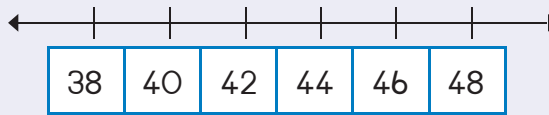


Dirowa tihupu ku kombisa leswi landzelaka:

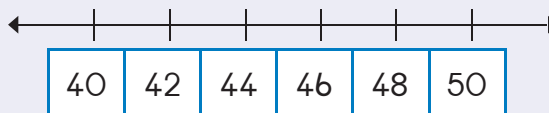
30, 32, 34



40, 42, 44




46, 48, 50



	39
	37
	35
	33
	31
	30

	49
	47
	45
	43
	41
	40





Tsema tinomboro leti siyiweke eka Xitsemiwa xa 2 kutani u ti namarheta eka ndzhathi wa mintsengo. Hetisa tihupu.



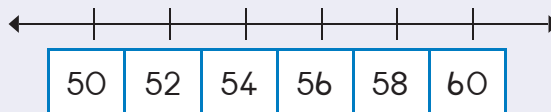
Hetisa patironi hi ku khalaria tinomboro leti faneleke.

61	62	63	64	65	66	67	68	69	70
71	72	73	74	75	76	77	78	79	80

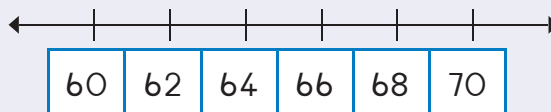


Dirowa tihupu ku kombisa leswi landzelaka:

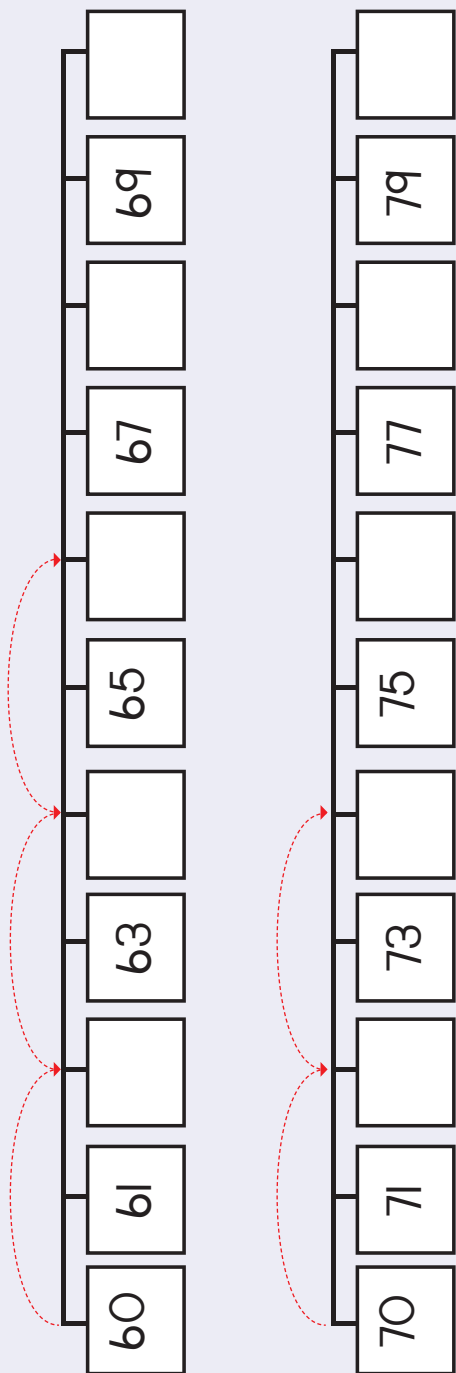
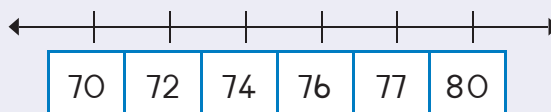
54, 56, 58



64, 66, 68

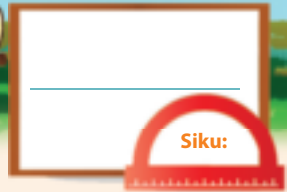



72, 74, 76



Teacher:
Sign:
Date:






Ndzingano

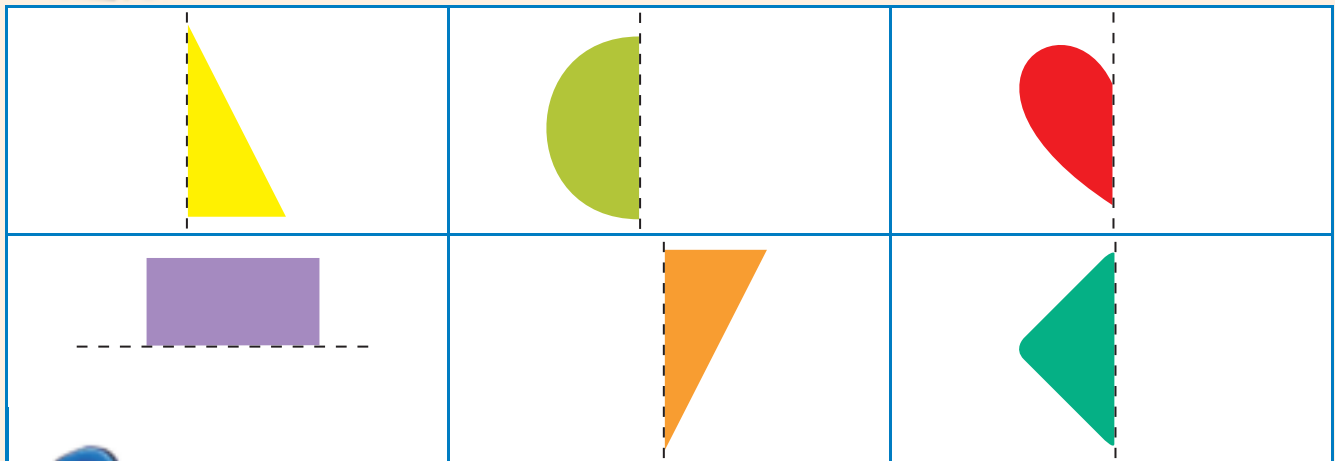
Kotara ya 3




Khalara swiphemu swibirhi swa swivumbeko leswi vumbaka xivumbeko xin'we.




Dirowa hafu yin'wana u tlhela u yi khalara.



Dirowa ntila wo avanyisa swifaniso leswi landzelaka eka swiphemu swibirhi leswaku matlhelo hinkwawo ya languteka hi ndlela leyi fanaka.

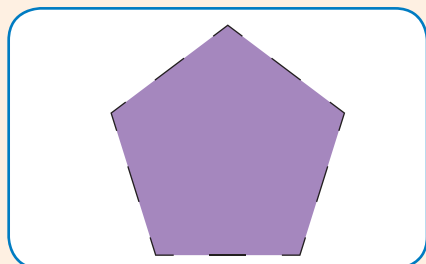

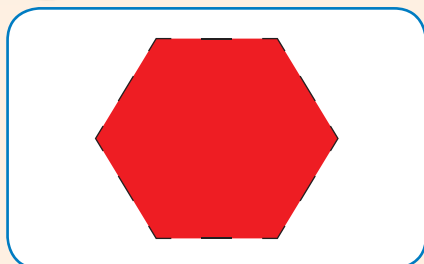




Dirowa hafu yin'wana ya xivumbeko u tirhisa bodo ya giridi ku ku letela.



Dirowa ntila wo avanyisa swifaniso leswi landzelaka eka swiphemu swimbirhi leswaku matlhelo hinkwawo ya languteka hi ndlela leyi fanaka.



Teacher: _____
 Sign: _____
 Date: _____





Tinomboro na xiyimela - nkoka

Kotara ya 3



Tatisa tinomboro leti siyiweke.

10	11				15
9	10				



Tatisa tinomboro leti siyiweke.

←									→
6	7			10	11				15
←									→
15	14				10				6



Tatisa nhlamulo.

$10 + 1 =$	11	$15 - 10 =$	
$10 + 2 =$		$14 - 10 =$	
$10 + 5 =$		$12 - 10 =$	
$10 + 3 =$		$11 - 10 =$	





Khakhuleta nhlayo yin'wana na yin'wana ya muhlovo wo karhi kutani u khalaria xiphemu xa xiphazamiso lexi nga na nomboro leyi faneleke. Tirhisa muhlovo lowu fanaka. Hi ku endlele nhlayo yo sungula.



10 + 1 hi wo tshwuka



10 + 3 hi wa pinki



10 + 5 hi wa wasi



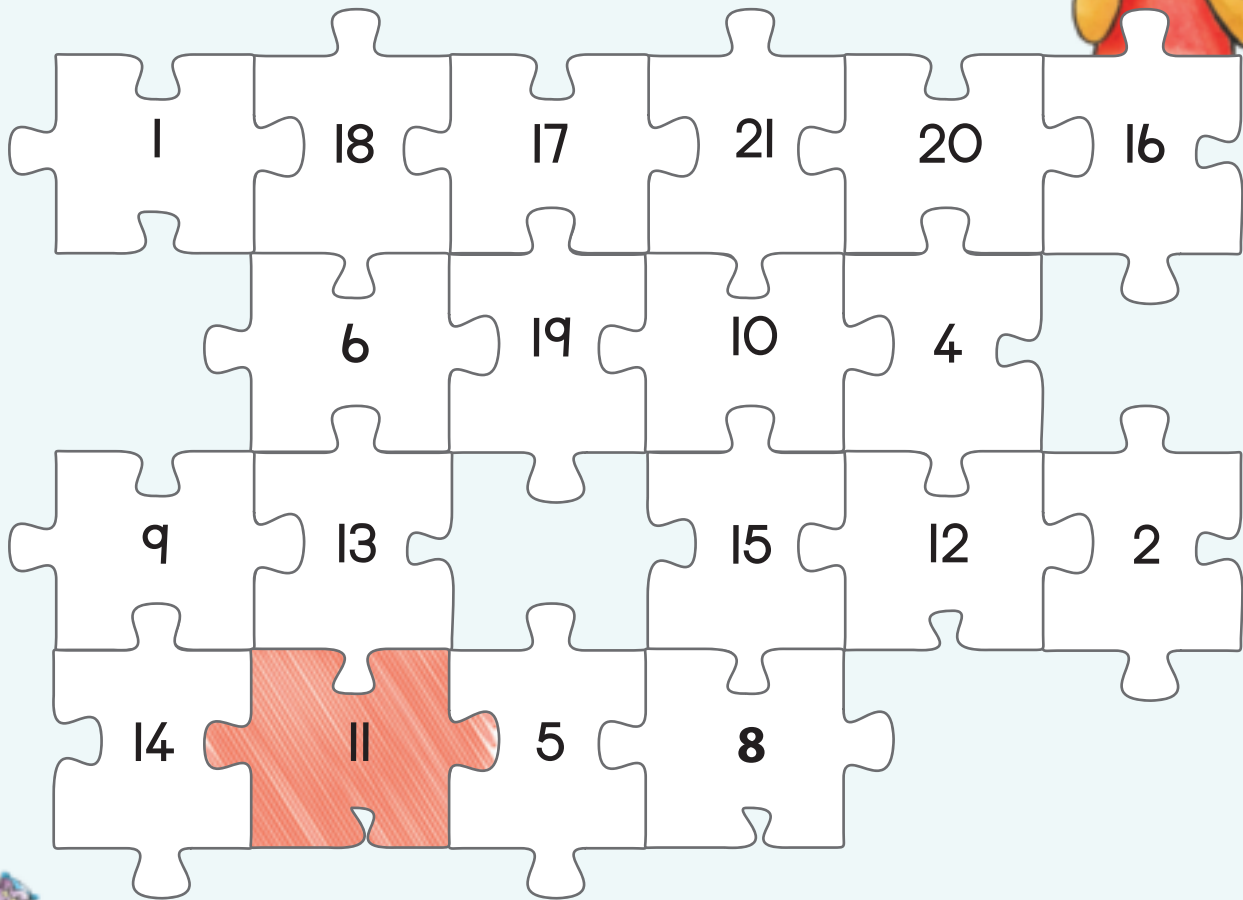
10 + 4 hi wa xitshopana



10 + 0 hi wa rihlaza



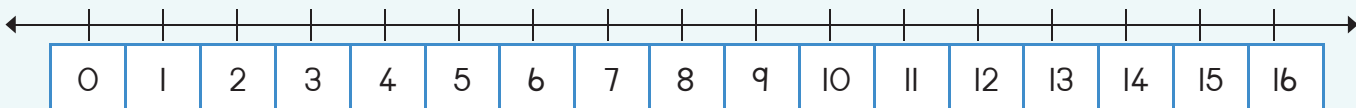
10 + 2 hi wa xilamula



Kombisa khume na mune eka ndzhati wa mintsengo.

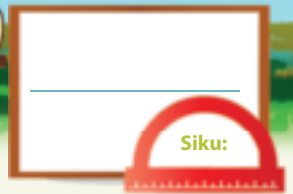


Teacher:
Sign:
Date:



11 12 13 14 15 16 17 18 19 20





Vulehi

Kotara ya 3



Pima vulehi na vuanami bya desika kumbe tafula u tirhisa ku leha ka xandla xa wena. I swandla swa wena swingani leswi ringanaka na vulehi bya tafula?



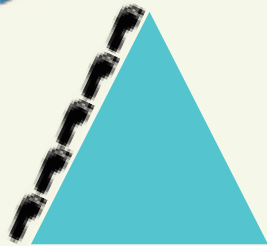
I swandla swingani eka vuanami?

Vulehi byi ringana na _____ wa swandla.

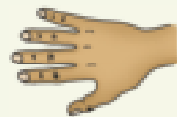
Vuanami byi ringana na _____ wa swandla.



I minkondzo yingani eka tlhelo rin'we?



Tatisa nhlamulo.

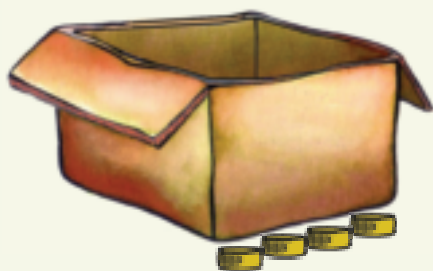


Vulehi i _____ wa swandla.





Hi byihi vulehi na vuanami bya bokisi leri?





Vulehi i _____ wa swipfalo swa mabodhlela hi ku leha.

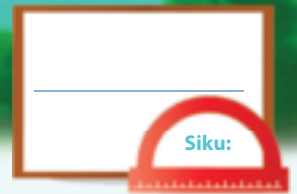
Vuanami i _____ wa swipfalo swa mabodhlela hi ku leha.



Xana tlhelo ri lehile ku ringana swipfalo swa mabodhlela swingani?



Teacher:
Sign:
Date:




Nomboro ya 16

Mpfluxeto:

Titolovete ku tsala vito ra nomboro u tlhela u hetisa patironi.

7

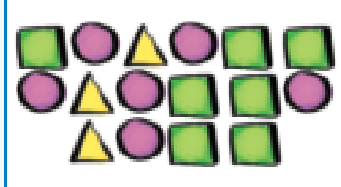
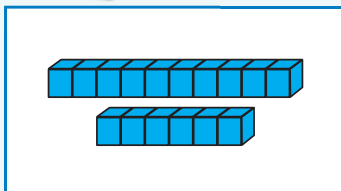
nkombo



Yelanisa swifaniso.

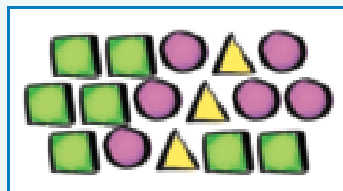



Landzelerisa tinomboro.


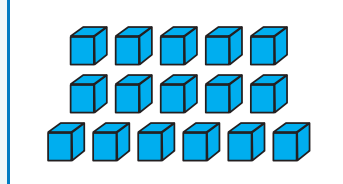


10
6

16



16



10
6

16 16 16 16


khumentsevu

16 16 16 16

khumentsevu



Bana xirhendzevutana eka 16 wa vuhlalu.



Xana ku sale vuhlalu byingani? ____





Dirowa 16 wa minchumu.

Sweswi yi dirowe hi ndlela yo hambana.



Tatisa nomboro leyi siyiweke.

2	3	4
19		21
17		19



Hetisa tafula leri landzelaka. Rixaxa rin'wana na rin'wana ri na xifaniso, nomboro na mfungho wa nomboro leyo.

	16	
		khumentsevu



Hi kuma yini loko hi yisa 16 ehansi hi n'we? _____

Hi kuma yini loko hi engetela n'we eka 16? _____



Hi kuma yini loko hi yisa khumentsevu ehansi hi n'we?	
Hi kuma yini loko hi yisa khumentsevu ehansi hi mbirhi?	
Hi kuma yini loko hi engetela n'we eka khumentsevu?	
Hi kuma yini loko hi engetela mbirhi eka khumentsevu?	



Tatisa tinomboro leti siyiweke.

10	9		7	6		4	3		1



Teacher: _____

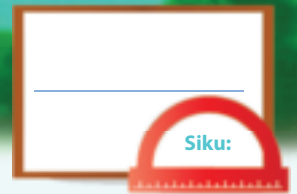
Sign: _____

Date: _____



11 12 13 14 15 16 17 18 19 20






Nomboro ya 17

Mpfluxeto:

Titolovete ku tsala vito ra nomboro u tlhela u hetisa patironi.

8

nhungu



Yelanisa swifaniso.




Landzelerisa tinomboro.

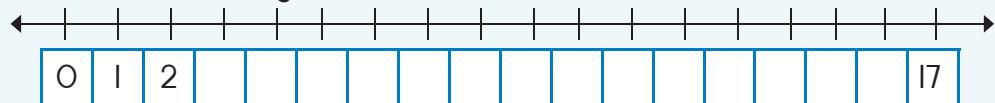
10 7
17

17
10 7

17	17	17	17
khumenkombo			
17	17	17	17
khumenkombo			



Hetisa ndzhati wa mintsengo.





Dirowa 17 wa minchumu.

Sweswi yi dirowe hi ndlela yo hambana.



Hi yihi nomboro leyi landzelaka?

16	17	
24	25	
17	18	



Hetisa tafula leri landzelaka. Rixaxa rin'wana na rin'wana ri na xifaniso, nomboro na mfungho wa nomboro leyo.

	17	
		khumenkombo



Hi kuma yini loko hi yisa khumenkombo ehansi hi n'we?	
Hi kuma yini loko hi yisa khumenkombo ehansi hi mbirhi?	
Hi kuma yini loko hi engetela n'we eka khumenkombo?	
Hi kuma yini loko hi engetela khumenkombo hi mbirhi?	



Tatisa tinomboro leti siyiweke.

Tinomboro leti ti vitaniwa tinhlayo-fadzenga.

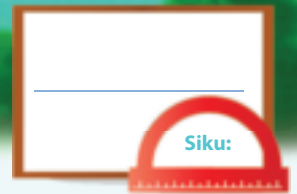
	2		4		6		8		10
	12		14		16		18		20



Teacher:
Sign:
Date:



99



Nomboro ya 18


Kotara ya 4

Mpfluxeto:

Titolovete ku tsala vito ra nomboro u tlhela u hetisa patironi.

9

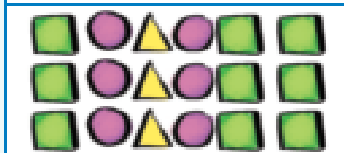
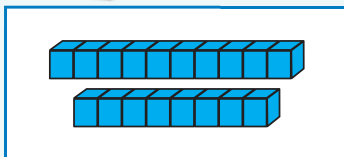
nhungu



Yelanisa swifaniso.

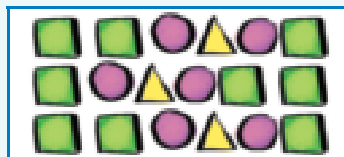


Landzelerisa tinomboro.

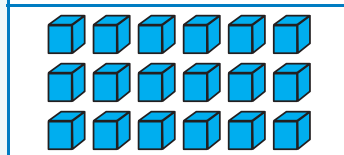


10
8

18



18




10
8

18 18 18 18

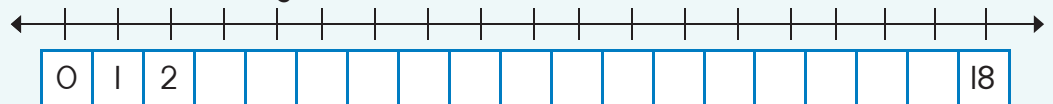
khumenhungu

18 18 18 18

khumenhungu



Hetisa ndzhati wa mintsengo.



0 1 2 3 4 5 6 7 8 9 10



Dirowa 18 wa minchumu.

Sweswi yi dirowe hi ndlela yo hambana.



Hi yihi nomboro leyi taka endzhaku?

8	9	
33	34	
0	1	



Hetisa tafula leri landzelaka. Rixaxa rin'wana na rin'wana ri na xifaniso, nomboro na mfungho wa nomboro leyo.

	18	
		khumenhungu



Hi kuma yini loko hi yisa 18 ehansi hi n'we?

Hi kuma yini loko hi yisa 18 ehansi hi mbirhi?

Hi kuma yini loko hi engetela n'we eka 18?

Hi kuma yini loko hi engetela 18 hi mbirhi?



Tatisa tinomboro leti sijiweke.

1	2		4	5	6	7		9	10
11		13	14	15		17	18		20



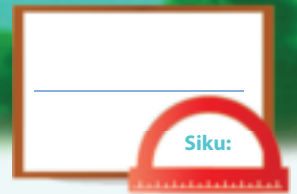
Teacher: _____

Sign: _____

Date: _____



100



Nomboro ya 19


Kotara ya 4

Mpfluxeto:

Titolovete ku tsala vito ra nomboro u tlhela u hetisa patironi.

10

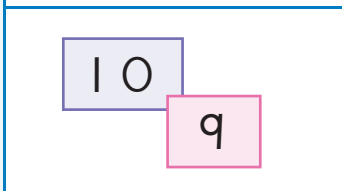
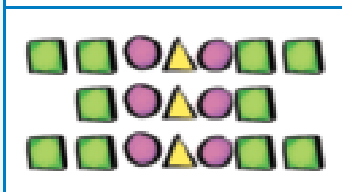
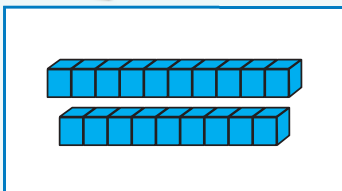
khume



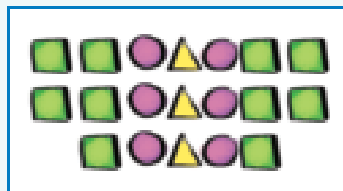
Yelanisa swifaniso.



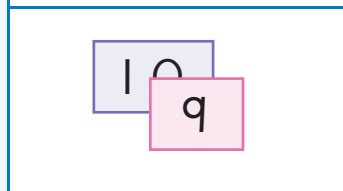
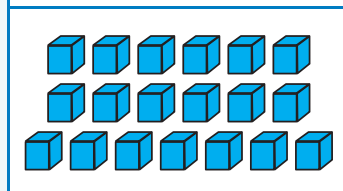
Landzelerisa tinomboro.



19



19



19 19 19 19

khumekaye


19 19 19 19

khumekaye



Bana xirhendzevutana eka 19 wa vuhlalu ntsena.

Xana ku sale vuhlalu bjingani? ___





Sweswi yi dirowe hi ndlela yo hambana.

Sweswi yi dirowe hi ndlela yo hambana.



Hi yihi nomboro leyi taka exikarhi?

14		16
35		37
8		10



Hetisa tafula leri landzelaka. Rixaxa rin'wana na rin'wana ri na xifaniso, nomboro na mfungho wa nomboro leyo.

	19	
		khumekaye



Hi kuma yini loko 19 yi va ehansi hi n'we?

Hi kuma yini loko 19 yi va ehansi hi mbirhi?

Hi kuma yini loko hi engetela 19 hi n'we?

Hi kuma yini loko hi engetela 19 hi mbirhi?



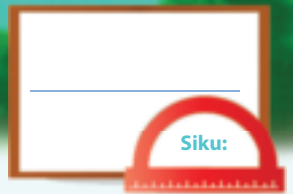
Tatisa tinomboro leti siyiweke.

I		3		5		7		9	
II		13		15		17		19	

Tinomboro leti ti vitaniwa tinhlayo-ndzingano.

Teacher:
Sign:
Date:





Nomboro ya 20

Kotara ya 4



Yelanisa swifaniso.



Landzelerisa tinomboro.

20 20 20 20

makumembirhi

20 20 20 20

makumembirhi



Bana xirhendzevutana eka 20 wa vuhlalu ntsena.

Xana ku sale vuhlalu byingani? _____

Xana ku sale vuhlalu byingani? _____



Hetisa tafula leri landzelaka. Rixaxa rin'wana na rin'wana ri na xifaniso, nomboro na mfungho wa nomboro leyo.

	20	makumembirhi
		makumembirhi
20		



Hi kuma yini loko hi yisa 20 ehansi hi n'we? _____

Hi kuma yini loko hi engetela n'we eka 20? _____





Hlanganisa
nomboro na
vito ra yona.

- 0
- 1
- 2
- 3
- 4
- 5
- 6
- 7
- 8
- 9
- 10
- 11
- 12
- 13
- 14

- mune
- nkombo
- kaye
- nharhu
- khumen'we
- khumembirhi
- n'we
- mbirhi
- nhungu
- ziro
- ntlhanu
- ntsevu
- khumenharhu
- khume
- khumemune



Tatisa tinomboro leti siyiweke.

Emahlweni		Endzhaku
16	17	
	12	
	14	
	9	10
	6	




Tirhisa rito ra yitsongo na yikulu
ku hetisa leswi landzelaka.

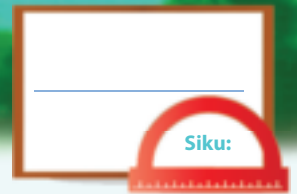
35 i _____ eka 38

79 i _____ eka 65



Teacher:
Sign:
Date:





Ku hlanganisa

Kotara ya 4



Bana xirhendzevutana eka nomboro leyikulu eka buloko yin'wana na yin'wana.

3	5	15	11	20	8
8	7	12	6	17	18



Hlanganisa leswi landzelaka. Rhang a hi ku tsala nomboro leyikulu.

$1 + 1 + 5 =$	$5 + 1 + 1 =$
$6 + 2 + 10 =$	
$3 + 4 + 2 =$	
$2 + 6 + 3 =$	
$1 + 10 + 2 =$	




Hlanganisa tibuloko leti landzelaka.

 $10 + 2 + 3 = 15$ $10 + 5 = 15$	 	
--	----------	----------



Tsala xivulwa xa tinomboro xa leswi landzelaka:

------	------	------





Tsala xivulwa xa tinomboro xa xin'wana na xin'wana xa leswi landzelaka:

 $8 + 4 = 12$ $10 + 2 = 12$	 	



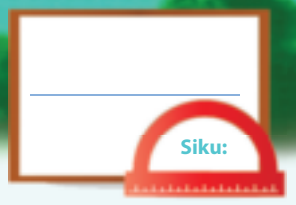
Tatisa tinomboro leti siyiweke.

	+	14	=	17
9	+		=	20
12	+	8	=	
15	+		=	20
	+	6	=	13
14	+	3	=	0



Teacher: _____
 Sign: _____
 Date: _____





Ku susa

Kotara ya 4



Khakhuleta.

17		<input type="text"/>
19		<input type="text"/>
14		<input type="text"/>
12		<input type="text"/>



Tsala xivulwa xa tinomboro.

<input type="text"/>					



Tsala xivulwa xa tinomboro.

<input type="text"/>					



Khakhuleta.

18		<input type="text"/>
7		<input type="text"/>
15		<input type="text"/>
9		<input type="text"/>



Hetisa tinhlayo hi ku tirhisa swifaniso.

	$16 - \square = \square$
	$\square = 11$

	$10 + \square = \square$
--	--------------------------





Susa tibuloko.

$(10 + 3) - 2 =$	<input type="text"/>	<input type="text"/>
$13 - 2 =$	<input type="text"/>	<input type="text"/>



Khakhuleta leswi landzelaka:

$11 + 7 = \square$	$11 + 7 = \square$
$11 + 4 + \square = \square$	$11 + 5 + \square = \square$
$19 - 7 = \square$	$17 - 9 = \square$
$19 - (5 + \square) = \square$	$17 - (7 + \square) = \square$



Hetisa leswi landzelaka:

5 kambirhi i	<input type="text"/>	3 kambirhi i	<input type="text"/>	4 kambirhi i	<input type="text"/>
7 kambirhi i	<input type="text"/>	2 kambirhi i	<input type="text"/>	8 kambirhi i	<input type="text"/>
10 kambirhi i	<input type="text"/>	9 kambirhi i	<input type="text"/>	1 kambirhi i	<input type="text"/>



Hlamula leswi landzelaka:

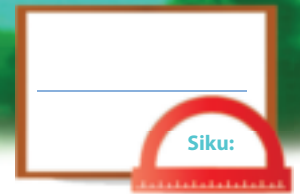
$9 + 9 - 1 =$	<input type="text"/>	kumbe	Mbirhahata $9 - 1 =$	<input type="text"/>
<input type="text"/>	<input type="text"/>	kumbe	Mbirhahata $5 - 1 =$	<input type="text"/>
$4 + 4 - 1 =$	<input type="text"/>	kumbe		<input type="text"/>

Teacher:

Sign:

Date:





Ku hlanganisa no susa



Hlayela leswaku i swimanga swingani leswi orheleke masana. Nivusiku, swin'wana swi etlela endzhaku ka khumbi. Kuma leswaku i swingani leswi etlelaka endzhaku ka khumbi kutani u tsala nhlayo ya swona.

$$3 + \square = 8$$

$$4 + \square = \square$$


Oloxa leswi landzelaka. U nga dirowa xifaniso xo kota ku ku pfuna.



Lerato u na 4 wa malamula. Peter u n'wi nyikile 13 wa malamula. Xana u na malamula mangani sweswi?

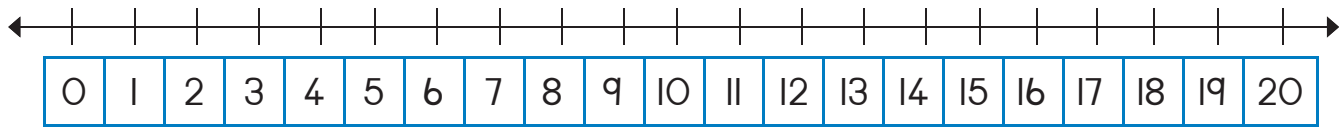
Mandla u na 5 wa tikhirayoni. Anne u na 8 wa tikhirayoni. Xana i mani loyi a nga na tikhirayoni letitsongo?



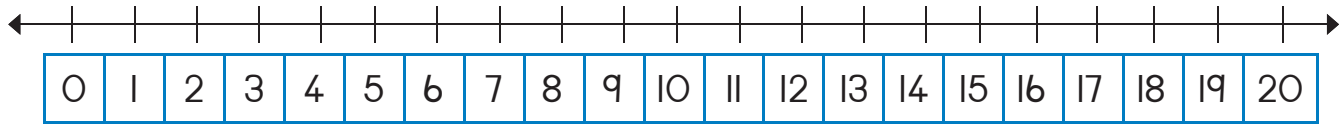


Tirhisa ndzhati wa mintsengo ku ololoxa leswi landzelaka:

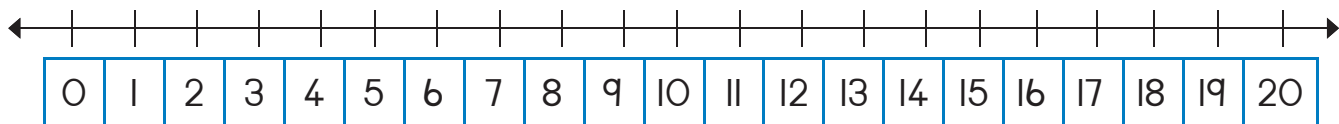
Thandi u na 6 wa timabulu ta rihlaza na 9 wa timabulu ta wasi.
Xana u na timabulu tingani?



Lerato u na 16 wa timabulu. Nhungu wa tona i ta rihlaza kasi hinkwato leti saleke i ta wasi. Xana Lerato u na timabulu tingani ta wasi?



Thandi u na 19 wa mabanana. Themba u na 10 wa mabanana.
Xana mabanana ya Thandi ya tlula ya Themba hi mangani?



Hi tihi tinomboro leti nga exikarhi ka 25 na 30?

Bana xirhendzevutana eka nomboro leyikulu eka 76 hi 1.

74 75 76 77 78

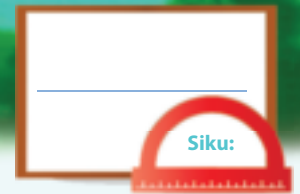
Bana xirhendzevutana eka nomboro leyikulu eka 76 hi 2.

74 75 76 77 78



Teacher:
Sign:
Date:





Tinomboro to landzelelana

Kotara ya 4

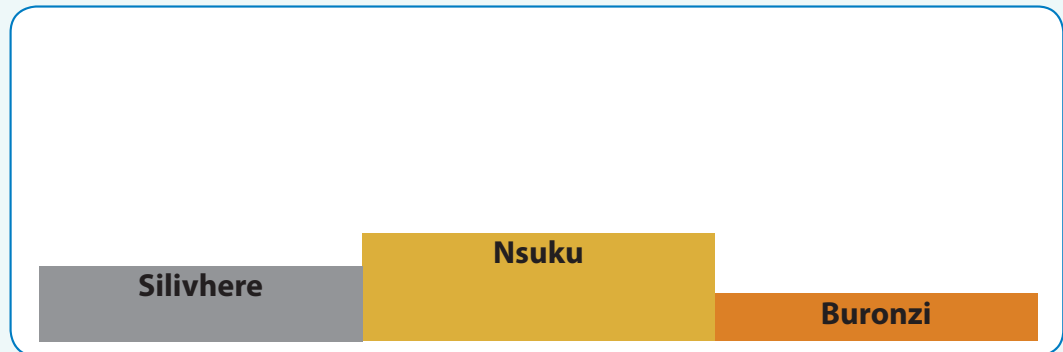


I mani loyi a nga kuma xiyimo xo sungula eka mphikizano?
Tsala xiyimo ehansi ka vona.

Sipho	Lerato	John	Peter	Ann
<input type="text"/>	2	3	<input type="text"/>	<input type="text"/>



Va dirowe va ri exitejini.



I mani loyi a kumeke nsuku? _____ I mani loyi a kumeke silivhere? _____



Dirowa vuhlalu hi ndlela leyi:


- Vuhlalu byo sungula i bya wasi.
- Vuhlalu bya vumbirhi i byo tshwuka.
- Vuhlalu bya vunharhu i bya rihlaza.
- Vuhlalu bya vumune i bya xitshopana.
- Vuhlalu bya vuntlhanu i bya wasi.
- Vuhlalu bya vuntsevu i byo tshwuka.
- Vuhlalu bya vunkombo i bya rihlaza.
- Vuhlalu bya vunhungu i bya xitshopana.
- Vuhlalu bya vukaye i bya wasi.
- Vuhlalu bya vukhume i byo tshwuka.

Vuhlalu bya mina.





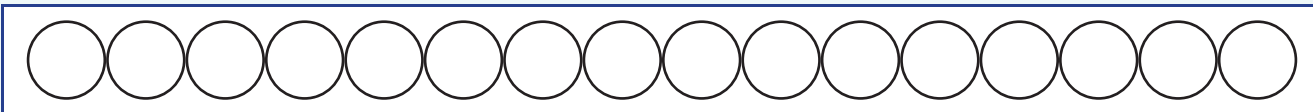
Languta ndzandzelelano wa swivumbeko.
Kopunula swivumbeko eka tindhawu leti faneleke etafuleni.
Hi ku endlele xo sungula.



I xivumbeko xihilexi nga:			
Xa vumune		Xa vunkombo	
Xa vuntlhanu		Xa vukaye	
Xa vumbirhi		Xo hetelela	
Xa vunharhu		Xa vuntsevu	



Endla leswi landzelaka:



Khalara xirhendzevutana xo sungula hi muhlovo wo tshwuka.



Khalara xirhendzevutana xa vuntlhanu hi muhlovo wa xitshopana.



Khalara xirhendzevutana xa vunhungu hi muhlovo wa wasi.



Dirowa ndzhati wa mintsengo ya 10 ku fika eka 20.
Bana swirhendzevutana eka nomboro ya vunharhu na nomboro ya vunhungu.

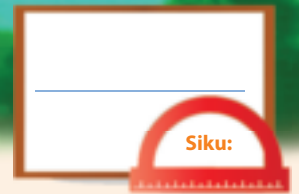


Teacher: _____

Sign: _____

Date: _____

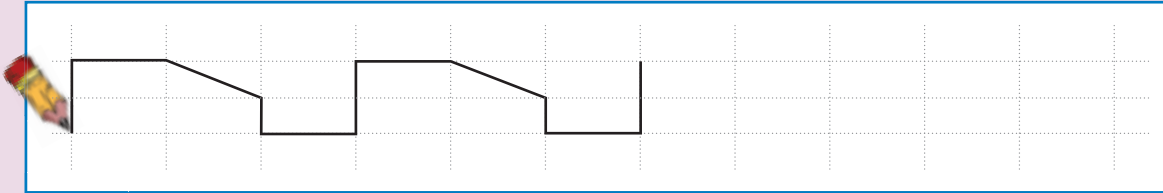




Minchumu na swivumbeko

Mpfuxeto:





Mpfuxeto: Hetisa patironi.



Kotara ya 4



Lava swifaniso swimbirhi swa bolo na swifaniso swimbirhi swa bokisi eka phephahungu kumbe magazini kutani u swi namarheta laha hansi.



Dirowa xirhendzevutana xa wasi eka minchumu leyi r hetaka.
Dirowa xikwere xo tshwuka eka minchumu leyi khungulukaka.





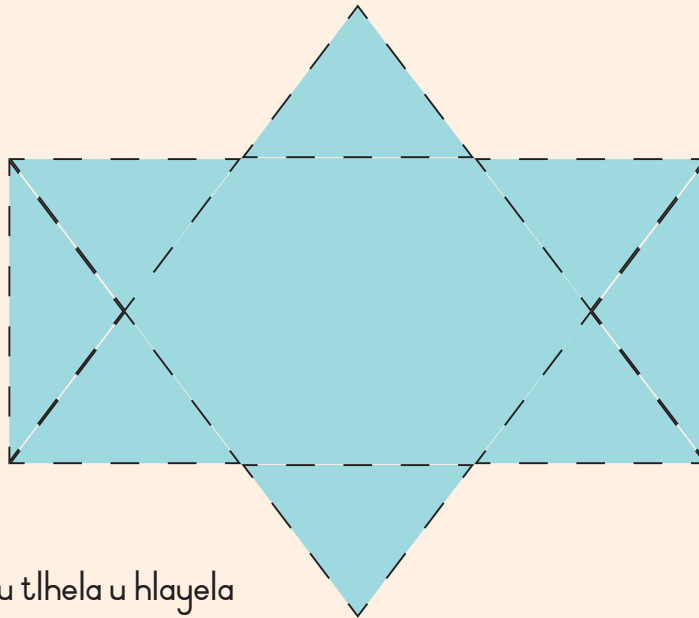
Landzelerisa rito kutani u dirowa nchumu wa kona.

bokisi

bolo



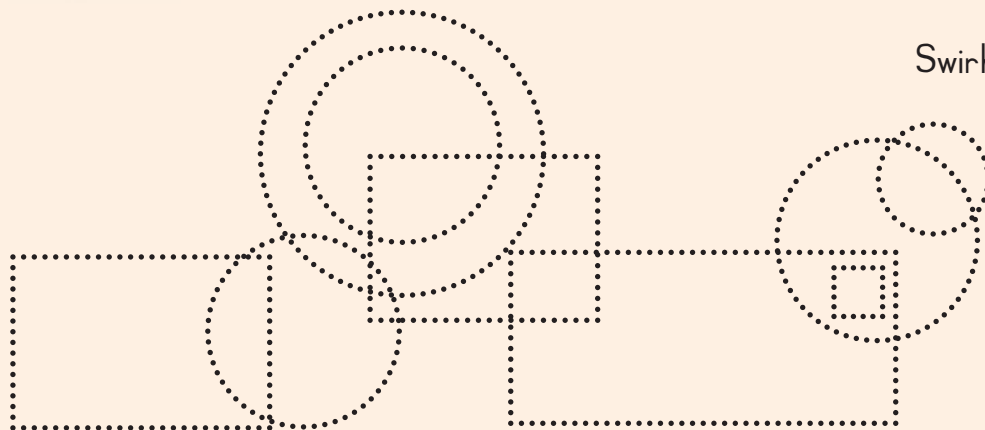
Hlayela tijinlanharhu hinkwato kutani u tsala nhlayo ya tona.



Nhlamulo:



Landzelerisa u tlhela u hlayela swivumbeko.



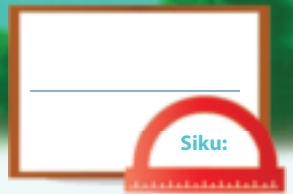
Swirhendzevutana

Swikwere



Teacher:
Sign:
Date:





Mali

Kotara ya 4



Hi swihi
swingwece
leswi u nga swi
pananisaka?




Gwajula swingwece na mali ya maphepha eka buloko yin'wana na yin'wana leyi nga ta ku nyika mintsengo leyi landzelaka.

R10			<input type="checkbox"/>	
R20				
R15				





Susa R2.

		
$R12 - R2 = R10$	<input type="text"/>	<input type="text"/>




Susa R5.

		
$R15 - R5 = R10$	<input type="text"/>	<input type="text"/>



I mihlangano yingani yo hambana leyi u nga yi dirowaka ya R20?
Hi ku endlele wo sungula.





Bana xirhendzevutana eka xingwece lexi u nga xavaka swo tala hi xona eka ntila wun'wana na wun'wana

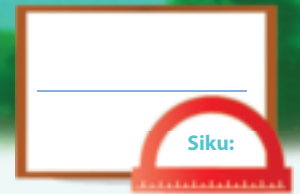


Teacher: _____

Sign: _____

Date: _____



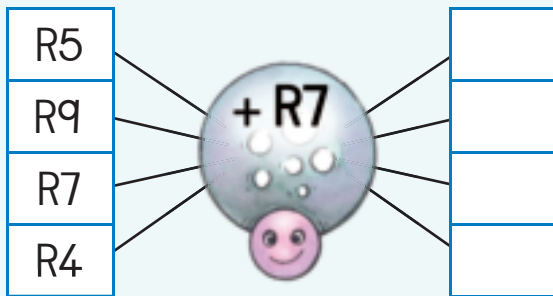


Mali yin'wana

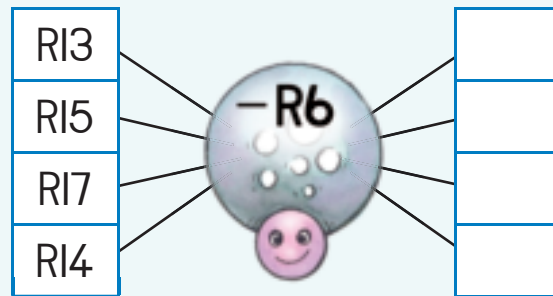
Kotara ya 4



Khakhuleta.



Khakhuleta.



Tatisa nhlamulo.

$R10 + R1 =$	
$R10 + R2 =$	
$R10 + R3 =$	
$R10 + R4 =$	
$R10 + R5 =$	



Hi yihleleki nga tala?
Bana xirhendzevutana eka nhlamulo ya wena.

5c kumbe R5
20c kumbe R20
R1 kumbe 50c
R2 kumbe R1
20c kumbe 50c



Hlanganisa tinomboro leti hingakanyaka na tinomboro leti landzelelanaka ku ya ehansi kutani u tatisa tinhlamulo.

R2	R4	R9	=
R7	R3	R5	=
R6	R8	R1	=
=	=	=	=





Languta xikombiso endzhaku u hetisa leswi saleke.

R17	=	R10	+	R7
R16	=		+	
R15	=		+	
R14	=		+	
R13	=		+	
R12	=		+	



Jimisi u xavile xinkwa hi R8. U xi hakelerile hi mali ya phepha ya RIO. Xana u kumile cinci ya mali muni?

Hi xihhi xivutiso?

Tsala tinomboro.

Tsala nhlayo u tlhela u yi khakhuleta.



Manana wa Busi u xavile xigqhoko hi R17. U hakerile hi mali ya phepha ya tiRIO timbirhi. Xana u kumile cinci ya mali muni?

Hi xihhi xivutiso?

Tsala tinomboro.

Tsala nhlayo u tlhela u yi khakhuleta.




Siku ra Judy ra ku velekiwa a ri ri hi Sonto. U amukerile R5 yo huma eka sesi wa yena, R2 yo huma eka buti wa yena na RIO yo huma eka khazi wa yena. Xana u kumile mali muni loko yi hlanganile hinkwayo?

Hi xihhi xivutiso?

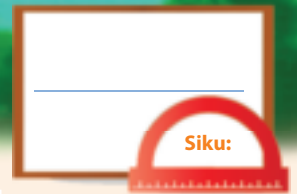
Tsala tinomboro.

Tsala nhlayo u tlhela u yi khakhuleta.



Teacher:
Sign:
Date:





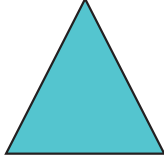





Swivumbeko swa 2 wa matlhelo

Kotara ya 4



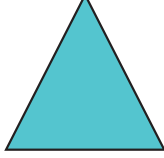





Gwajula xivumbeko lexitsongo eka buloko yin'wana a yin'wana.

					
<input type="text"/>	<input type="text"/>	<input type="text"/>	<input type="text"/>	<input type="text"/>	<input type="text"/>



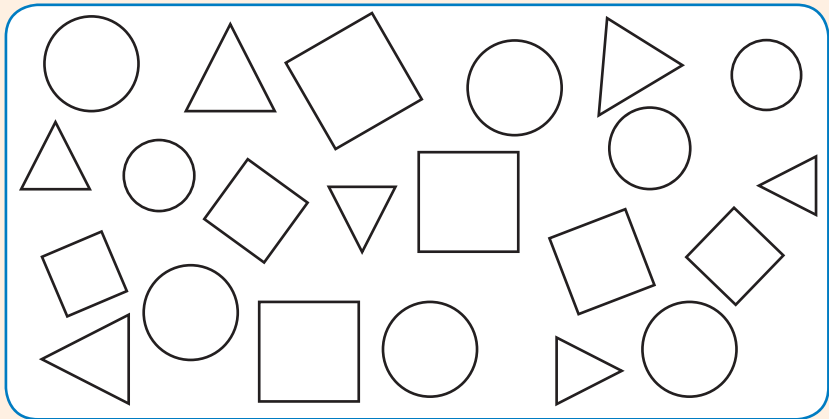
Gwajula xivumbeko lexikulu eka buloko yin'wana a yin'wana.

					
<input type="text"/>	<input type="text"/>	<input type="text"/>	<input type="text"/>	<input type="text"/>	<input type="text"/>



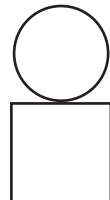


Khalara hinkwaswo:

- swikwere hi muhlovo wa wasi
- tiyinhlanharhu hi muhlovo wo tshwuka
- swirhendzevutana hi muhlovo wa rihlaza








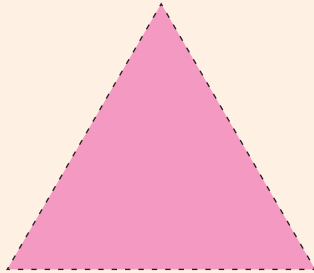
Endla xifaniso hi ku tirhisa swivumbeko. Hi sungule xifaniso hi 2 wa swivumbeko.

		
---	---	---



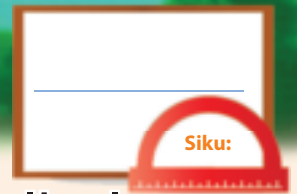


Dirowa swivumbeko endzeni ka giridi.
Tirhisa swikwere leswitsongo ku ku pfuna.



Teacher: _____
Sign: _____
Date: _____

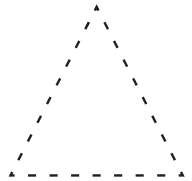




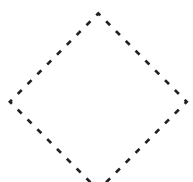




Swivumbeko swa 2 wa matlhelo – matlhelo yo kongoma thwixi na matlhelo ya xirhendzevutana



Lanzelerisa swivumbeko leswi landzelaka.

 yinhlanharhu	 xirhendzevutana	 xikwere
 xirhendzevutana	 yinhlanharhu	 xikwere



Gwajula ku hlamusela loko xivumbeko xi ri na matlhelo yo kongoma thwixi kumbe matlhelo ya xirhendzevutana.

 matlhelo ya xirhendzevutana <input type="checkbox"/> matlhelo yo kongoma thwixi <input type="checkbox"/>	 matlhelo ya xirhendzevutana <input type="checkbox"/> matlhelo yo kongoma thwixi <input type="checkbox"/>	 matlhelo ya xirhendzevutana <input type="checkbox"/> matlhelo yo kongoma thwixi <input type="checkbox"/>
--	--	--



Dirowa xivumbeko lexi nga na:

matlhelo yo kongoma thwixi	matlhelo ya xirhendzevutana
----------------------------	-----------------------------



Hlayela nhlayo ya swirhendzevutana, swikwere na tiyinlanharhu.

Xirhendzevutana

Xikwere

Yinlanharhu



Lava xifaniso eka magazini kumbe pephahungu lexi nga na:

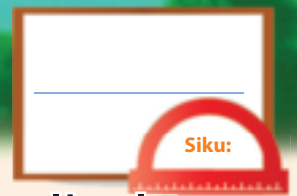
matlhelo ya xirhendzevutana

matlhelo yo kongoma thwixi



Teacher: _____
 Sign: _____
 Date: _____











Swivumbeko swin'wana swa 2 wa matlhelo




Nyika mavito ya swivumbeko leswi landzelaka:

Kotara ya 4

		
<input type="text"/>	<input type="text"/>	<input type="text"/>
		
<input type="text"/>	<input type="text"/>	<input type="text"/>

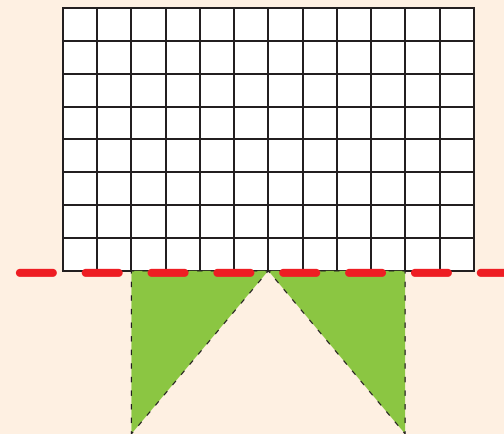
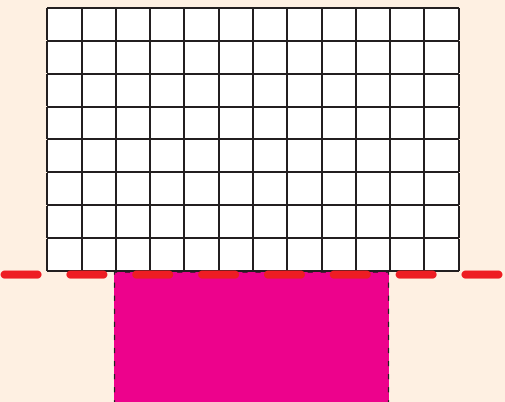
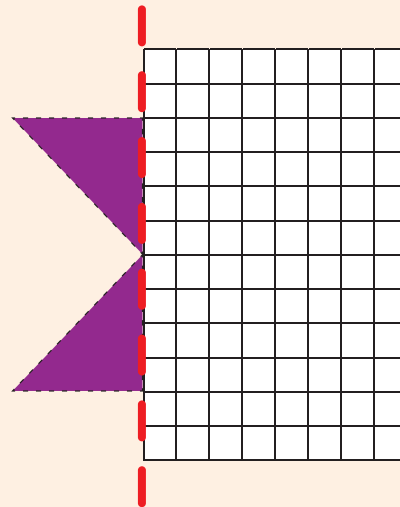
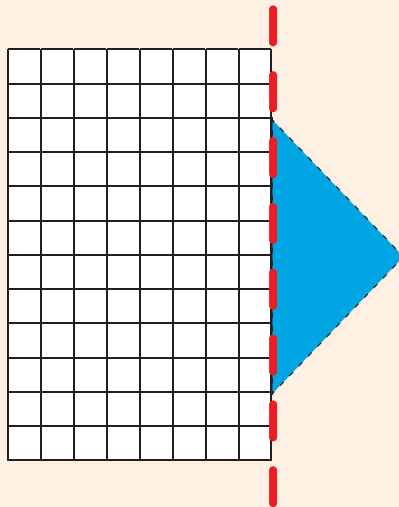
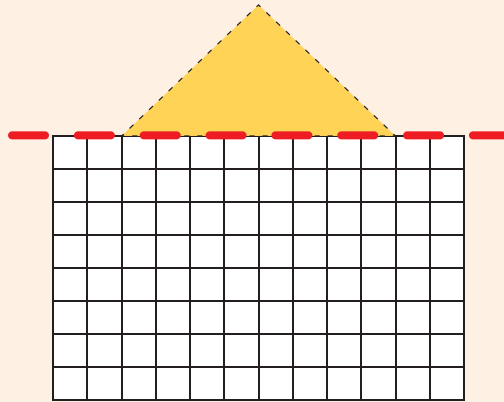
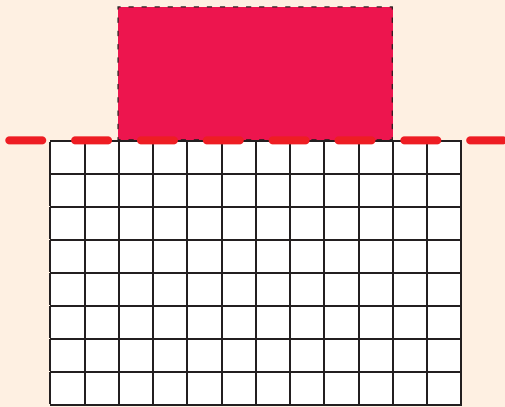


Dirowa xifaniso u tirhisa swirhendzevutana, tjiinlanharhu na swikwere ntsena.





Dirowa hafu yin'wana ya xivumbeko xin'wana na xin'wana.
Tirhisa swikwere leswitsongo ku ku pfuna.

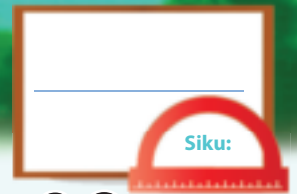


Hinkwaswo swi na matlhelo yo kongoma thwixi ya xirhendzevutana .



Teacher: _____
Sign: _____
Date: _____





Mintlawa ya vuntlhanu ku fika eka 20



Dirowa swirhendzevutana ku endla mintlawa ya vuntlhanu. Xana u na mintlawa yingani ya vuntlhanu?

Kotara ya 4


ntlawa wa 5



wa mintlawa ya 5



wa mintlawa ya 5



wa mintlawa ya 5



Hlayela nhlayo ya tintiho. Tsala nhlamulo ya wena.



$5 + 5 + 5 =$



$5 + 5 + 5 + 5 =$



$5 + 5 + 5 + 5 + 5 =$



$5 + 5 + 5 + 5 + 5 + 5 =$





Tsala xivulwa xa tinomboro xa xin'wana na xin'wana xa leswi landzelaka:

[]

[]

[]

[]



Hlamula swivutiso leswi landzelaka.



Xana u vona swingwece swa 5c swingani?

Swi tsale tanihi xivulwa xa tinomboro.

[]



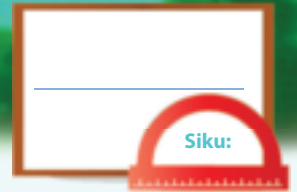
Tatisa tinomboro leti sijiweke.

1	2	3	4		6	7	8	9	
11	12	13	14		16	17	18	19	



Teacher: _____
Sign: _____
Date: _____





Vuntlhanu – ku hlenganisa ko vuyelela ku fika eka 20



Endla mintlawa ya vuntlhanu u tlhela u tsala xivulwa xa tinomboro.



Dirowa mintlawa ya swivumbeko ku kombisa swivulwa swa tinomboro.


$$5 + 5 + 5 = \square$$

$$5 + 5 + 5 + 5 = \square$$







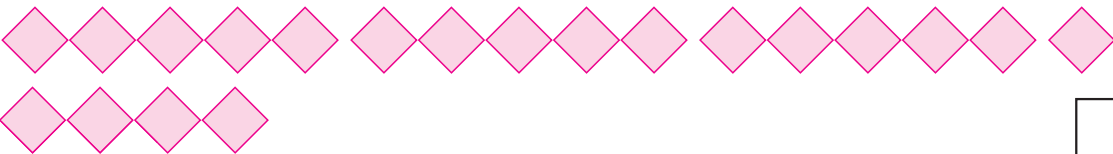
Tsala xivulwa xa tinomboro xa xin'wana na xin'wana xa leswi landzelaka:



 $5 + 5 = \square$









U hlayele tinomboro ta vuntlhanu kangani? _____

1	2	3	4	5	6	7	8	9	10
11	12	13	14	15	16	17	18	19	20



Ku na swandla swinharhu efasitereni. Xana ku na tintiho tingani efasitereni? Dirowa xifaniso u tlhela u tsala xivulwa xa tinomboro.

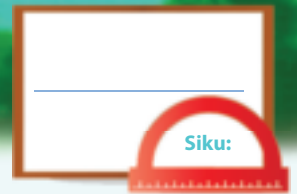


Teacher: _____

Sign: _____

Date: _____





Ku ava ku fika eka 20

Kotara ya 4



Ava malekere exikarhi ka vanghana va ntlhanu.
Xana un'wana na un'wana u ta kuma malekere mangani?

Munghana un'wana na un'wana u ta kuma malekere ya

Munghana un'wana na un'wana u ta kuma malekere ya

Munghana un'wana na un'wana u ta kuma malekere ya

Munghana un'wana na un'wana u ta kuma malekere ya

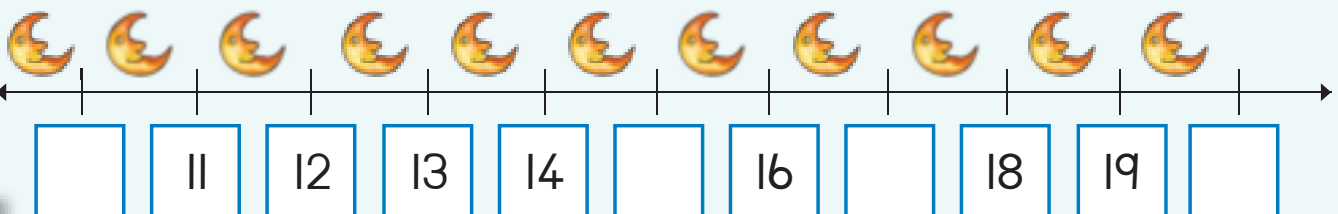


Khalara miandziso ya ntlhanu.

1	2	3	4	5	6	7	8	9	10
11	12	13	14	15	16	17	18	19	20



Tatisa tinomboro leti siyiweke.





Dirowa xifaniso ku kombisa leswi landzelaka.
Xana ku na swihlayelo leswi saleke?

Ava 10 wa swihlayelo exikarhi ka vana va ntlhanu.

Ku na wa swihlayelo leswi saleke.

Ava 6 wa swihlayelo exikarhi ka vana va ntlhanu.

Ku na wa swihlayelo leswi saleke.

Ava 11 wa swihlayelo exikarhi ka vana va ntlhanu.

Ku na wa swihlayelo leswi saleke.

Ava 16 wa swihlayelo exikarhi ka vana va ntlhanu.

Ku na wa swihlayelo leswi saleke.



Tsala xivulwa xa tinomboro xa xin'wana na xin'wana xa leswi landzelaka:



$5 + 5 =$



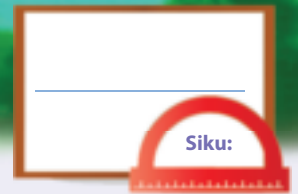






Teacher: _____
Sign: _____
Date: _____





Tipatironi ta tinomboro – vuntlhanu ku fika eka 100



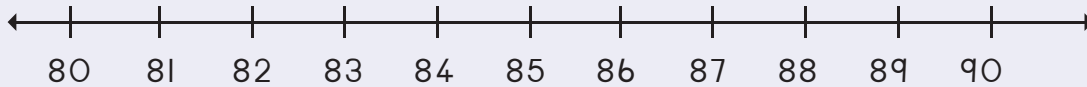
Hetisa patironi hi ku khalara minyandzisiwa ya ntlhanu.

71	72	73	74	75	76	77	78	79	80
81	82	83	84	85	86	87	88	89	90
91	92	93	94	95	96	97	98	99	100

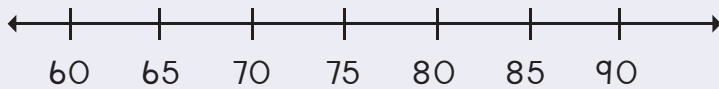


Dirowa tihupu ku kombisa leswi landzelaka:

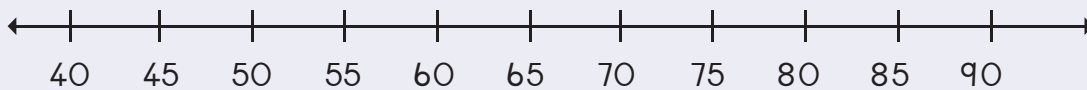
86, 88, 90



70, 75, 80



55, 60, 65, 70

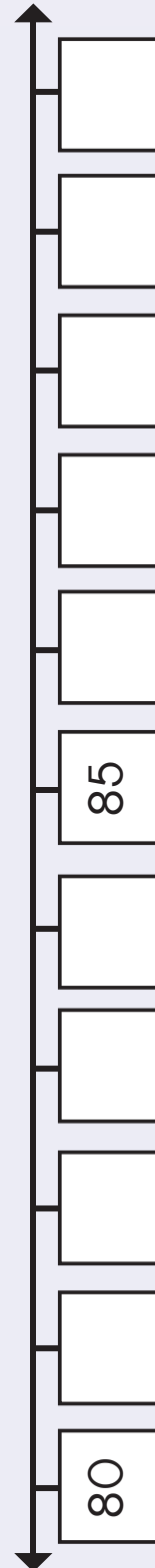
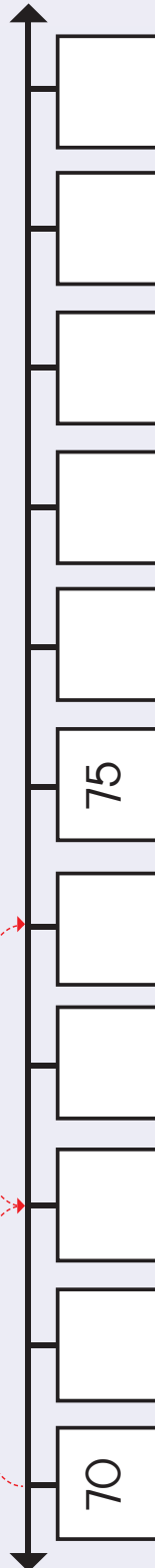
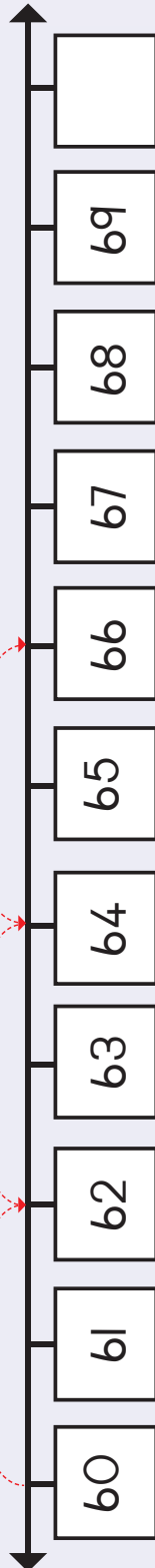


Tirhisa wachi ku kombisa ku hlayela
timinete hi vuntlhanu.





Veka tinomboro to huma eka Xitsemiwa xa 2 eka tindhawu leti ku siyiweke tinomboro eka mindzhati ya mintsengo. Tlhela u hetisa na tihupu.



Teacher:
Sign:
Date:





Siku: _____

Xiyimo na tlhelo

Kotara ya 4



Yelanisa emahlweni na le ndzhaku ka xiharhi xin'wana na xin'wana.

Emahlweni




Endzhaku



Bana xirhendzevutana eka nseve lowu yelanaka na nseve lowu nga dzwihatiwa.

↑	→	←	↑	↓
↓	↑	↓	→	←
←	→	←	↑	↓
→	↑	←	↓	→






Khalara tlhelo leri faneleke.



Tlhelo ra le henhla

Tlhelo ra le matlhelo


Tlhelo ra le mahlweni



Tlhelo ra le henhla

Tlhelo ra le matlhelo

Tlhelo ra le mahlweni



Tlhelo ra le ndzhaku

Tlhelo ra le matlhelo

Tlhelo ra le mahlweni




Xana ximanga xi le kwihi?
Khalara nhlamulo leyi faneleke.



Endzhaku

Emahlweni

Ekusuhi na



Endzhaku

Emahlweni

Ekusuhi na




Endzhaku

Emahlweni

Ekusuhi na

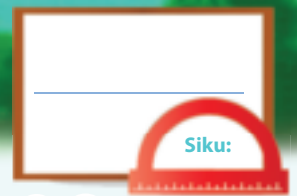


Languta swifaniso
swa mirhi.
Khalara tlhelo ra le
henhla.



Teacher: _____
Sign: _____
Date: _____





Mintlawa ya vumbirhi ku fika eka 20

Kotara ya 4



Endla mintlawa ya vumbirhi. Tsala leswaku i mintlawa yingani leji nga kona.

	<input type="text"/>
--	----------------------

	<input type="text"/>
--	----------------------

	<input type="text"/>
--	----------------------

	<input type="text"/>
--	----------------------

	<input type="text"/>
--	----------------------

	<input type="text"/>
--	----------------------



Endla mintlawa ya vumbirhi. Dirowa mintlawa.

	<input type="text"/>
	<input type="text"/>





Hlamula swivutiso leswi landzelaka.




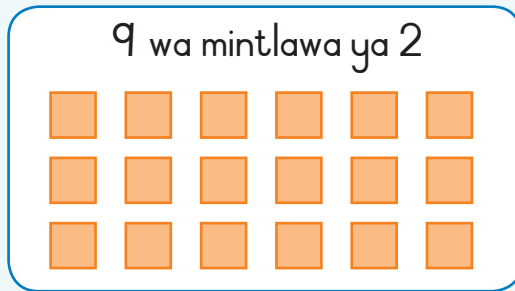
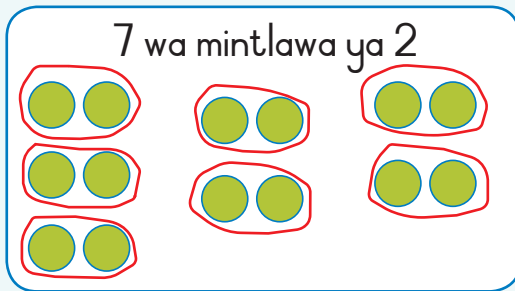
Ku na swinyenyana swingani?

I mintlawa yingani ya swimbirhi leyi u nga kotaka ku yi endla?


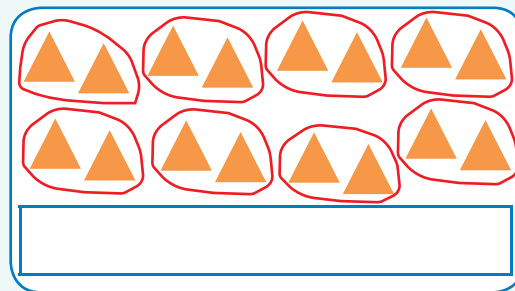
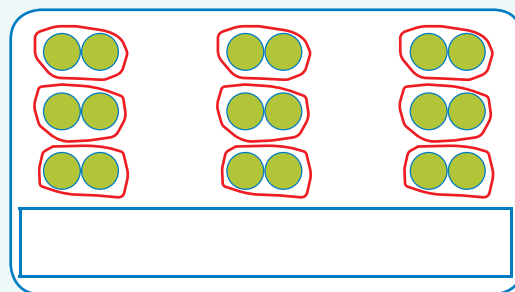
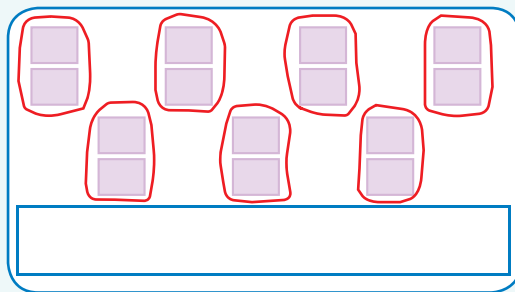
Tsala xivulwa xa tinomoro.

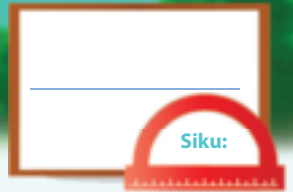


Dirowa swirhendzevutana ku endla leswi landzelaka.



Tsala xivulwa xa tinomoro xa leswi landzelaka.





Vumbirhi – ku hlanganisa ko vuyelela ku fika eka 20


Kotara ya 4




Xana ku na milenge yingani?

Tsala xivulwa xa tinomboro xa milenge yin'wana na yin'wana.





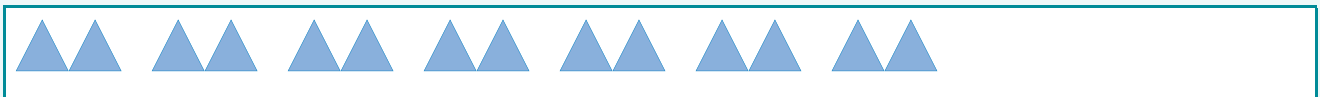






Dirowa swivumbeko swa leswi landzelaka:

$$2 + 2 + 2 + 2 + 2 + 2 + 2 = 14$$



$$2 + 2 + 2 + 2 + 2 + 2 + 2 + 2 = \square$$

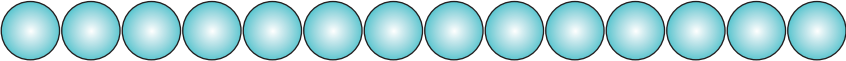
$$2 + 2 + 2 + 2 + 2 + 2 + 2 + 2 + 2 = \square$$

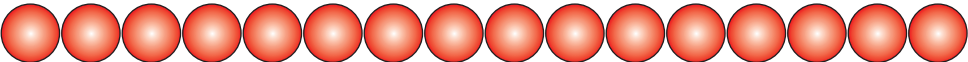
$$2 + 2 + 2 + 2 + 2 + 2 + 2 + 2 + 2 + 2 = \square$$

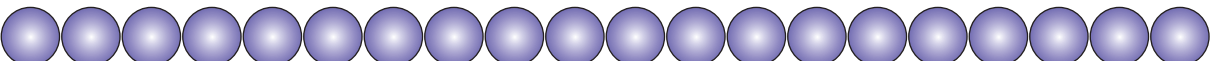





Tsala xivulwa xa tinomboro xa leswi landzelaka:


 $2 + 2 + 2 + 2 + 2 + 2 + 2 =$









Khalara minyandzisiwa ya mbirhi.

1	2	3	4	5	6	7	8	9	10
11	12	13	14	15	16	17	18	19	20



Ndzi na 6 wa maphakete lama nga na 2 wa malekere eka rin'wana na rin'wana. Xana ndzi na malekere mangani? Dirowa xifaniso u tlhela u tsala xivulwa xa tinomboro.

Ndzi na wa malekere.

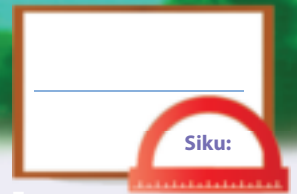


Teacher: _____

Sign: _____

Date: _____





Patironi ya tinomboro – vumbirhi ku fika eka 100



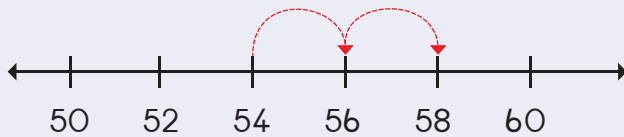
Hetisa patironi hi ku khalara tinomboro.

61	62	63	64	65	66	67	68	69	70
71	72	73	74	75	76	77	78	79	80
81	82	83	84	85	86	87	88	89	90
91	92	93	94	95	96	97	98	99	100

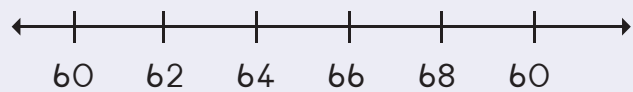


Dirowa tihupu ku kombisa leswi landzelaka:

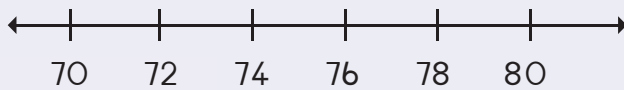
54, 56, 58



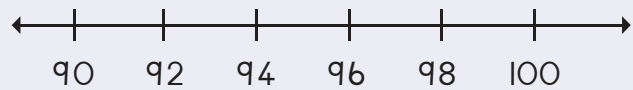
64, 66, 68



74, 76, 78



94, 96, 98

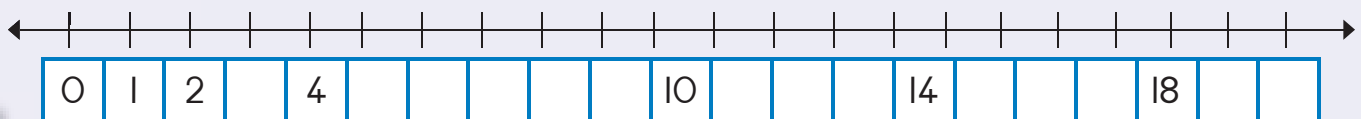


Tatisa tinomboro leti siyiweke. Khalara patironi: 2, 4...

I		3				7			10
II						17			20



Hetisa ndzhati wa mintsengo.





Siku: _____

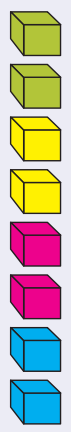
Tipatironi ta tinomboro – vumbirhi ku fika eka 100



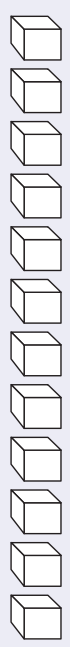
Xana u kota ku vona patironi ya swimbirhi?



Khalara tibuloko ku kombisa mintlawa ya vumbirhi. Hlayela leswaku i mintlawa yingani leyi nga kona.

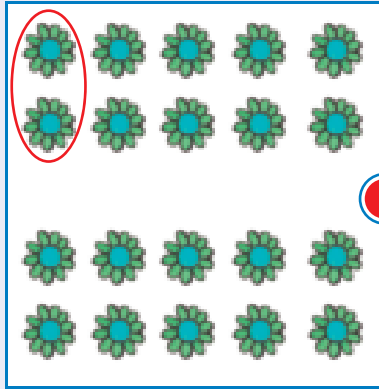


4







Yelanisa mintlawa ya swimbirhi na xivulwa xa tinomboro hi ku dirowa ntila.




$$2 + 2 + 2 + 2 = 8$$



$$2 + 2 + 2 + 2 + 2 + 2 + 2 = 14$$



$$2 + 2 + 2 + 2 + 2 + 2 + 2 + 2 + 2 + 2 = 20$$

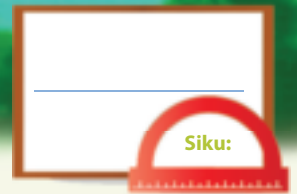


$$2 + 2 + 2 + 2 + 2 + 2 + 2 + 2 = 16$$



Teacher: _____
Sign: _____
Date: _____



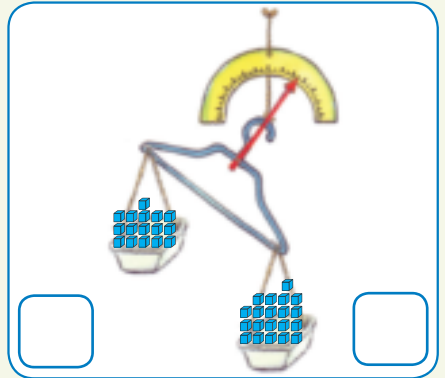
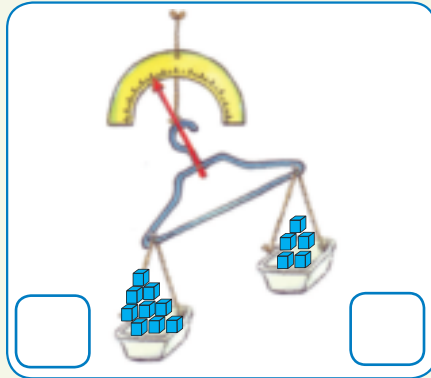
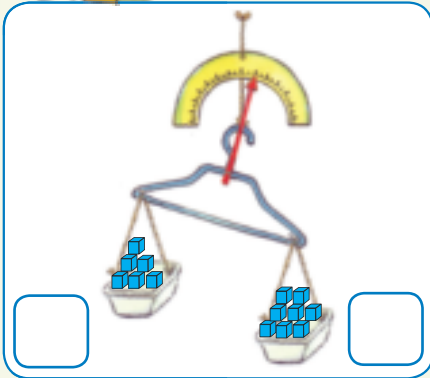


Masa (ntiko)

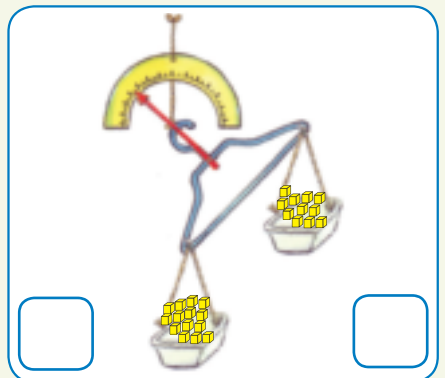
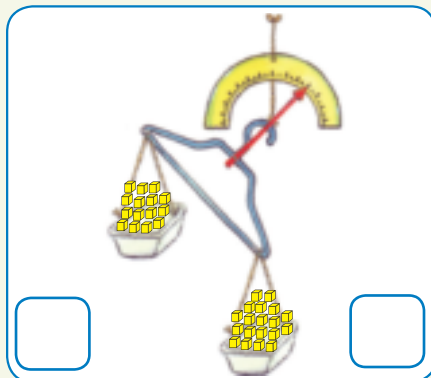
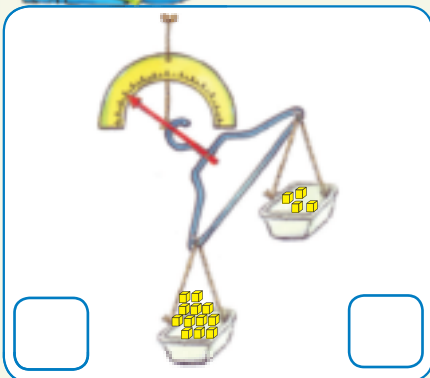
Kotara ya 4



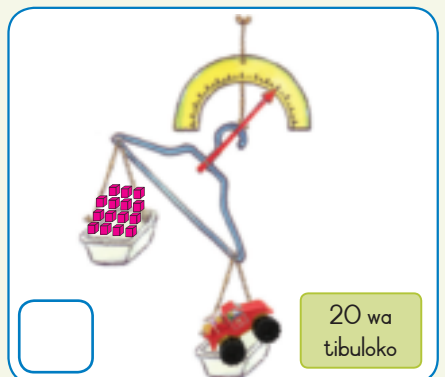
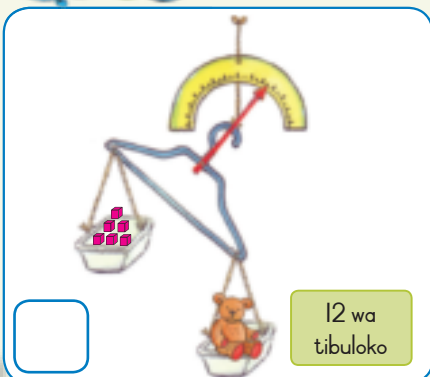
Tsala leswaku ku na tibuloko tingani eka xibye xin'wana na xin'wana. Bana xirhendzevutana eka xibye lexi tikaka.



Tsala leswaku ku na tibuloko tingani eka xibye xin'wana na xin'wana. Bana xirhendzevutana eka xibye lexi vevukaka.




Hlayela leswaku i tibuloko tingani leti nga kona. Kuma leswaku ku laveka tibuloko tin'wana tingani leswaku ti kota ku balansisa xitlangiso. Hi ku byela leswaku xitlangiso xi na ntiko wa tibuloko tingani.





Dirowa nchumu wo tika kumbe wo vevuka ku tlula tibuloko.



Tirhisa 5 wa minchumu eka desika ra wena. Rhanga u pimanyeta ntiko kutani endzhaku u pima eka xikalu kumbe u yi balansa ku kambisisa loko mpimanyeto wa wena wu lulamile.

Dirowa xanchumu	Bvumba	Masa	Ku hambana
	___ wa tibuloko	___ wa tibuloko	___ - ___ = ___

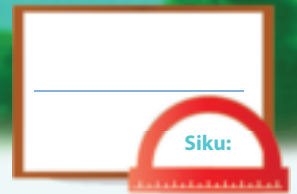


Teacher: _____

Sign: _____

Date: _____





Ku mbirihata

Kotara ya 4



Hlamula swivutiso leswi landzelaka:

Ku na swikwere swingani?

Ku na swikwere swingani sweswi?

Hi vula leswaku 12 kambirhi i 24.

Ku na milenge yingani?

Ku na milenge yingani sweswi?

Hi vula leswaku 6 kambirhi i

Ku na swikitele swingani?

Ku na swikitele swingani sweswi?

Hi vula leswaku 10 kambirhi i

Ku na masiku mangani evhikini?

S	M	T	W	T	F	S

Ku na masiku mangani eka mavhiki mambirhi?

S	M	T	W	T	F	S

Hi vula leswaku 7 kambirhi i

Ku na tikhirayoni tingani?

Ku na tikhirayoni tingani sweswi?

Hi vula leswaku 8 kambirhi i





Tatisa nhlamulo.

4 kambirhi	=	8
10 kambirhi	=	
11 kambirhi	=	
2 kambirhi	=	
6 kambirhi	=	



Tatisa nhlamulo.

Mbirhi kambirhi i	mune
Nharhu kambirhi i	
Mune kambirhi i	
Ntlhanu kambirhi i	
Ntsevu kambirhi i	
Nkombo kambirhi i	



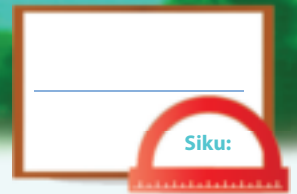
Hetisa tafula leri landzelaka.

$9 + 9 + 1 =$	<input type="text"/>	kumbe	Mbirhihata $9 + 1 =$	<input type="text"/>
	<input type="text"/>	kumbe	Mbirhihata $8 + 1 =$	<input type="text"/>
$10 + 10 + 1 =$	<input type="text"/>	kumbe		<input type="text"/>
$7 + 7 + 1 =$	<input type="text"/>	kumbe	Mbirhihata $7 + 1 =$	<input type="text"/>



Teacher:
Sign:
Date:





Ku hafula

Kotara ya 4



Hlamula swivutiso leswi landzelaka:

Ku na swikwere swingani?

Ku na swikere swingani sweswi?

Hi vula leswaku hafu ya 24 i 12.

Ku na milenge yingani?

Ku na milenge yingani sweswi?

Hi vula leswaku hafu ya 12

Ku na swikitele swingani?

Ku na swikitele swingani sweswi?

Hi vula leswaku hafu ya 20 i

Ku na masiku mangani eka 2 wa mavhiki?

S	M	T	W	T	F	S	S	M	T	W	T	F	S

Ku na masiku mangani eka vhiki rin'we?

S	M	T	W	T	F	S

Hi vula leswaku hafu ya 14 i

Ku na tikhirayoni tingani?

Ku na tikhirayoni tingani sweswi?

Hi vula leswaku hafu ya 16 i





Tatisa nhlamulo
leyi faneleke.

Hafu ya 8	=	4
Hafu ya 10	=	
Hafu ya 6	=	
Hafu ya 12	=	
Hafu ya 14	=	



Tatisa nhlamulo leyi faneleke.

Hafu ya mune i	mbirhi
Hafu ya ntsevu i	
Hafu ya mbirhi i	
Hafu ya nhungu i	
Hafu ya khume i	

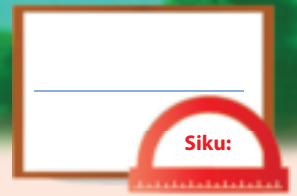


Tatisa nhlamulo leyi faneleke.

Hafu ya 10 i	5
Hafu ya 12 i	
Hafu ya 14 i	
Hafu ya 16 i	
Hafu ya 18 i	



Teacher: _____
Sign: _____
Date: _____

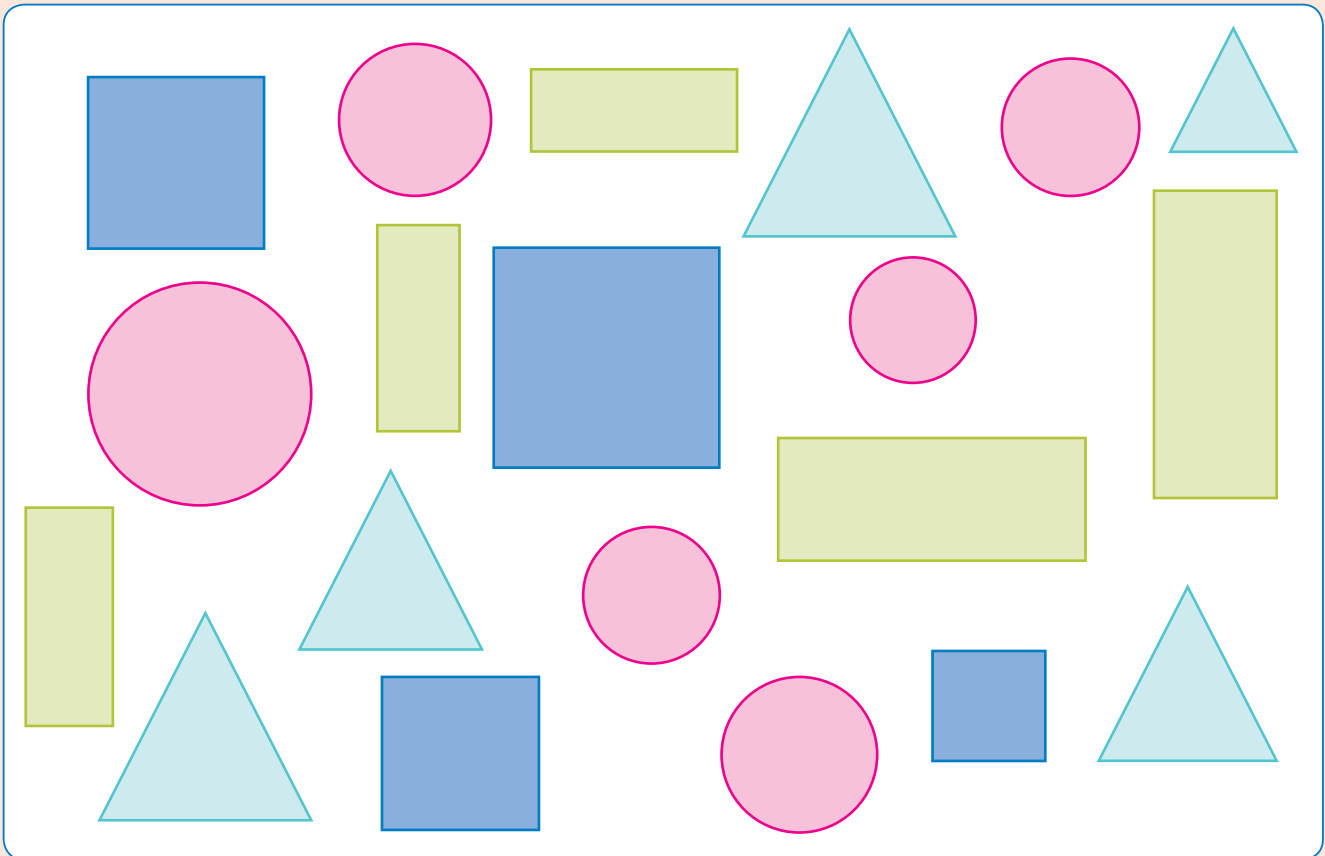


Switiviwa



Hlayela leswaku ku na swivumbeko swo hambana swingani kutani u hlamula swivutiso leswi landzelaka.

Kotara ya 4



1. Ku na swikwere  swingani?

2. Ku na tiyinhlanharhu  tingani?

3. Ku na tiyinhlamune  tingani?


4. Ku na swirhendzevutana  swingani?



Mihandzu leyi yi hlawuriwile hi 20 wa vanghana va wena.
Hlawula mihandzu u tlhela u dirowa xifaniso xa mihandzu leyi u yi
hlawuleke eka girafu ya swifaniso endzhaku u hlamula swivutiso
leswi nga laha hansi.

Mihandzu leyi hi yi rhandzaka swinene

Xiletelo =



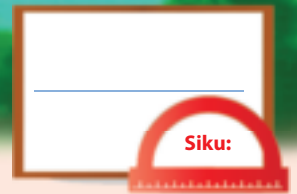
Xitiroberi	Apula	Pyere	Banana	Lamula

I vana vangani lava rhandzaka switiroberi?	
I vana vangani lava rhandzaka maapula?	
I vana vangani lava rhandzaka mapyere?	
I vana vangani lava rhandzaka mabanana?	
I vana vangani lava rhandzaka malamula?	
Hi wihi muhandzu lowu vana va wu rhandzaka swinene?	
Hi wihi muhandzu lowu vana va nga wu rhandziki?	



Teacher:
Sign:
Date:





Switiviwa swin'wana

Kotara ya 4



Vana etlilasini va na switlangiso leswi landzelaka.
Va na switlangiso swingani swa rixaka rin'wana na rin'wana?



Hetisa tafula leri landzelaka.

Xitlangiso	Nhlayo
Swipopana	
Swilorana	
Tithedi	
Tirhoboto	






Hetisa girafu ya swifaniso hi ku dirowa nhlayo leyi faneleke ya swifaniso swa vanhu va tinhonga eka rixaka rin'wana na rin'wana ra xitlangiso.

Switlangiso leswi hi nga na swona

Xiletelo =



Swipopana	Swilorana	Tithedi bere	Tirhoboto



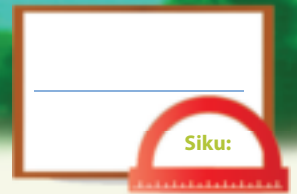
Hlamula swivutiso leswi landzelaka. Languta girafu ya swifaniso leswaku u kota ku pfuneka.

I vana vangani lava nga na xipopana?	
I vana vangani lava nga na xilorana?	
I vana vangani lava nga na thedi bere?	
I vana vangani lava nga na rhoboto?	
Hi xihhi xitlangiso lexi rhandziwaka swinene?	
Hi xihhi xitlangiso lexi nga rhandziwiki?	



Teacher:
Sign:
Date:



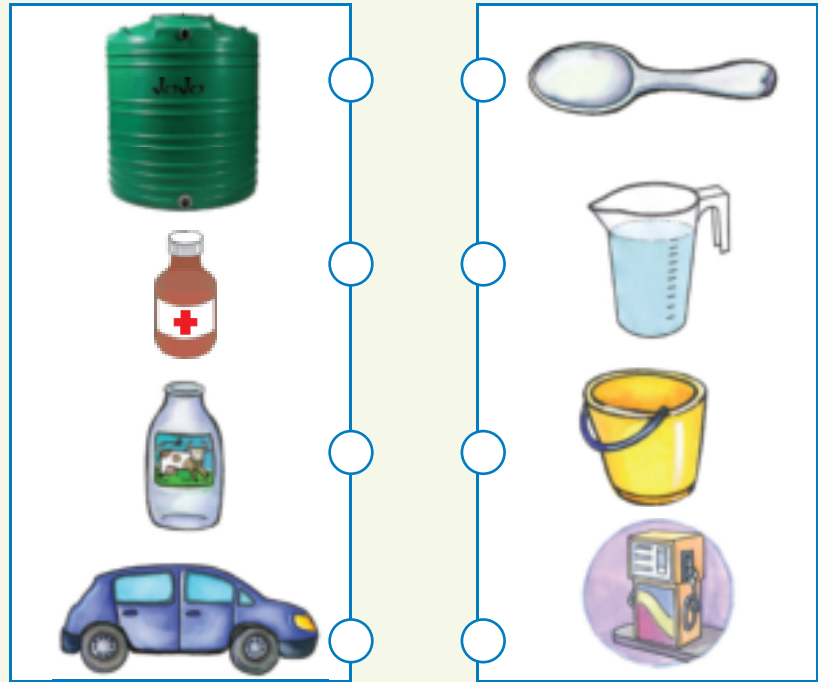


Vundzeni


Kotara ya 4




Swihalaki hi swi pimisa ku yini?
Dirowa ntila u yelanisa xanchumu
na xipimo lexi faneleke.




Gwajula xibye lexi
khomaka switsongu.



Gwajula xibye lexi
khomaka swo tala.

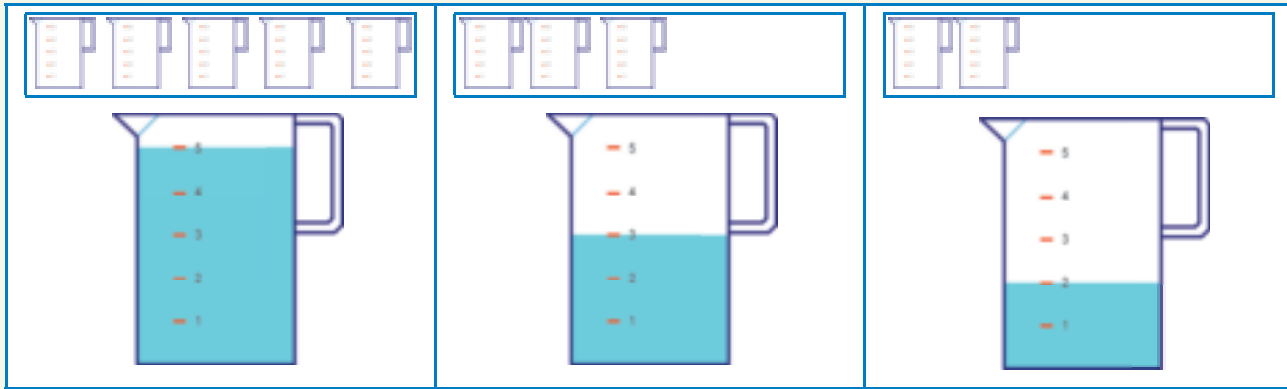


Xana swibye swi
tele kumbe swi hava
nchumu?

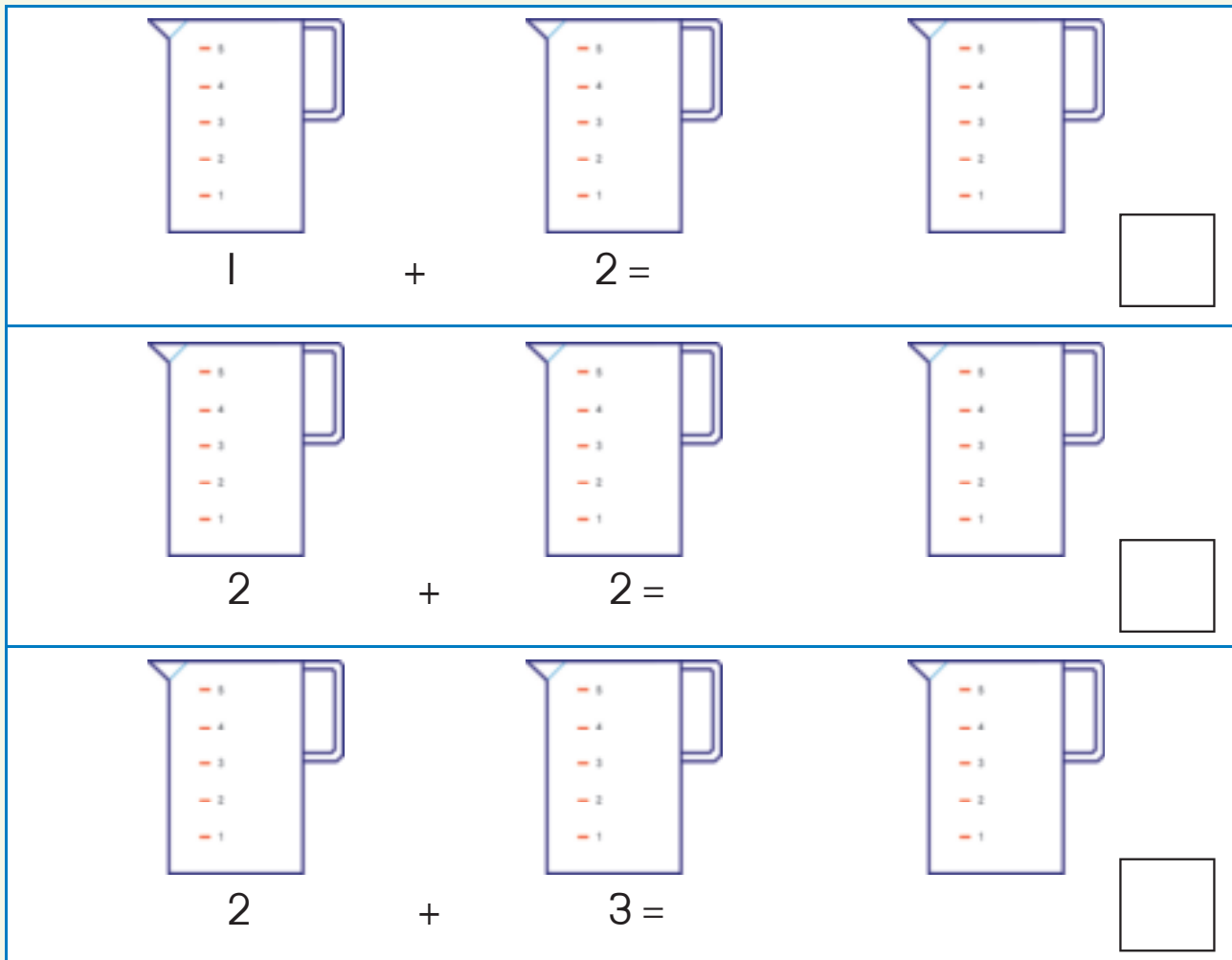




U fanele ku va na tikhapu ta ntlhanu ku kota ku tata jeke yin'we.
U fanele ku kuma tikhapu tin'wana tingani leswaku u kota ku
tata tijeke tin'wana timbirhi? Ti dirowe.

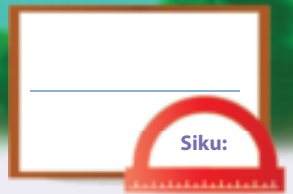


Khalara ntalo wa swihalaki lowu faneleke.



Teacher: _____
Sign: _____
Date: _____





Tipatironi ta jometiri

Kotara ya 4



Hetisa tipatironi leti landzelaka.

▲	▲	●	▲	▲	●			
---	---	---	---	---	---	--	--	--

▼	▼	■	■					▼	▼	■	■
---	---	---	---	--	--	--	--	---	---	---	---

▼	▼	●	●	▼	▼	●	●				
---	---	---	---	---	---	---	---	--	--	--	--

▲	▲			▲	▲	■	■			■	■
---	---	--	--	---	---	---	---	--	--	---	---

A	B	C	D	A	B	C	D				
---	---	---	---	---	---	---	---	--	--	--	--

A	B	B	A	B	B		B	B	A		
---	---	---	---	---	---	--	---	---	---	--	--

A	B	C	A	B	C				A	B	C
---	---	---	---	---	---	--	--	--	---	---	---

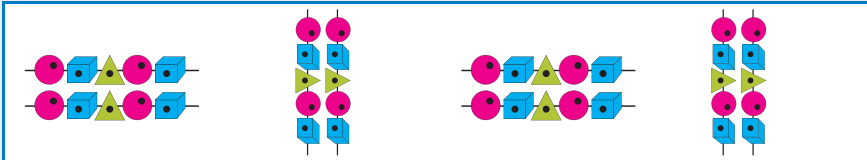
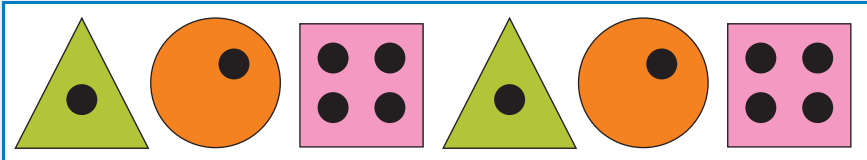
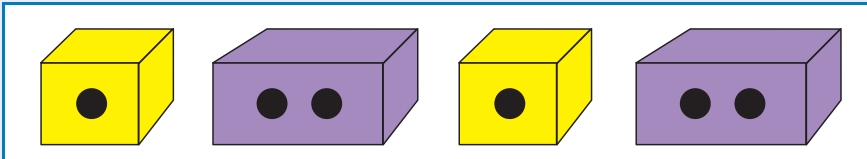
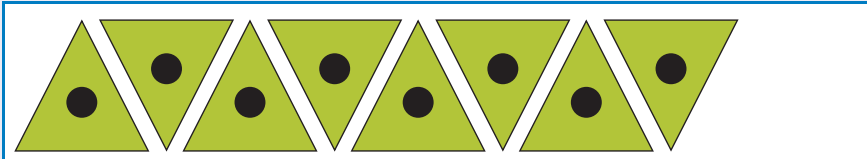
A	D	A	D	A	D			A	D		
---	---	---	---	---	---	--	--	---	---	--	--

●	●	●	●		●	●	●	●	■
---	---	---	---	--	---	---	---	---	---







Engetela patironi.

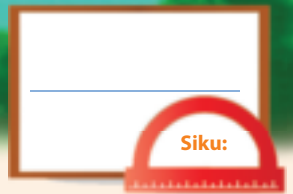


Tumbuluxa tipatironi ta wena u tirhisa swirhendzevutana, swikwere na tiyinhlanharhu.



Teacher:
Sign:
Date:



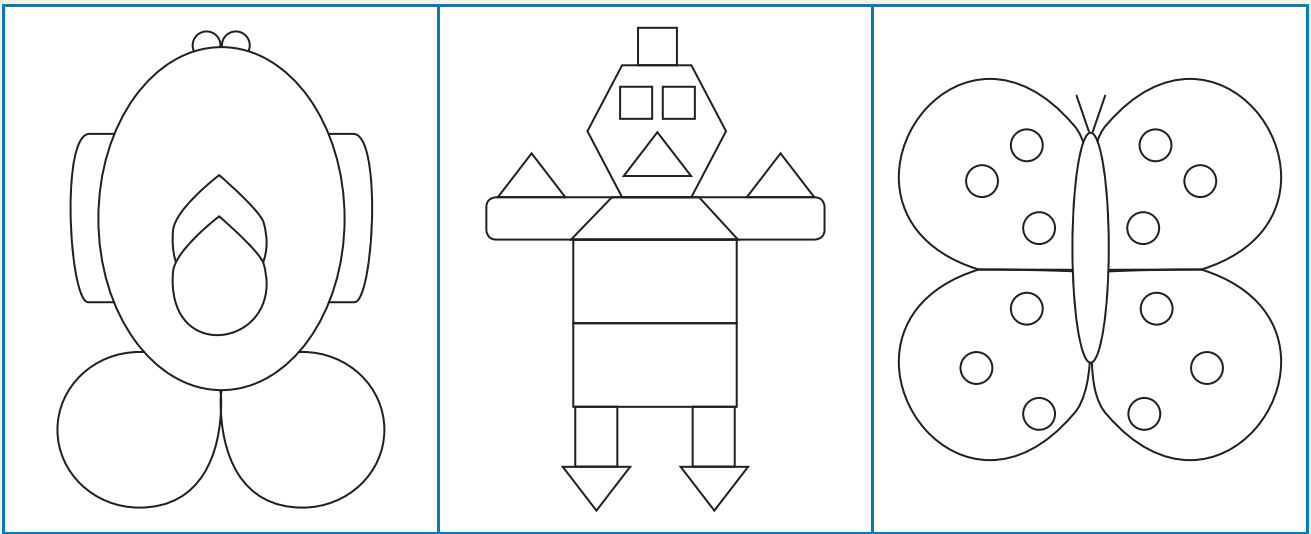


Ndzingano




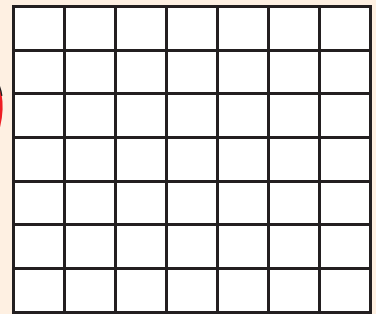


Kotara ya 4



Dirowa ntila wa ndzinganiso lowu avanyisaka xifaniso eka tihafu timbirhi leti ringanaka. Khalara hafu yin'we ya xifaniso xin'wana na xin'wana.



Kopunula swivumbeko u tlhela u dirowa ntila wa ndzinganiso.





Hetisa xifaniso hi ku dirowa hafu yin'wana.



Dirowa hafu yin'wana ya xivumbeko.

--	--	--	--

Teacher: _____
 Sign: _____
 Date: _____



Tinotsi



A large white rectangular area with horizontal blue lines for writing. A vertical red line is positioned on the left side, creating a margin. The writing area is set against a light blue background.

Tinotsi



A large white rectangular area with horizontal blue lines for writing. A vertical red line is positioned on the left side, creating a margin. The writing area is set against a light blue background.



Tinotsi







A large white rectangular area with a vertical red margin line on the left and horizontal blue lines for writing.



Cut-out 1

Worksheet 79





Cut out cards 2

Worksheet 83

45	50	40	40	30	35
----	----	----	----	----	----

Worksheet 84

70	65	75	80	70	60
----	----	----	----	----	----

Worksheet 93

34	46	40	44	36	50	32		
42	48	38						
62	74	66	68	64	76	80	72	78

Worksheet 115

72	78	82	84	86	74	80
76	88	90				

Worksheet 119

62	72	64	74	86	66	78	80	68
82	94	86	90	84	96	100		
92	98	88						

